



Resuelve cada problema.

Respuestas

1) $2 + 1 = \underline{\quad}$

2) $4 + 1 = \underline{\quad}$

1. _____

3) $2 + 0 = \underline{\quad}$

4) $2 + 2 = \underline{\quad}$

2. _____

5) $1 + 1 = \underline{\quad}$

6) $3 + 0 = \underline{\quad}$

3. _____

4. _____

5. _____

7) $3 + 2 = \underline{\quad}$

8) $1 + 3 = \underline{\quad}$

6. _____

7. _____

8. _____

9) $3 - 2 = \underline{\quad}$

10) $5 - 5 = \underline{\quad}$

9. _____

10. _____

11. _____

12. _____

11) $5 - 4 = \underline{\quad}$

12) $5 - 3 = \underline{\quad}$

13. _____

14. _____

15. _____

13) $4 - 4 = \underline{\quad}$

14) $2 - 1 = \underline{\quad}$

16. _____

15) $3 - 1 = \underline{\quad}$

16) $2 - 2 = \underline{\quad}$



Resuelve cada problema.

1) $2 + 1 = \underline{3}$

2) $4 + 1 = \underline{5}$

3) $2 + 0 = \underline{2}$

4) $2 + 2 = \underline{4}$

5) $1 + 1 = \underline{2}$

6) $3 + 0 = \underline{3}$

7) $3 + 2 = \underline{5}$

8) $1 + 3 = \underline{4}$

9) $3 - 2 = \underline{1}$

10) $5 - 5 = \underline{0}$

11) $5 - 4 = \underline{1}$

12) $5 - 3 = \underline{2}$

13) $4 - 4 = \underline{0}$

14) $2 - 1 = \underline{1}$

15) $3 - 1 = \underline{2}$



16) $2 - 2 = \underline{0}$



Respuestas1. 32. 53. 24. 45. 26. 37. 58. 49. 110. 011. 112. 213. 014. 115. 216. 0






Resuelve cada problema.



Respuestas


1) $2 + 1 = \underline{\quad}$
 + 


2) $4 + 1 = \underline{\quad}$
 + 



3) $2 + 0 = \underline{\quad}$



4) $2 + 2 = \underline{\quad}$
 + 


5) $1 + 1 = \underline{\quad}$
 + 


6) $3 + 0 = \underline{\quad}$



7) $3 + 2 = \underline{\quad}$



8) $1 + 3 = \underline{\quad}$
 + 



9) $3 - 2 = \underline{\quad}$



10) $5 - 5 = \underline{\quad}$




11) $5 - 4 = \underline{\quad}$


12) $5 - 3 = \underline{\quad}$


13) $4 - 4 = \underline{\quad}$


14) $2 - 1 = \underline{\quad}$
 - 

15) $3 - 1 = \underline{\quad}$


16) $2 - 2 = \underline{\quad}$
 - 

1. _____
2. _____
3. _____
4. _____
5. _____
6. _____
7. _____
8. _____
9. _____
10. _____
11. _____
12. _____
13. _____
14. _____
15. _____
16. _____