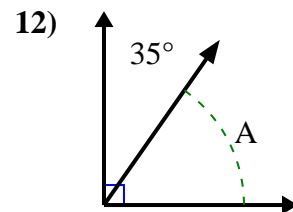
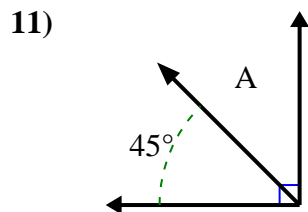
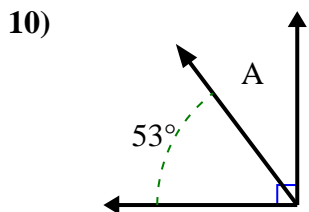
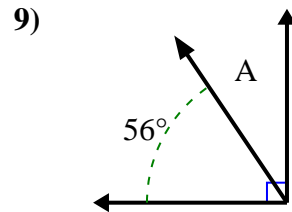
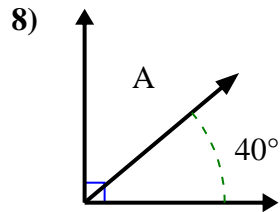
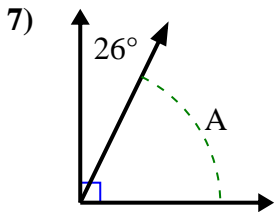
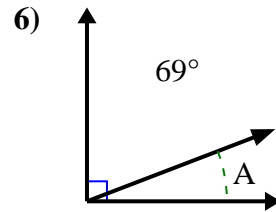
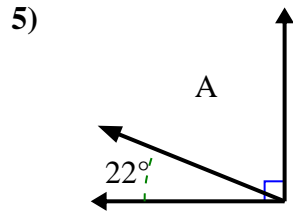
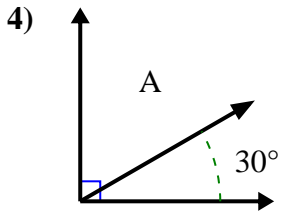
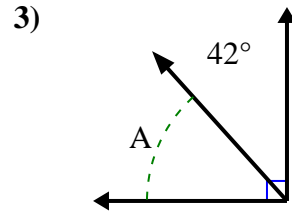
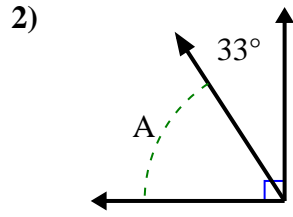
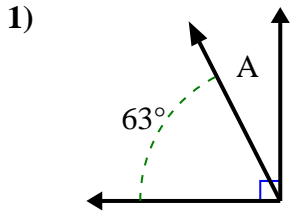




Encuentra el valor de 'A' en el conjunto de ángulos complementarios.

**Respuestas**

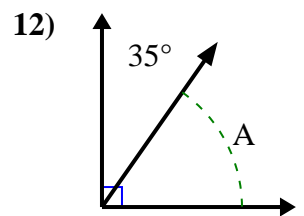
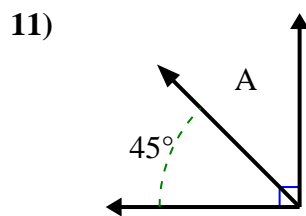
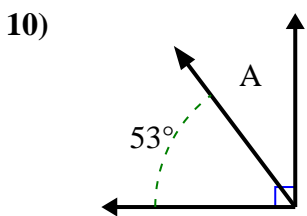
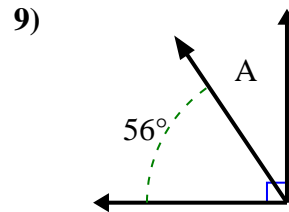
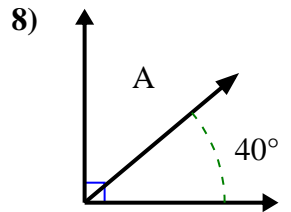
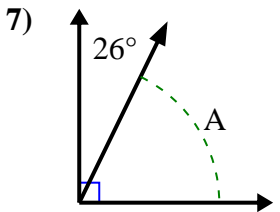
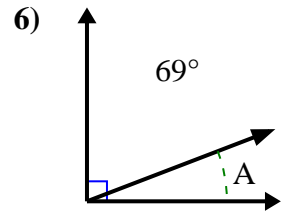
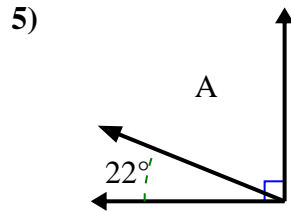
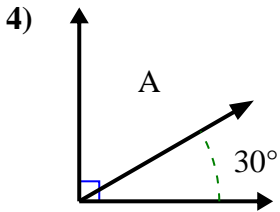
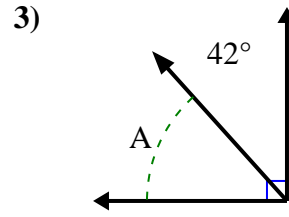
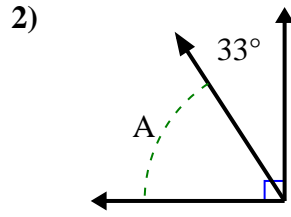
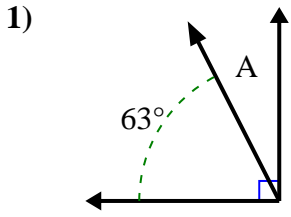


1. \_\_\_\_\_
2. \_\_\_\_\_
3. \_\_\_\_\_
4. \_\_\_\_\_
5. \_\_\_\_\_
6. \_\_\_\_\_
7. \_\_\_\_\_
8. \_\_\_\_\_
9. \_\_\_\_\_
10. \_\_\_\_\_
11. \_\_\_\_\_
12. \_\_\_\_\_



Encuentra el valor de 'A' en el conjunto de ángulos complementarios.

**Respuestas**



1. 27°

2. 57°

3. 48°

4. 60°

5. 68°

6. 21°

7. 64°

8. 50°

9. 34°

10. 37°

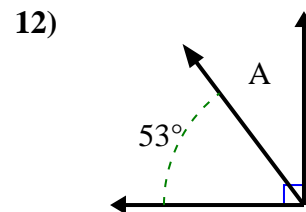
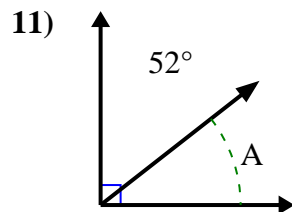
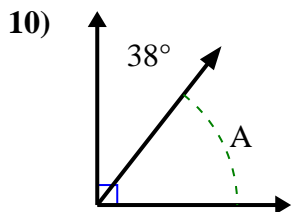
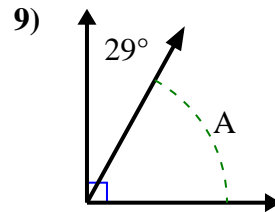
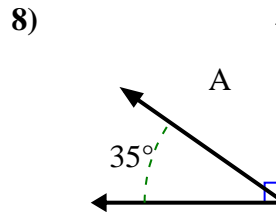
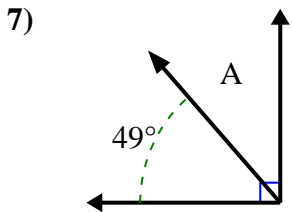
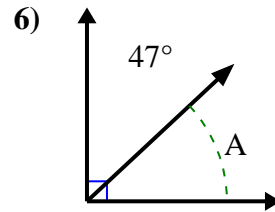
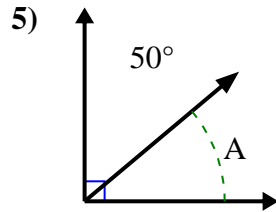
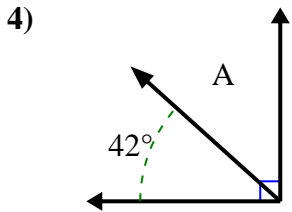
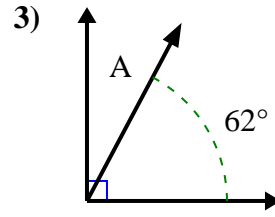
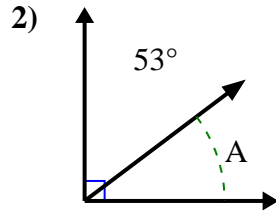
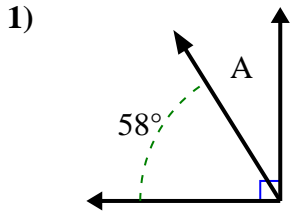
11. 45°

12. 55°



Encuentra el valor de 'A' en el conjunto de ángulos complementarios.

**Respuestas**

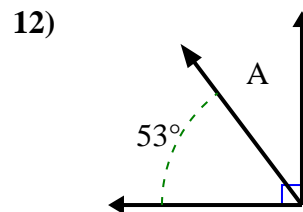
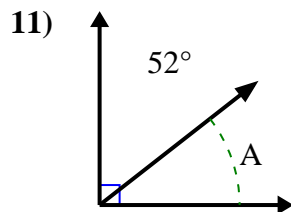
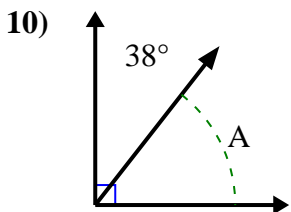
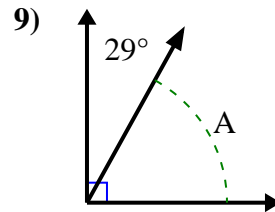
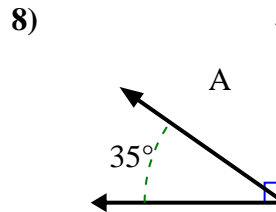
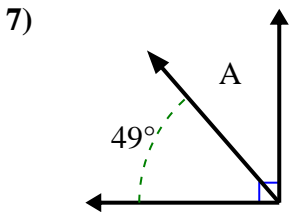
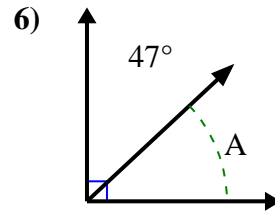
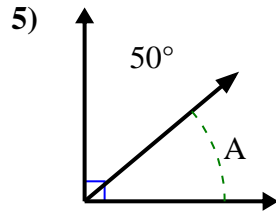
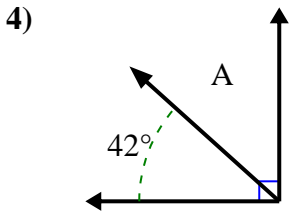
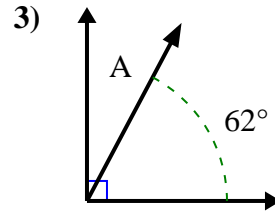
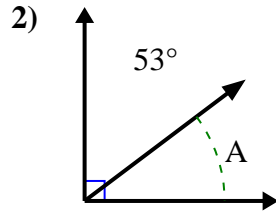
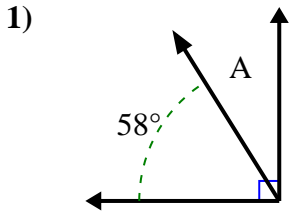


1. \_\_\_\_\_
2. \_\_\_\_\_
3. \_\_\_\_\_
4. \_\_\_\_\_
5. \_\_\_\_\_
6. \_\_\_\_\_
7. \_\_\_\_\_
8. \_\_\_\_\_
9. \_\_\_\_\_
10. \_\_\_\_\_
11. \_\_\_\_\_
12. \_\_\_\_\_



Encuentra el valor de 'A' en el conjunto de ángulos complementarios.

**Respuestas**



1. 32°

2. 37°

3. 28°

4. 48°

5. 40°

6. 43°

7. 41°

8. 55°

9. 61°

10. 52°

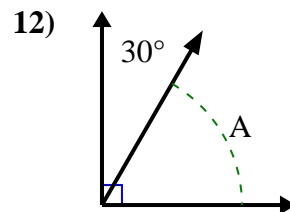
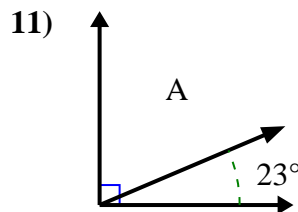
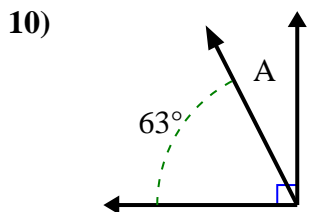
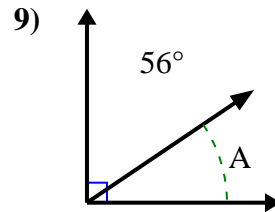
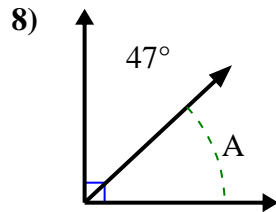
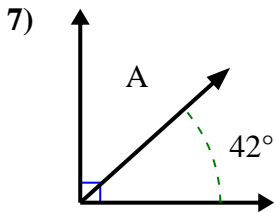
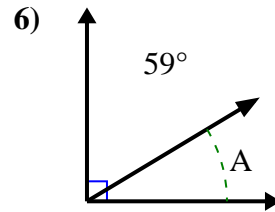
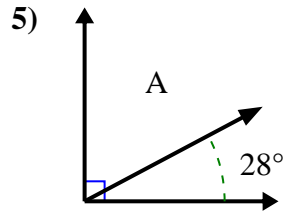
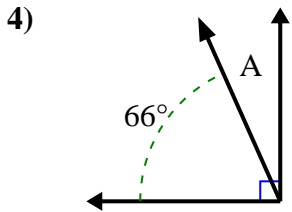
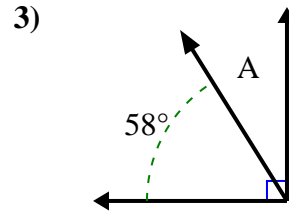
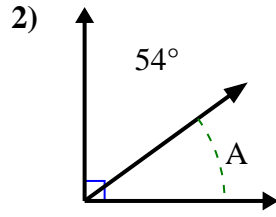
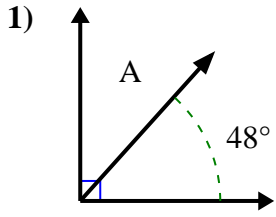
11. 38°

12. 37°



Encuentra el valor de 'A' en el conjunto de ángulos complementarios.

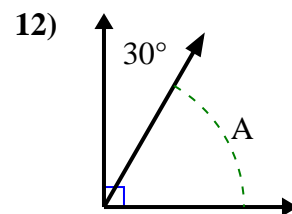
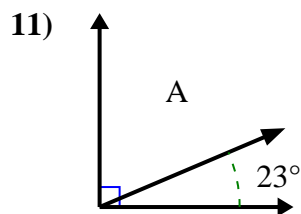
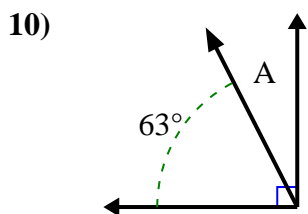
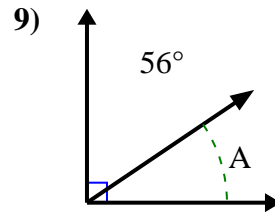
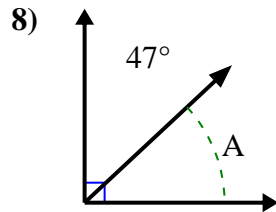
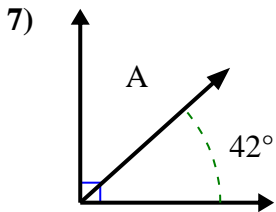
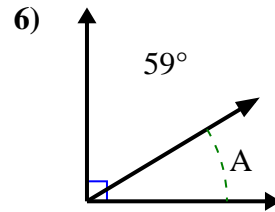
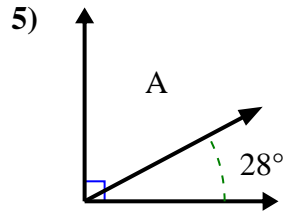
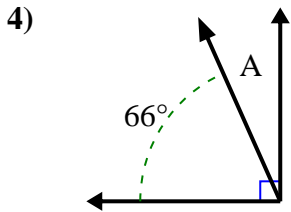
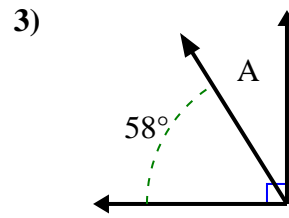
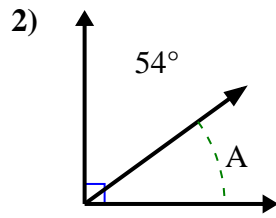
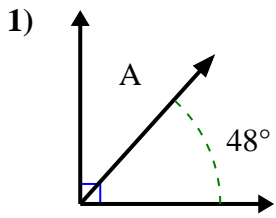
**Respuestas**



1. \_\_\_\_\_
2. \_\_\_\_\_
3. \_\_\_\_\_
4. \_\_\_\_\_
5. \_\_\_\_\_
6. \_\_\_\_\_
7. \_\_\_\_\_
8. \_\_\_\_\_
9. \_\_\_\_\_
10. \_\_\_\_\_
11. \_\_\_\_\_
12. \_\_\_\_\_



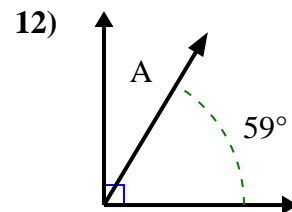
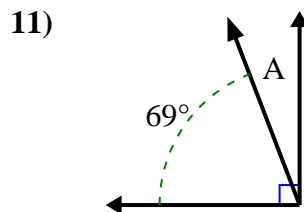
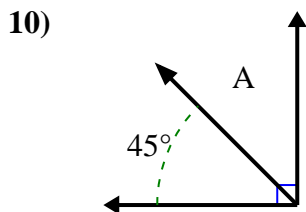
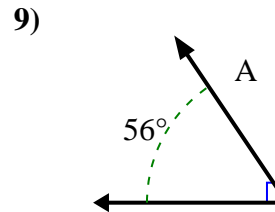
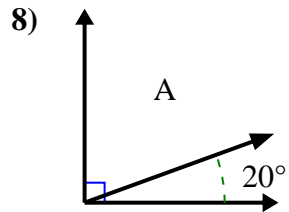
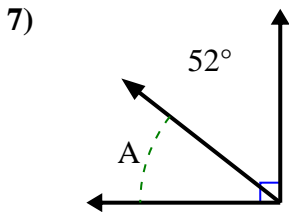
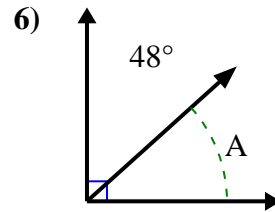
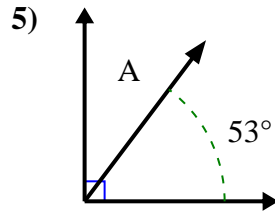
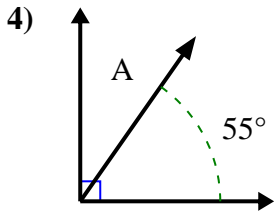
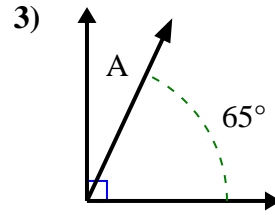
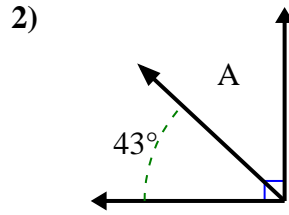
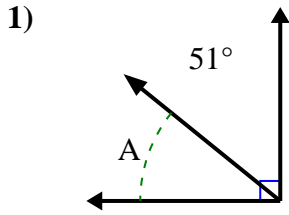
Encuentra el valor de 'A' en el conjunto de ángulos complementarios.

**Respuestas**1. **42°**2. **36°**3. **32°**4. **24°**5. **62°**6. **31°**7. **48°**8. **43°**9. **34°**10. **27°**11. **67°**12. **60°**



Encuentra el valor de 'A' en el conjunto de ángulos complementarios.

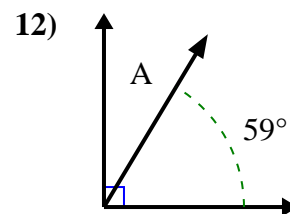
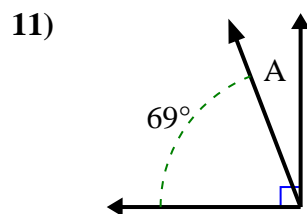
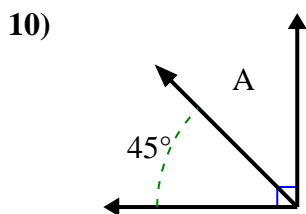
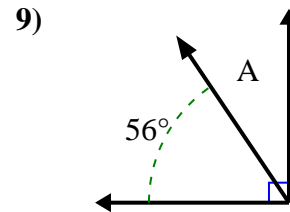
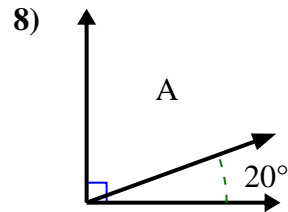
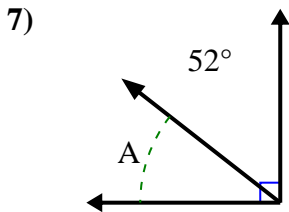
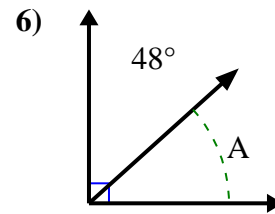
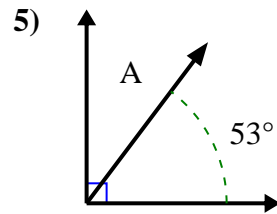
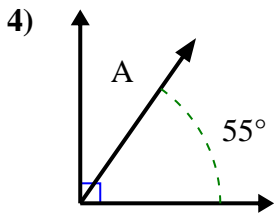
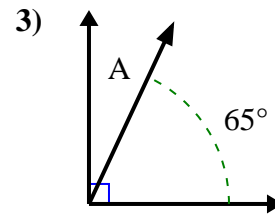
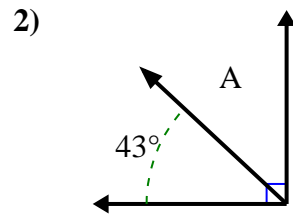
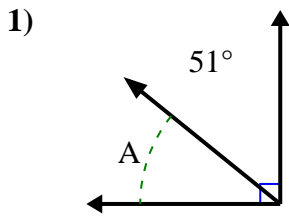
**Respuestas**



1. \_\_\_\_\_
2. \_\_\_\_\_
3. \_\_\_\_\_
4. \_\_\_\_\_
5. \_\_\_\_\_
6. \_\_\_\_\_
7. \_\_\_\_\_
8. \_\_\_\_\_
9. \_\_\_\_\_
10. \_\_\_\_\_
11. \_\_\_\_\_
12. \_\_\_\_\_



Encuentra el valor de 'A' en el conjunto de ángulos complementarios.

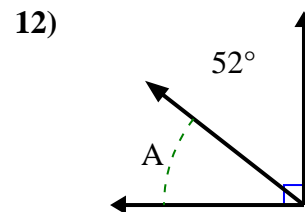
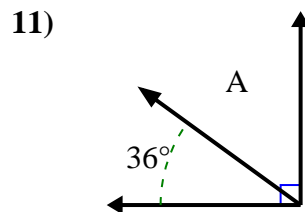
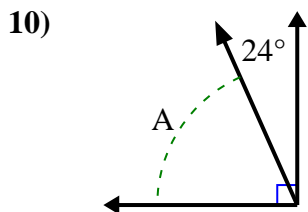
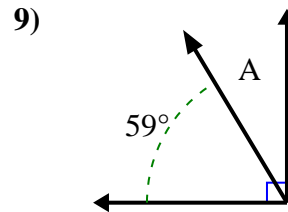
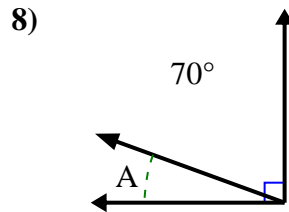
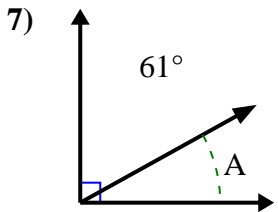
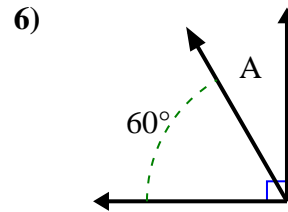
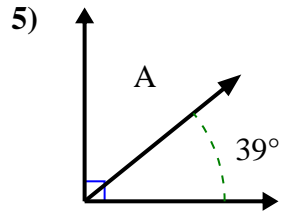
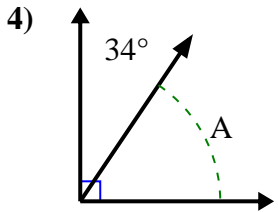
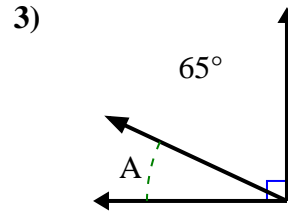
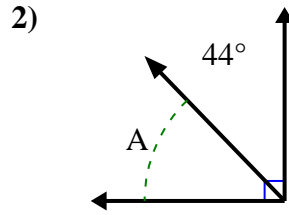
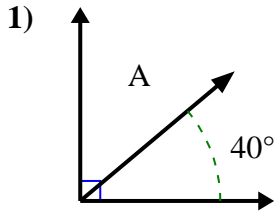
**Respuestas**1. 39°2. 47°3. 25°4. 35°5. 37°6. 42°7. 38°8. 70°9. 34°10. 45°11. 21°12. 31°





Encuentra el valor de 'A' en el conjunto de ángulos complementarios.

**Respuestas**

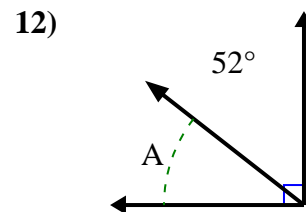
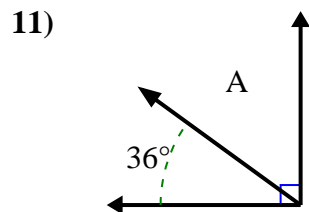
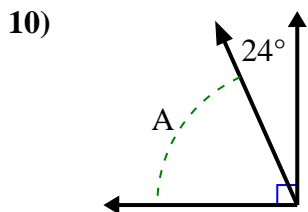
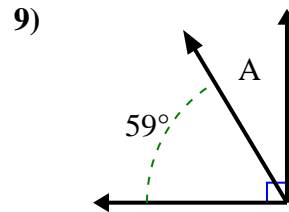
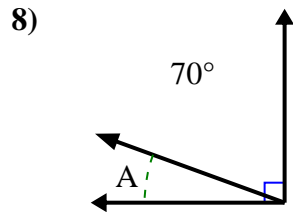
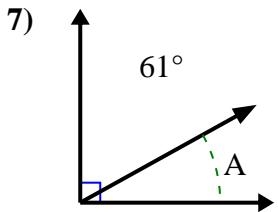
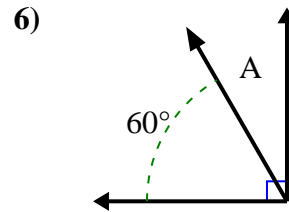
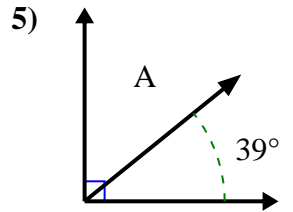
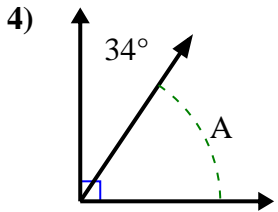
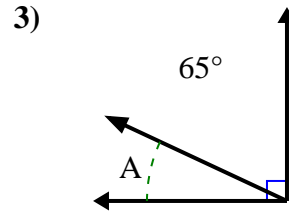
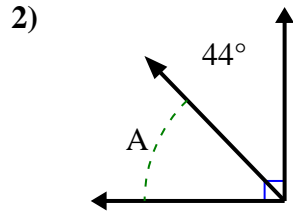
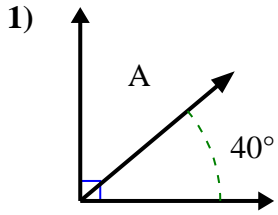


1. \_\_\_\_\_
2. \_\_\_\_\_
3. \_\_\_\_\_
4. \_\_\_\_\_
5. \_\_\_\_\_
6. \_\_\_\_\_
7. \_\_\_\_\_
8. \_\_\_\_\_
9. \_\_\_\_\_
10. \_\_\_\_\_
11. \_\_\_\_\_
12. \_\_\_\_\_



Encuentra el valor de 'A' en el conjunto de ángulos complementarios.

**Respuestas**



1. 50°

2. 46°

3. 25°

4. 56°

5. 51°

6. 30°

7. 29°

8. 20°

9. 31°

10. 66°

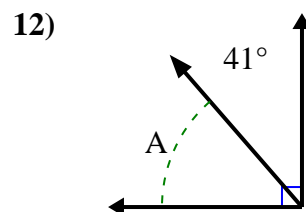
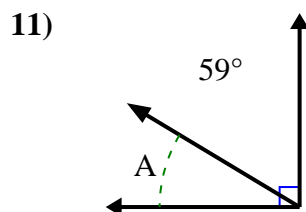
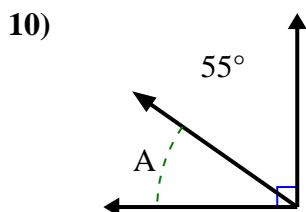
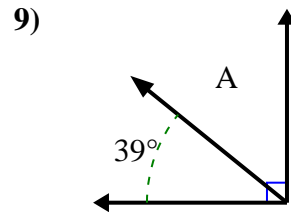
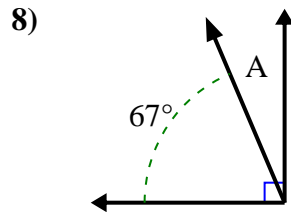
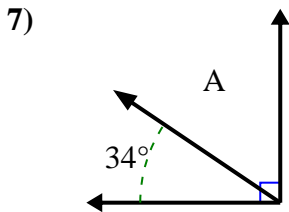
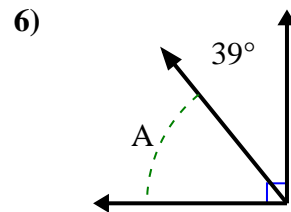
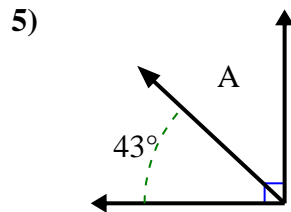
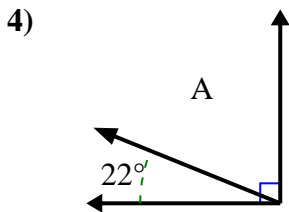
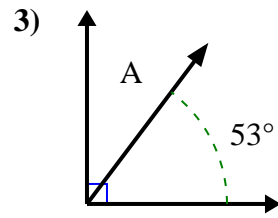
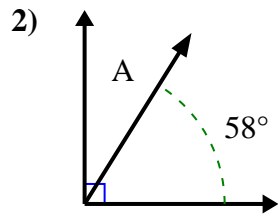
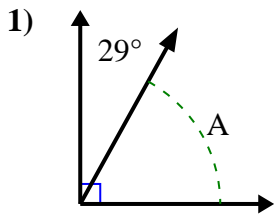
11. 54°

12. 38°



Encuentra el valor de 'A' en el conjunto de ángulos complementarios.

**Respuestas**

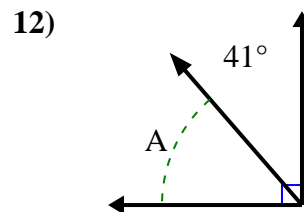
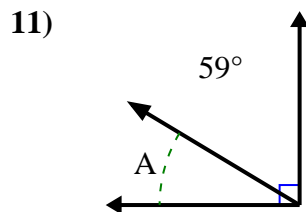
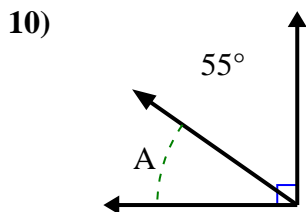
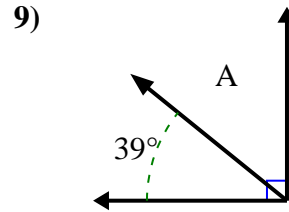
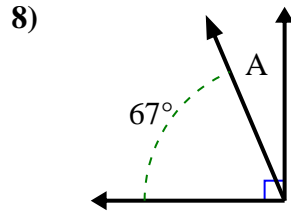
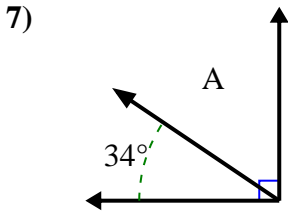
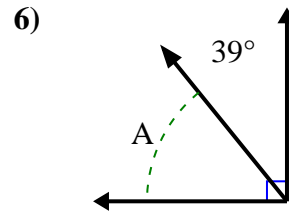
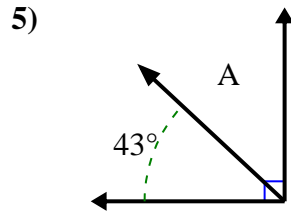
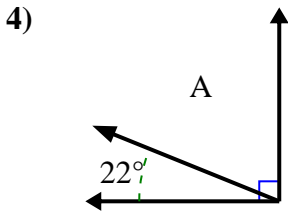
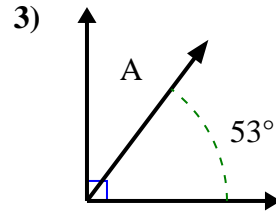
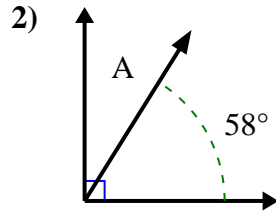
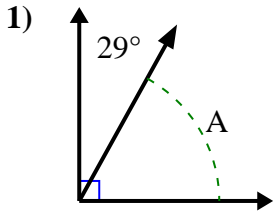


1. \_\_\_\_\_
2. \_\_\_\_\_
3. \_\_\_\_\_
4. \_\_\_\_\_
5. \_\_\_\_\_
6. \_\_\_\_\_
7. \_\_\_\_\_
8. \_\_\_\_\_
9. \_\_\_\_\_
10. \_\_\_\_\_
11. \_\_\_\_\_
12. \_\_\_\_\_



Encuentra el valor de 'A' en el conjunto de ángulos complementarios.

**Respuestas**



1. 61°

2. 32°

3. 37°

4. 68°

5. 47°

6. 51°

7. 56°

8. 23°

9. 51°

10. 35°

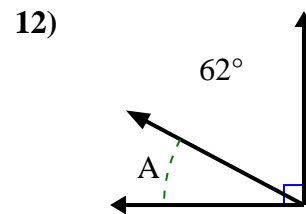
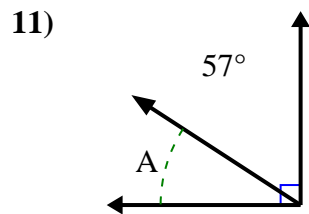
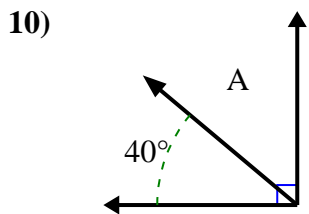
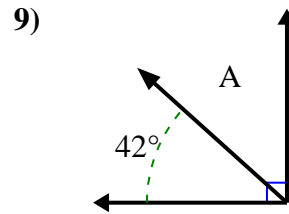
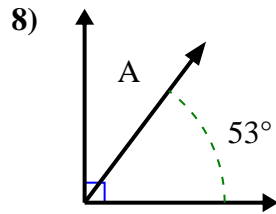
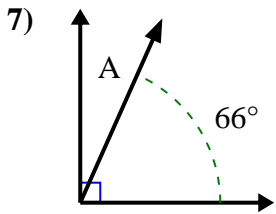
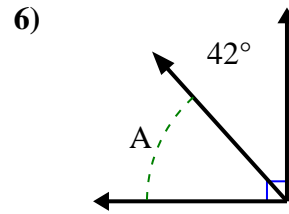
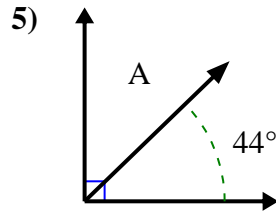
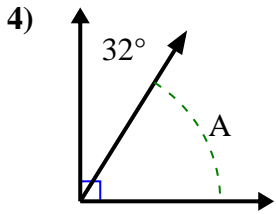
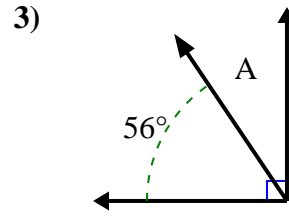
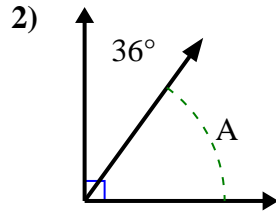
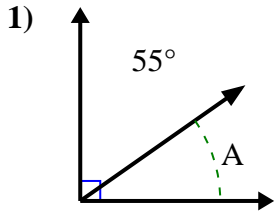
11. 31°

12. 49°



Encuentra el valor de 'A' en el conjunto de ángulos complementarios.

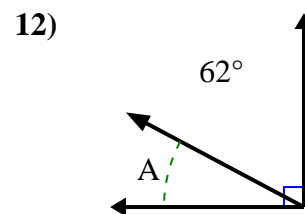
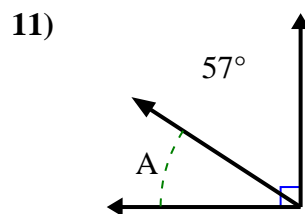
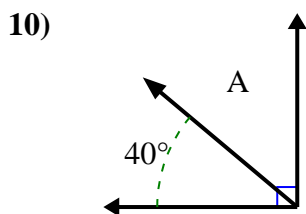
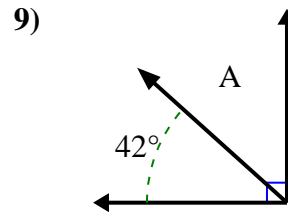
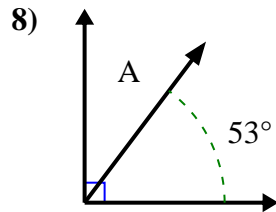
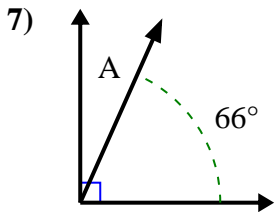
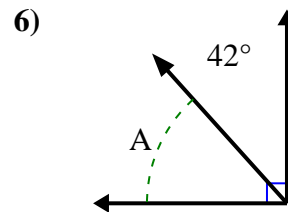
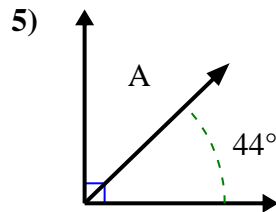
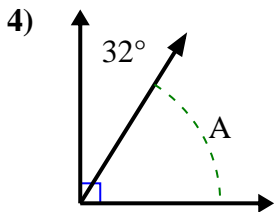
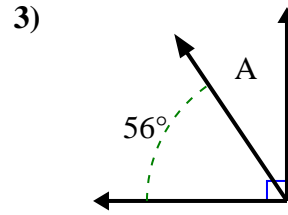
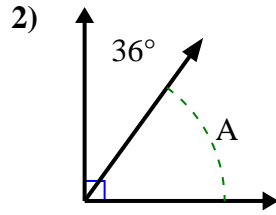
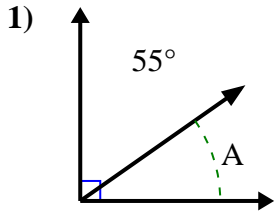
**Respuestas**



1. \_\_\_\_\_
2. \_\_\_\_\_
3. \_\_\_\_\_
4. \_\_\_\_\_
5. \_\_\_\_\_
6. \_\_\_\_\_
7. \_\_\_\_\_
8. \_\_\_\_\_
9. \_\_\_\_\_
10. \_\_\_\_\_
11. \_\_\_\_\_
12. \_\_\_\_\_



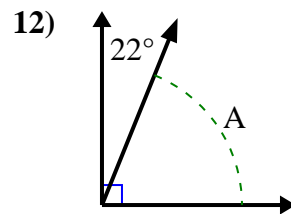
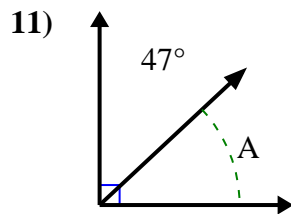
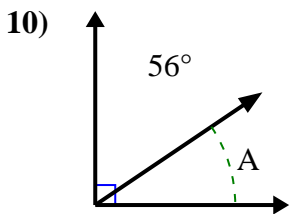
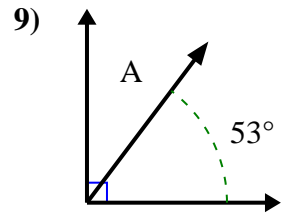
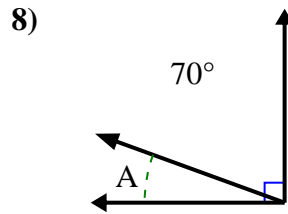
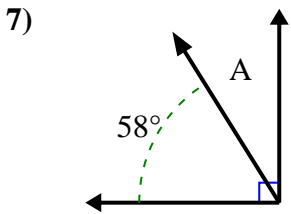
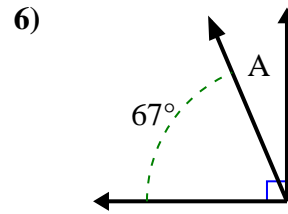
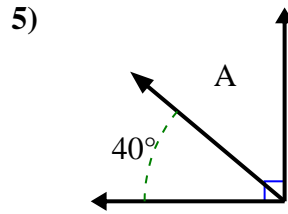
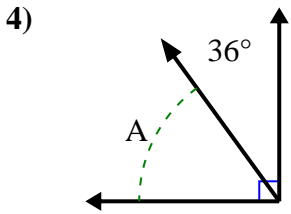
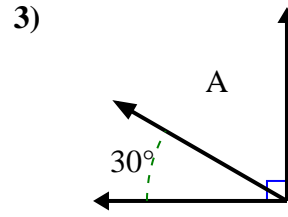
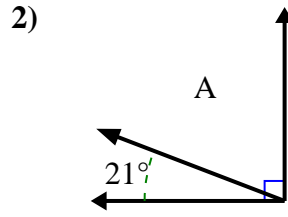
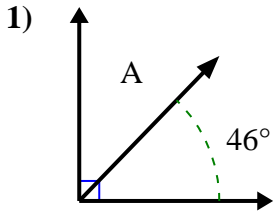
Encuentra el valor de 'A' en el conjunto de ángulos complementarios.

**Respuestas**1. 35°2. 54°3. 34°4. 58°5. 46°6. 48°7. 24°8. 37°9. 48°10. 50°11. 33°12. 28°



Encuentra el valor de 'A' en el conjunto de ángulos complementarios.

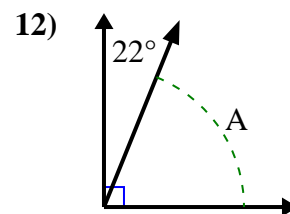
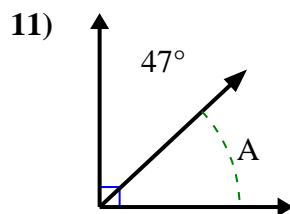
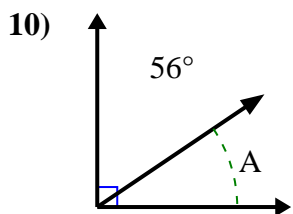
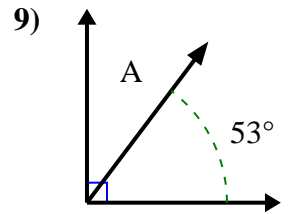
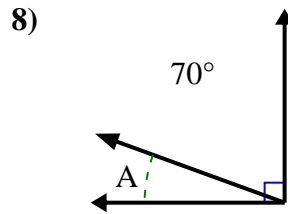
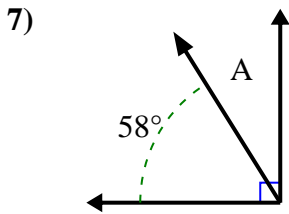
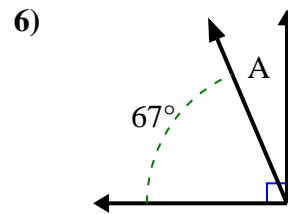
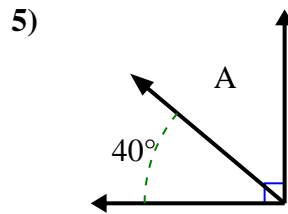
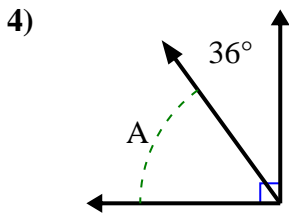
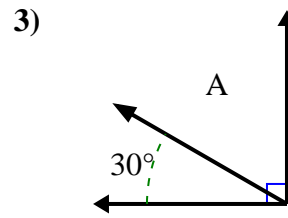
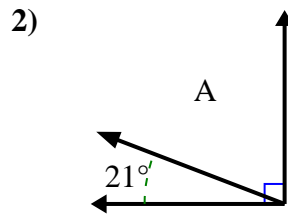
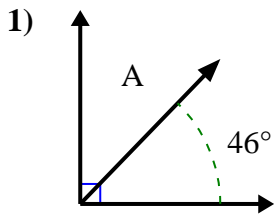
**Respuestas**



1. \_\_\_\_\_
2. \_\_\_\_\_
3. \_\_\_\_\_
4. \_\_\_\_\_
5. \_\_\_\_\_
6. \_\_\_\_\_
7. \_\_\_\_\_
8. \_\_\_\_\_
9. \_\_\_\_\_
10. \_\_\_\_\_
11. \_\_\_\_\_
12. \_\_\_\_\_



Encuentra el valor de 'A' en el conjunto de ángulos complementarios.

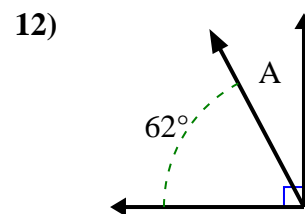
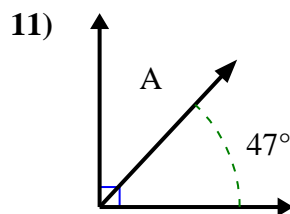
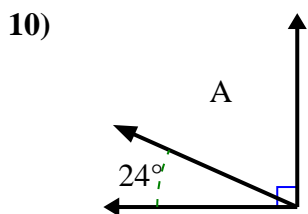
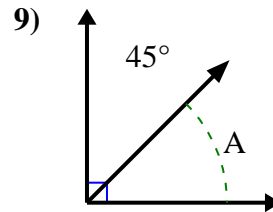
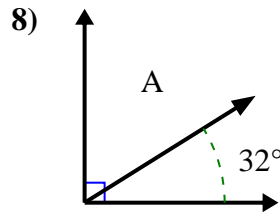
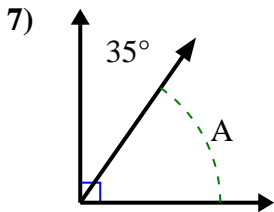
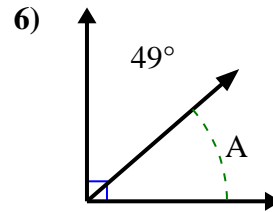
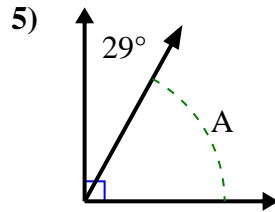
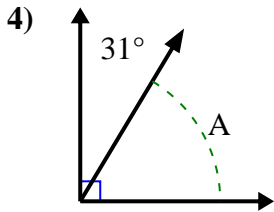
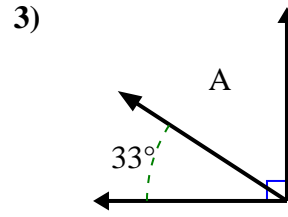
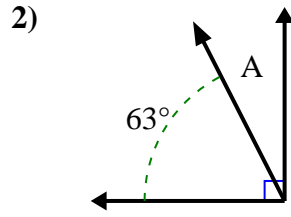
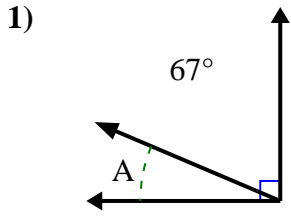
**Respuestas**1. 44°2. 69°3. 60°4. 54°5. 50°6. 23°7. 32°8. 20°9. 37°10. 34°11. 43°12. 68°





Encuentra el valor de 'A' en el conjunto de ángulos complementarios.

**Respuestas**

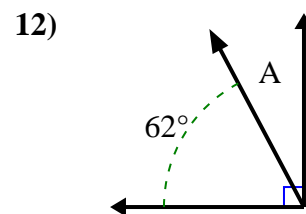
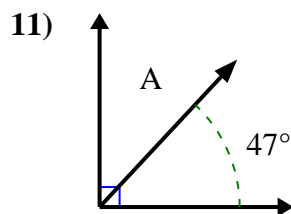
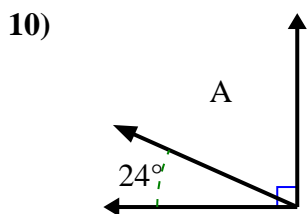
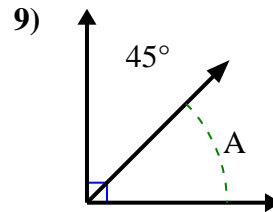
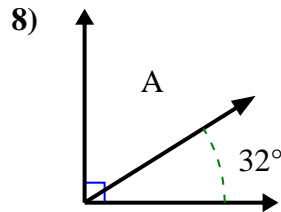
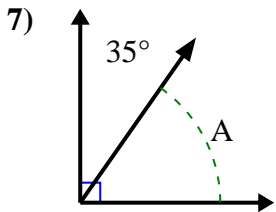
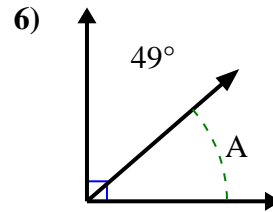
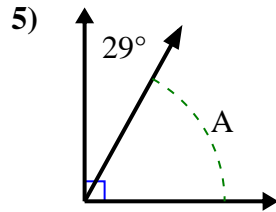
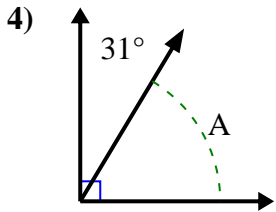
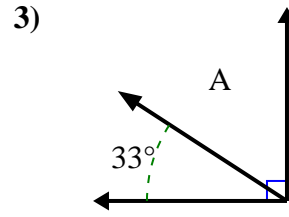
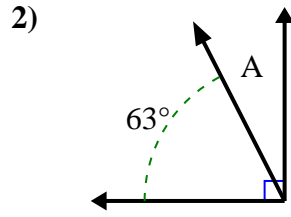
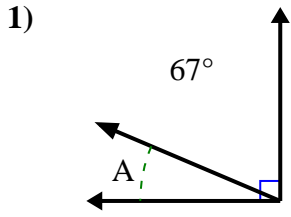


1. \_\_\_\_\_
2. \_\_\_\_\_
3. \_\_\_\_\_
4. \_\_\_\_\_
5. \_\_\_\_\_
6. \_\_\_\_\_
7. \_\_\_\_\_
8. \_\_\_\_\_
9. \_\_\_\_\_
10. \_\_\_\_\_
11. \_\_\_\_\_
12. \_\_\_\_\_



Encuentra el valor de 'A' en el conjunto de ángulos complementarios.

**Respuestas**



1. 23°

2. 27°

3. 57°

4. 59°

5. 61°

6. 41°

7. 55°

8. 58°

9. 45°

10. 66°

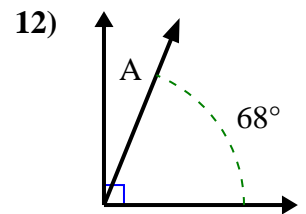
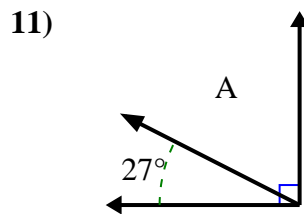
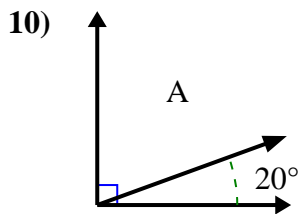
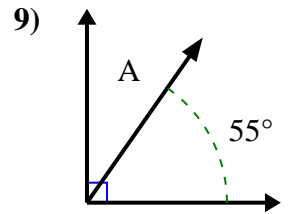
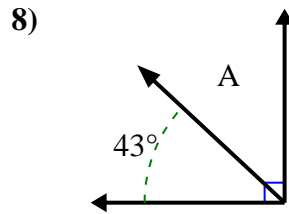
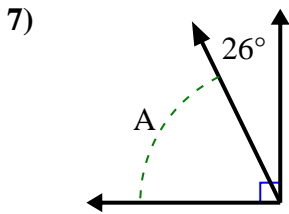
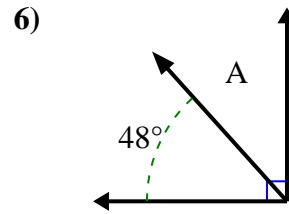
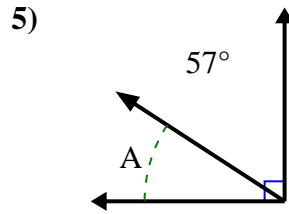
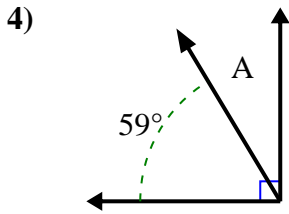
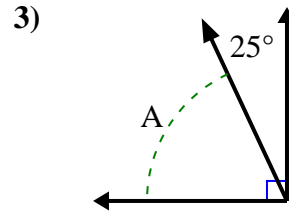
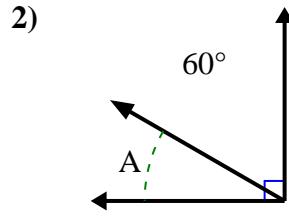
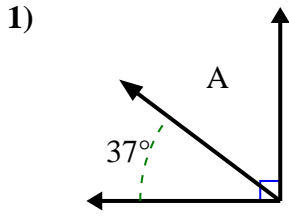
11. 43°

12. 28°



Encuentra el valor de 'A' en el conjunto de ángulos complementarios.

**Respuestas**

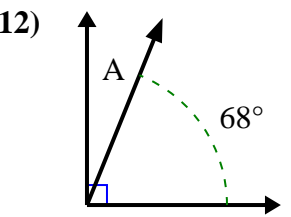
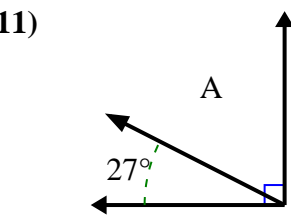
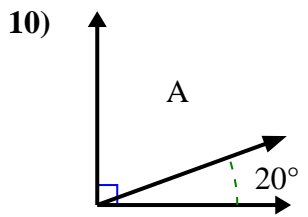
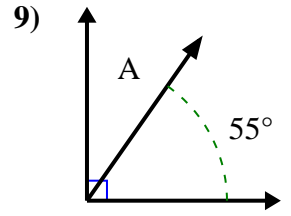
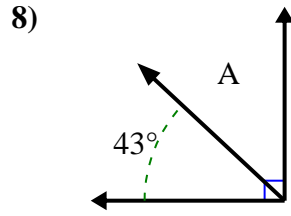
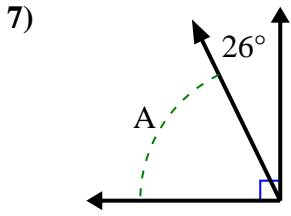
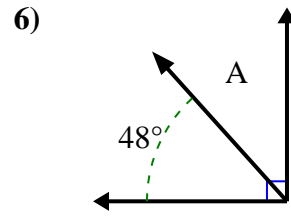
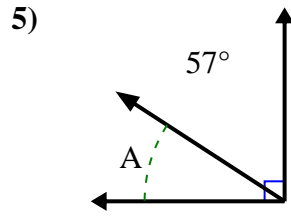
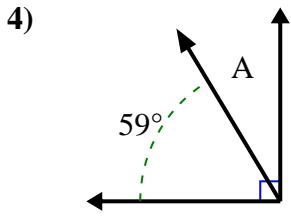
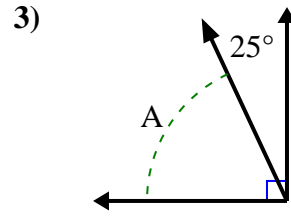
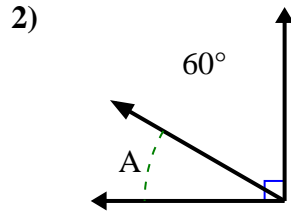
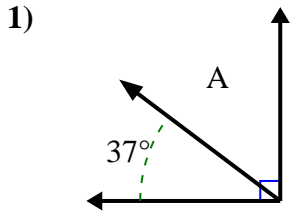


1. \_\_\_\_\_
2. \_\_\_\_\_
3. \_\_\_\_\_
4. \_\_\_\_\_
5. \_\_\_\_\_
6. \_\_\_\_\_
7. \_\_\_\_\_
8. \_\_\_\_\_
9. \_\_\_\_\_
10. \_\_\_\_\_
11. \_\_\_\_\_
12. \_\_\_\_\_



Encuentra el valor de 'A' en el conjunto de ángulos complementarios.

**Respuestas**



1. **53°**

2. **30°**

3. **65°**

4. **31°**

5. **33°**

6. **42°**

7. **64°**

8. **47°**

9. **35°**

10. **70°**

11. **63°**

12. **22°**