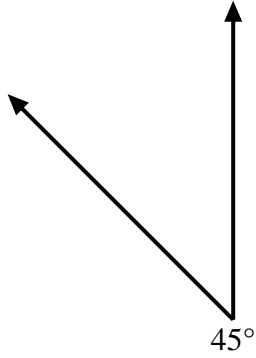


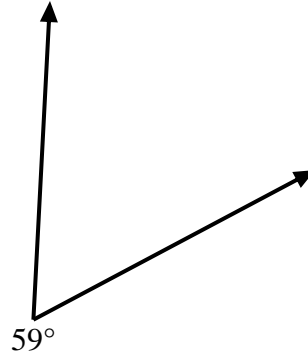


Utiliza un transportador para crear un triángulo a partir de la figura que se muestra. Responde con los ángulos que faltan. Las respuestas variarán.

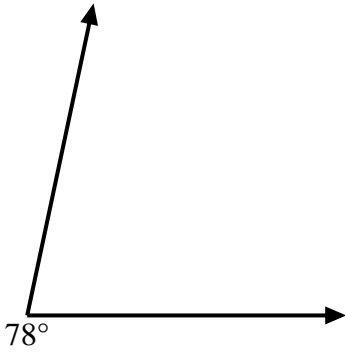
1)



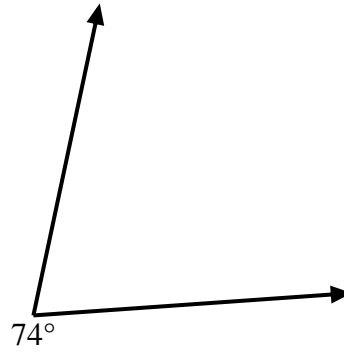
2)



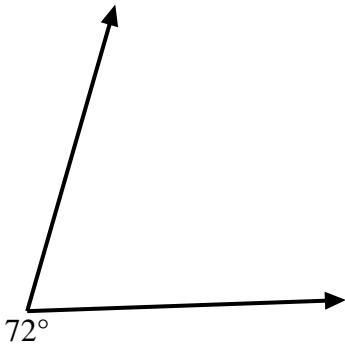
3)



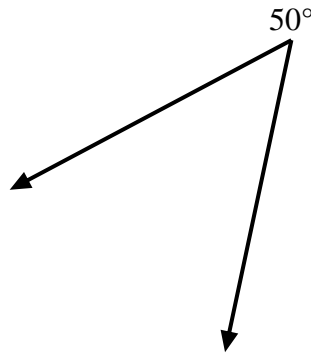
4)



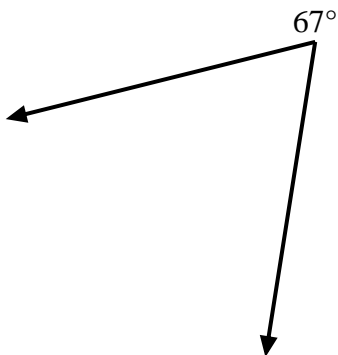
5)



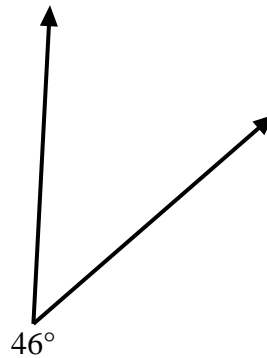
6)



7)



8)



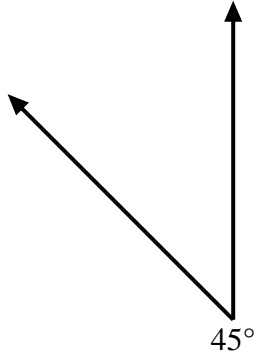
Respuestas

- 1. _____
- 2. _____
- 3. _____
- 4. _____
- 5. _____
- 6. _____
- 7. _____
- 8. _____

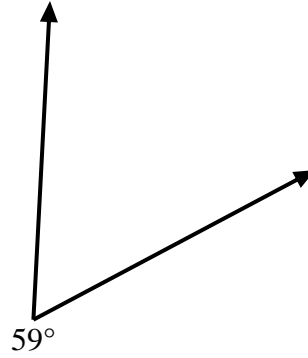


Utiliza un transportador para crear un triángulo a partir de la figura que se muestra. Responde con los ángulos que faltan. Las respuestas variarán.

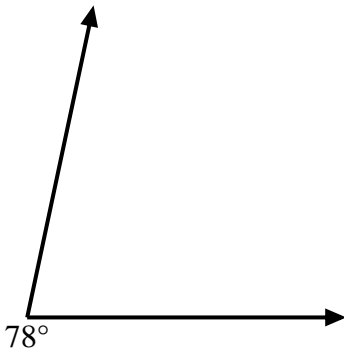
1)



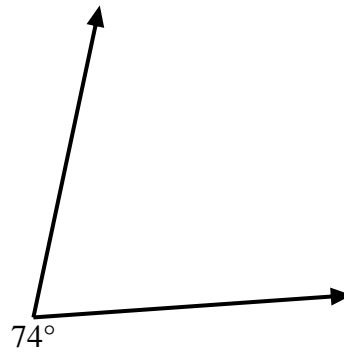
2)



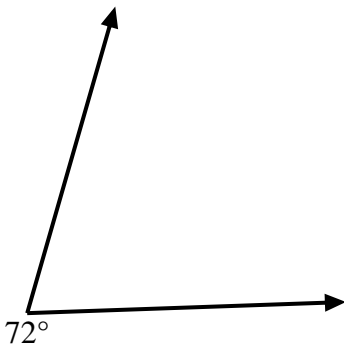
3)



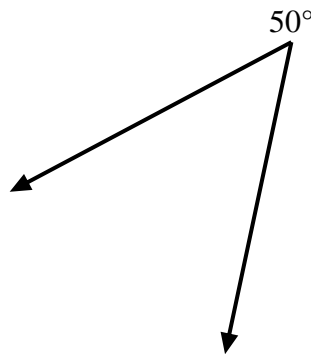
4)



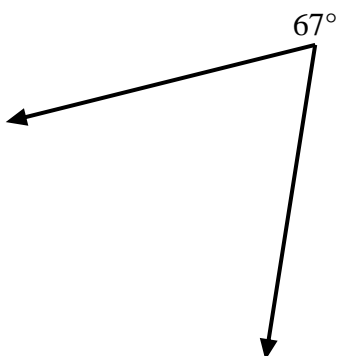
5)



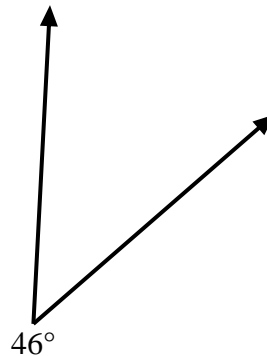
6)



7)



8)



Respuestas

1. **=135**

2. **=121**

3. **=102**

4. **=106**

5. **=108**

6. **=130**

7. **=113**

8. **=134**