



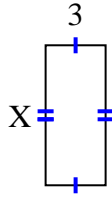
Encuentra el valor de X para cada figura. Cada figura está en centímetros (cm). No a escala.

Respuestas

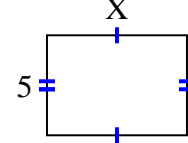
1) area = 4 cm^2



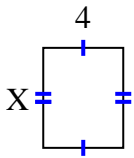
2) area = 21 cm^2



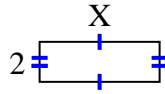
3) area = 35 cm^2



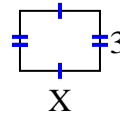
4) area = 20 cm^2



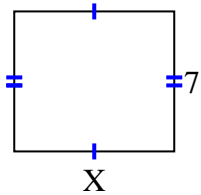
5) area = 12 cm^2



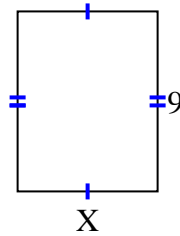
6) area = 12 cm^2



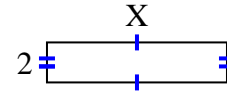
7) area = 56 cm^2



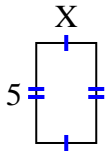
8) area = 63 cm^2



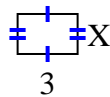
9) area = 18 cm^2



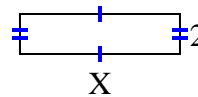
10) area = 15 cm^2



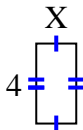
11) area = 6 cm^2



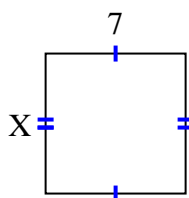
12) area = 16 cm^2



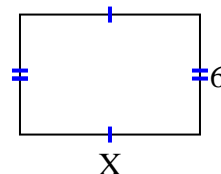
13) area = 8 cm^2



14) area = 49 cm^2



15) area = 54 cm^2



1. _____
2. _____
3. _____
4. _____
5. _____
6. _____
7. _____
8. _____
9. _____
10. _____
11. _____
12. _____
13. _____
14. _____
15. _____

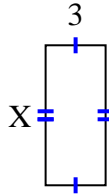


Encuentra el valor de X para cada figura. Cada figura está en centímetros (cm). No a escala.

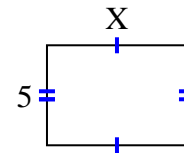
1) area = 4 cm^2



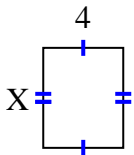
2) area = 21 cm^2



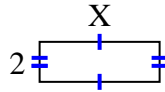
3) area = 35 cm^2



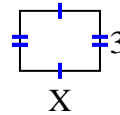
4) area = 20 cm^2



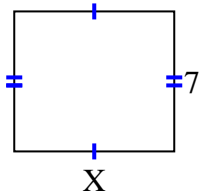
5) area = 12 cm^2



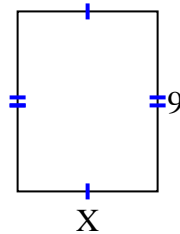
6) area = 12 cm^2



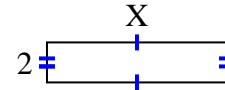
7) area = 56 cm^2



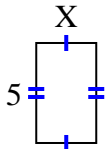
8) area = 63 cm^2



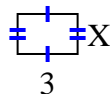
9) area = 18 cm^2



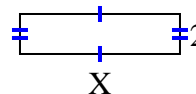
10) area = 15 cm^2



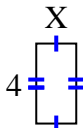
11) area = 6 cm^2



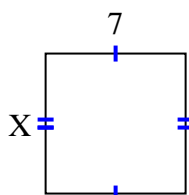
12) area = 16 cm^2



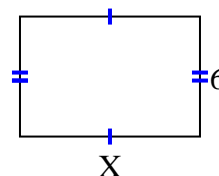
13) area = 8 cm^2



14) area = 49 cm^2



15) area = 54 cm^2

**Respuestas**1. 22. 73. 74. 55. 66. 47. 88. 79. 910. 311. 212. 813. 214. 715. 9