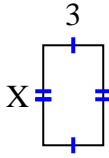


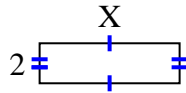


Encuentra el valor de X para cada figura. Cada figura está en centímetros (cm). No a escala.

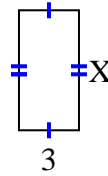
1) area =  $15 \text{ cm}^2$



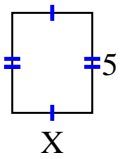
2) area =  $14 \text{ cm}^2$



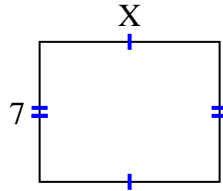
3) area =  $18 \text{ cm}^2$



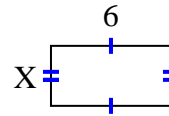
4) area =  $20 \text{ cm}^2$



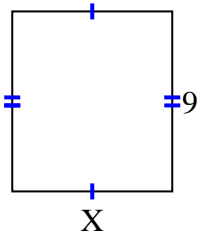
5) area =  $63 \text{ cm}^2$



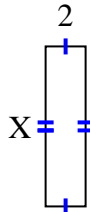
6) area =  $18 \text{ cm}^2$



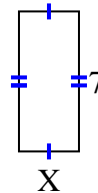
7) area =  $72 \text{ cm}^2$



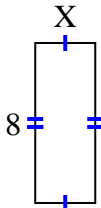
8) area =  $16 \text{ cm}^2$



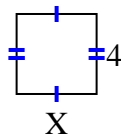
9) area =  $21 \text{ cm}^2$



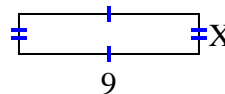
10) area =  $24 \text{ cm}^2$



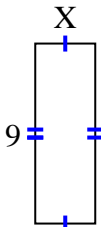
11) area =  $16 \text{ cm}^2$



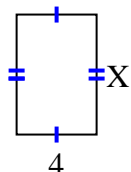
12) area =  $18 \text{ cm}^2$



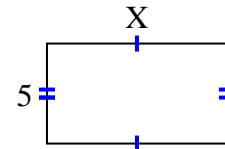
13) area =  $27 \text{ cm}^2$



14) area =  $24 \text{ cm}^2$



15) area =  $45 \text{ cm}^2$



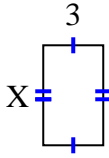
## Respuestas

1. \_\_\_\_\_
2. \_\_\_\_\_
3. \_\_\_\_\_
4. \_\_\_\_\_
5. \_\_\_\_\_
6. \_\_\_\_\_
7. \_\_\_\_\_
8. \_\_\_\_\_
9. \_\_\_\_\_
10. \_\_\_\_\_
11. \_\_\_\_\_
12. \_\_\_\_\_
13. \_\_\_\_\_
14. \_\_\_\_\_
15. \_\_\_\_\_

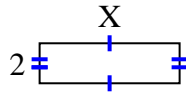


Encuentra el valor de X para cada figura. Cada figura está en centímetros (cm). No a escala.

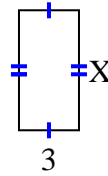
1) area =  $15 \text{ cm}^2$



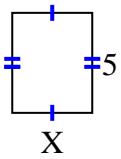
2) area =  $14 \text{ cm}^2$



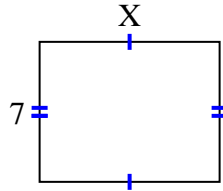
3) area =  $18 \text{ cm}^2$



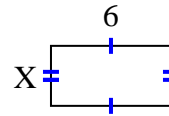
4) area =  $20 \text{ cm}^2$



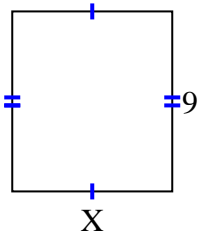
5) area =  $63 \text{ cm}^2$



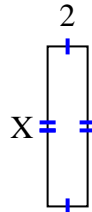
6) area =  $18 \text{ cm}^2$



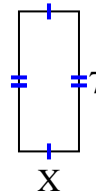
7) area =  $72 \text{ cm}^2$



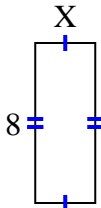
8) area =  $16 \text{ cm}^2$



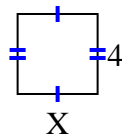
9) area =  $21 \text{ cm}^2$



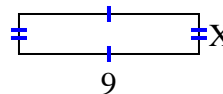
10) area =  $24 \text{ cm}^2$



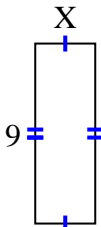
11) area =  $16 \text{ cm}^2$



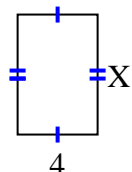
12) area =  $18 \text{ cm}^2$



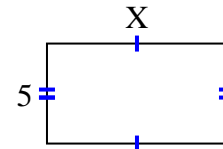
13) area =  $27 \text{ cm}^2$



14) area =  $24 \text{ cm}^2$



15) area =  $45 \text{ cm}^2$



**Respuestas**

1. 5

2. 7

3. 6

4. 4

5. 9

6. 3

7. 8

8. 8

9. 3

10. 3

11. 4

12. 2

13. 3

14. 6

15. 9