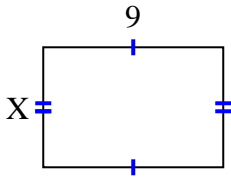


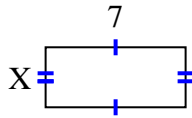


Encuentra el valor de X para cada figura. Cada figura está en centímetros (cm). No a escala.

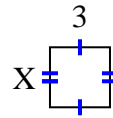
1) area = 54 cm^2



2) area = 21 cm^2



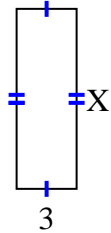
3) area = 9 cm^2



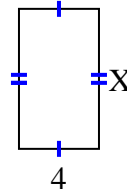
4) area = 4 cm^2



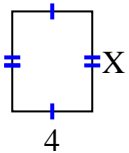
5) area = 27 cm^2



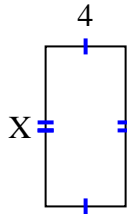
6) area = 28 cm^2



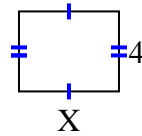
7) area = 20 cm^2



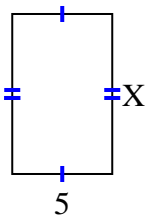
8) area = 32 cm^2



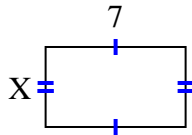
9) area = 20 cm^2



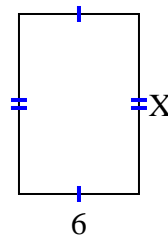
10) area = 40 cm^2



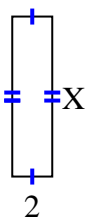
11) area = 28 cm^2



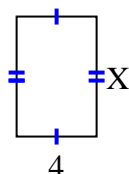
12) area = 54 cm^2



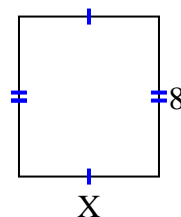
13) area = 16 cm^2



14) area = 24 cm^2



15) area = 56 cm^2



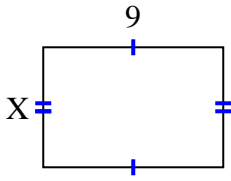
Respuestas

1. _____
2. _____
3. _____
4. _____
5. _____
6. _____
7. _____
8. _____
9. _____
10. _____
11. _____
12. _____
13. _____
14. _____
15. _____

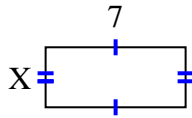


Encuentra el valor de X para cada figura. Cada figura está en centímetros (cm). No a escala.

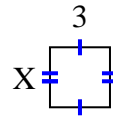
1) area = 54 cm^2



2) area = 21 cm^2



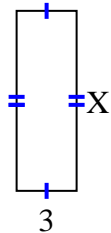
3) area = 9 cm^2



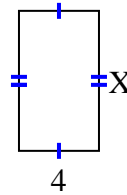
4) area = 4 cm^2



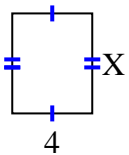
5) area = 27 cm^2



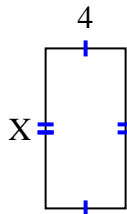
6) area = 28 cm^2



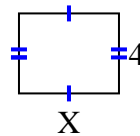
7) area = 20 cm^2



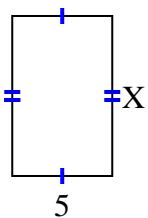
8) area = 32 cm^2



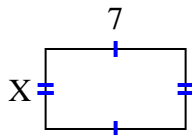
9) area = 20 cm^2



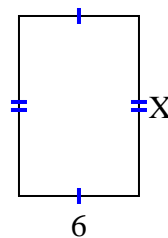
10) area = 40 cm^2



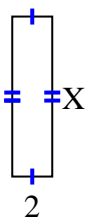
11) area = 28 cm^2



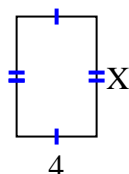
12) area = 54 cm^2



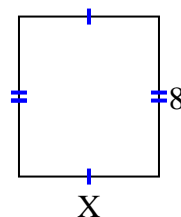
13) area = 16 cm^2



14) area = 24 cm^2



15) area = 56 cm^2



Respuestas

1. 6

2. 3

3. 3

4. 2

5. 9

6. 7

7. 5

8. 8

9. 5

10. 8

11. 4

12. 9

13. 8

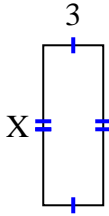
14. 6

15. 7

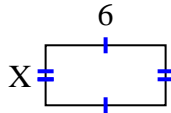


Encuentra el valor de X para cada figura. Cada figura está en centímetros (cm). No a escala.

1) area = 24 cm^2



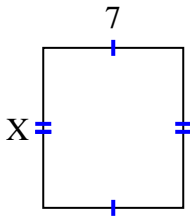
2) area = 18 cm^2



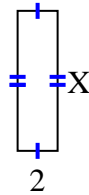
3) area = 4 cm^2



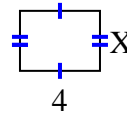
4) area = 56 cm^2



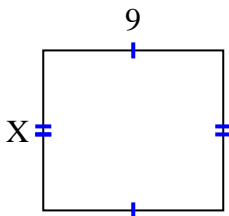
5) area = 14 cm^2



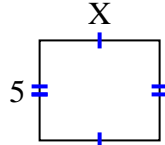
6) area = 12 cm^2



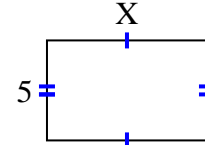
7) area = 72 cm^2



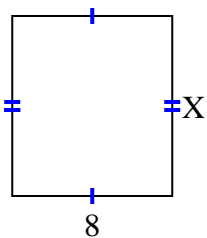
8) area = 30 cm^2



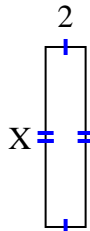
9) area = 40 cm^2



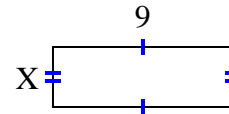
10) area = 72 cm^2



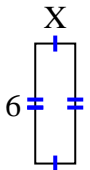
11) area = 18 cm^2



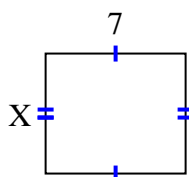
12) area = 27 cm^2



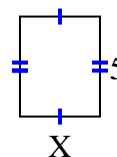
13) area = 12 cm^2



14) area = 42 cm^2



15) area = 20 cm^2



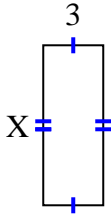
Respuestas

1. _____
2. _____
3. _____
4. _____
5. _____
6. _____
7. _____
8. _____
9. _____
10. _____
11. _____
12. _____
13. _____
14. _____
15. _____

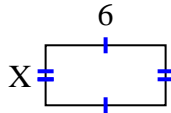


Encuentra el valor de X para cada figura. Cada figura está en centímetros (cm). No a escala.

1) area = 24 cm^2



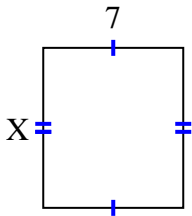
2) area = 18 cm^2



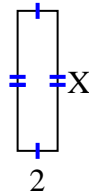
3) area = 4 cm^2



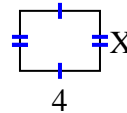
4) area = 56 cm^2



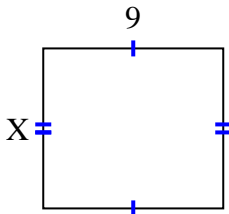
5) area = 14 cm^2



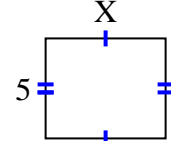
6) area = 12 cm^2



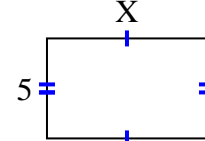
7) area = 72 cm^2



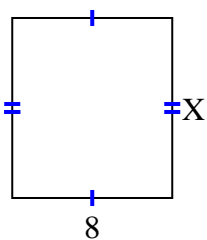
8) area = 30 cm^2



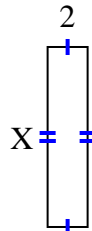
9) area = 40 cm^2



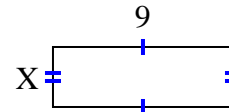
10) area = 72 cm^2



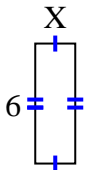
11) area = 18 cm^2



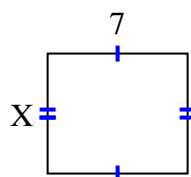
12) area = 27 cm^2



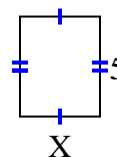
13) area = 12 cm^2



14) area = 42 cm^2



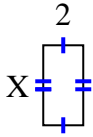
15) area = 20 cm^2

**Respuestas**1. 82. 33. 24. 85. 76. 37. 88. 69. 810. 911. 912. 313. 214. 615. 4

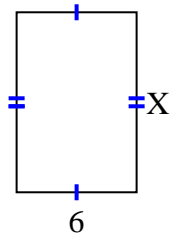


Encuentra el valor de X para cada figura. Cada figura está en centímetros (cm). No a escala.

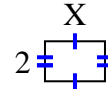
1) area = 8 cm^2



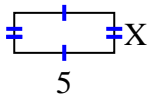
2) area = 54 cm^2



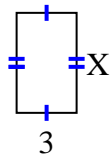
3) area = 6 cm^2



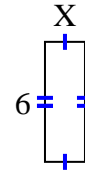
4) area = 10 cm^2



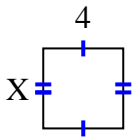
5) area = 15 cm^2



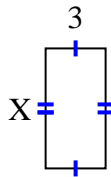
6) area = 12 cm^2



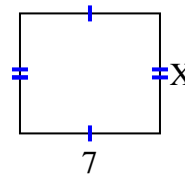
7) area = 16 cm^2



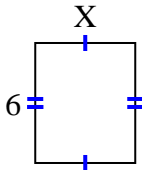
8) area = 18 cm^2



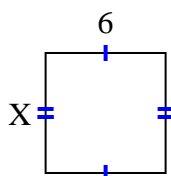
9) area = 42 cm^2



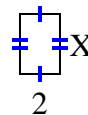
10) area = 30 cm^2



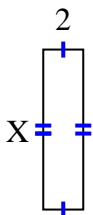
11) area = 36 cm^2



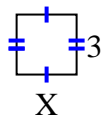
12) area = 6 cm^2



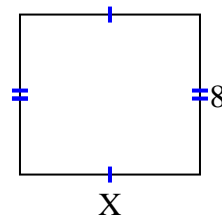
13) area = 16 cm^2



14) area = 9 cm^2



15) area = 72 cm^2



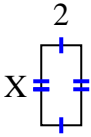
Respuestas

1. _____
2. _____
3. _____
4. _____
5. _____
6. _____
7. _____
8. _____
9. _____
10. _____
11. _____
12. _____
13. _____
14. _____
15. _____

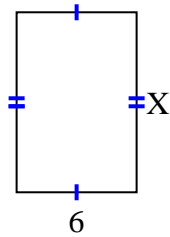


Encuentra el valor de X para cada figura. Cada figura está en centímetros (cm). No a escala.

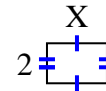
1) area = 8 cm^2



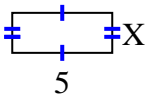
2) area = 54 cm^2



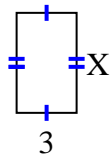
3) area = 6 cm^2



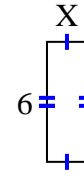
4) area = 10 cm^2



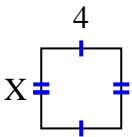
5) area = 15 cm^2



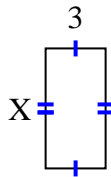
6) area = 12 cm^2



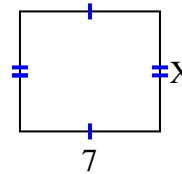
7) area = 16 cm^2



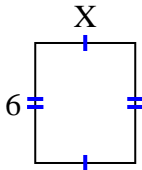
8) area = 18 cm^2



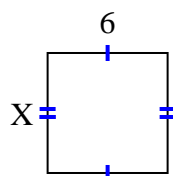
9) area = 42 cm^2



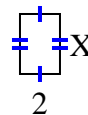
10) area = 30 cm^2



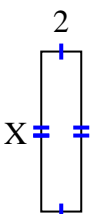
11) area = 36 cm^2



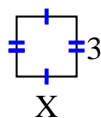
12) area = 6 cm^2



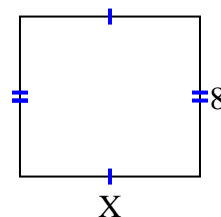
13) area = 16 cm^2



14) area = 9 cm^2



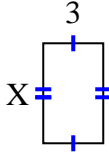
15) area = 72 cm^2

**Respuestas**1. 42. 93. 34. 25. 56. 27. 48. 69. 610. 511. 612. 313. 814. 315. 9

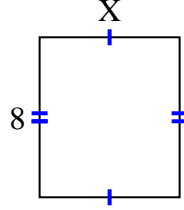


Encuentra el valor de X para cada figura. Cada figura está en centímetros (cm). No a escala.

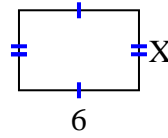
1) area = 15 cm^2



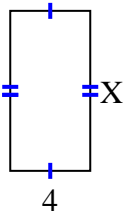
2) area = 56 cm^2



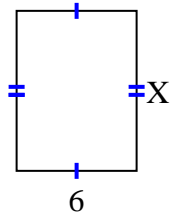
3) area = 24 cm^2



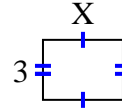
4) area = 32 cm^2



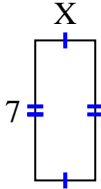
5) area = 48 cm^2



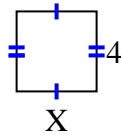
6) area = 12 cm^2



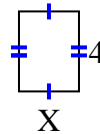
7) area = 21 cm^2



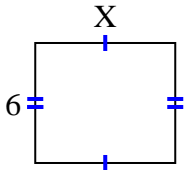
8) area = 16 cm^2



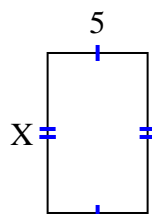
9) area = 12 cm^2



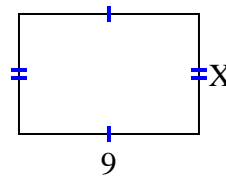
10) area = 42 cm^2



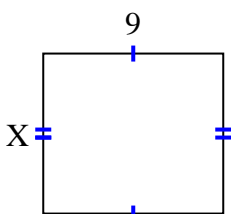
11) area = 40 cm^2



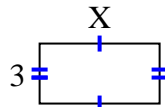
12) area = 54 cm^2



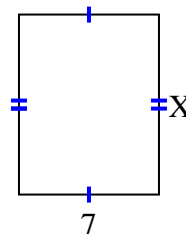
13) area = 72 cm^2



14) area = 18 cm^2



15) area = 63 cm^2



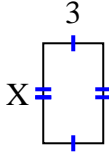
Respuestas

1. _____
2. _____
3. _____
4. _____
5. _____
6. _____
7. _____
8. _____
9. _____
10. _____
11. _____
12. _____
13. _____
14. _____
15. _____

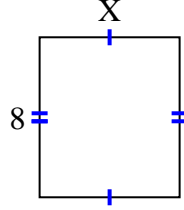


Encuentra el valor de X para cada figura. Cada figura está en centímetros (cm). No a escala.

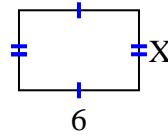
1) area = 15 cm^2



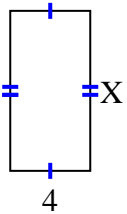
2) area = 56 cm^2



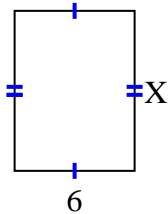
3) area = 24 cm^2



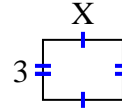
4) area = 32 cm^2



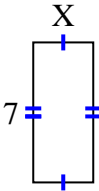
5) area = 48 cm^2



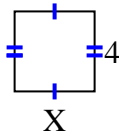
6) area = 12 cm^2



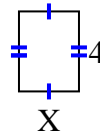
7) area = 21 cm^2



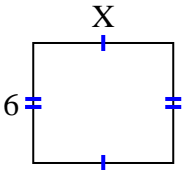
8) area = 16 cm^2



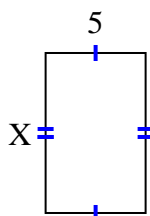
9) area = 12 cm^2



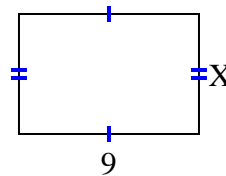
10) area = 42 cm^2



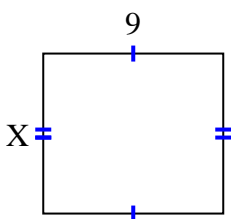
11) area = 40 cm^2



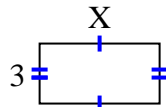
12) area = 54 cm^2



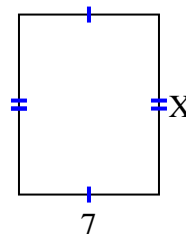
13) area = 72 cm^2



14) area = 18 cm^2



15) area = 63 cm^2



Respuestas

1. 5

2. 7

3. 4

4. 8

5. 8

6. 4

7. 3

8. 4

9. 3

10. 7

11. 8

12. 6

13. 8

14. 6

15. 9



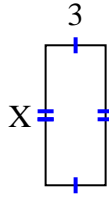
Encuentra el valor de X para cada figura. Cada figura está en centímetros (cm). No a escala.

Respuestas

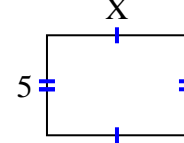
1) area = 4 cm^2



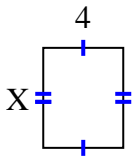
2) area = 21 cm^2



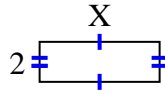
3) area = 35 cm^2



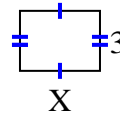
4) area = 20 cm^2



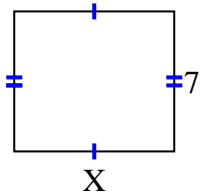
5) area = 12 cm^2



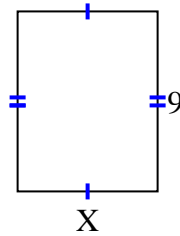
6) area = 12 cm^2



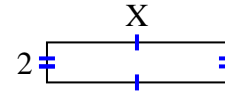
7) area = 56 cm^2



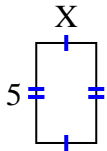
8) area = 63 cm^2



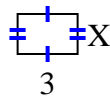
9) area = 18 cm^2



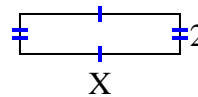
10) area = 15 cm^2



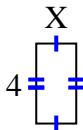
11) area = 6 cm^2



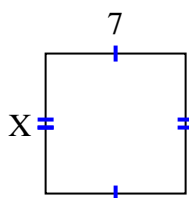
12) area = 16 cm^2



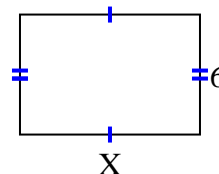
13) area = 8 cm^2



14) area = 49 cm^2



15) area = 54 cm^2



1. _____
2. _____
3. _____
4. _____
5. _____
6. _____
7. _____
8. _____
9. _____
10. _____
11. _____
12. _____
13. _____
14. _____
15. _____

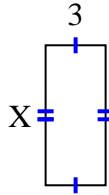


Encuentra el valor de X para cada figura. Cada figura está en centímetros (cm). No a escala.

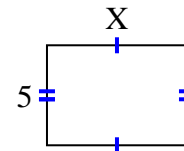
1) area = 4 cm^2



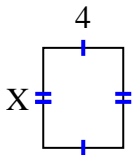
2) area = 21 cm^2



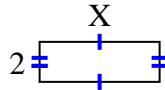
3) area = 35 cm^2



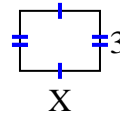
4) area = 20 cm^2



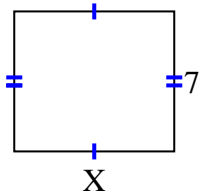
5) area = 12 cm^2



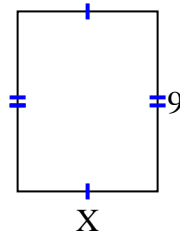
6) area = 12 cm^2



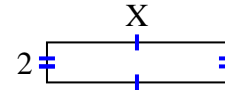
7) area = 56 cm^2



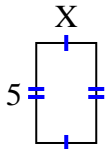
8) area = 63 cm^2



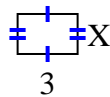
9) area = 18 cm^2



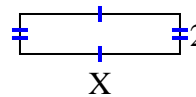
10) area = 15 cm^2



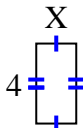
11) area = 6 cm^2



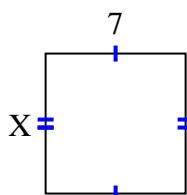
12) area = 16 cm^2



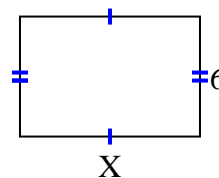
13) area = 8 cm^2



14) area = 49 cm^2



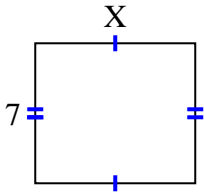
15) area = 54 cm^2

**Respuestas**1. 22. 73. 74. 55. 66. 47. 88. 79. 910. 311. 212. 813. 214. 715. 9

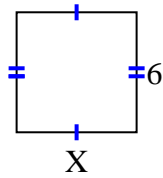


Encuentra el valor de X para cada figura. Cada figura está en centímetros (cm). No a escala.

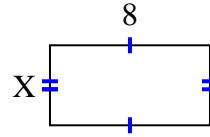
1) area = 56 cm^2



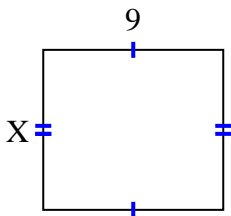
2) area = 36 cm^2



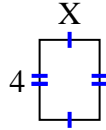
3) area = 32 cm^2



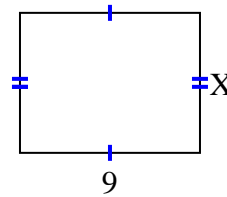
4) area = 72 cm^2



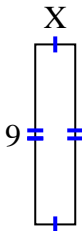
5) area = 12 cm^2



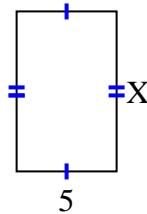
6) area = 63 cm^2



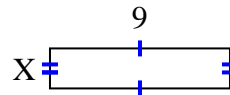
7) area = 18 cm^2



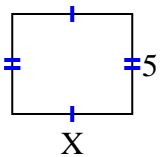
8) area = 40 cm^2



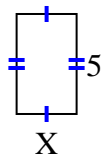
9) area = 18 cm^2



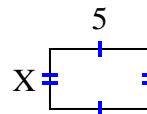
10) area = 30 cm^2



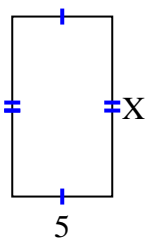
11) area = 15 cm^2



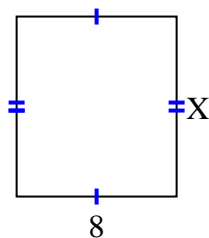
12) area = 15 cm^2



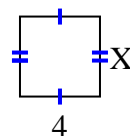
13) area = 45 cm^2



14) area = 72 cm^2



15) area = 16 cm^2



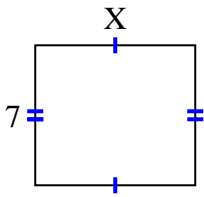
Respuestas

1. _____
2. _____
3. _____
4. _____
5. _____
6. _____
7. _____
8. _____
9. _____
10. _____
11. _____
12. _____
13. _____
14. _____
15. _____

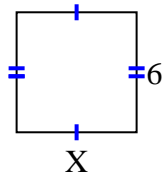


Encuentra el valor de X para cada figura. Cada figura está en centímetros (cm). No a escala.

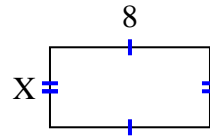
1) area = 56 cm^2



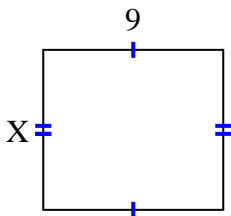
2) area = 36 cm^2



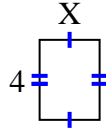
3) area = 32 cm^2



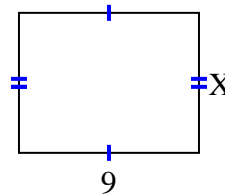
4) area = 72 cm^2



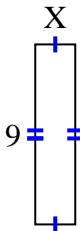
5) area = 12 cm^2



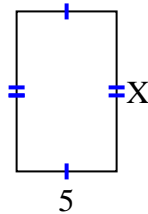
6) area = 63 cm^2



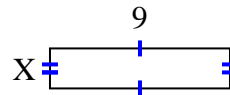
7) area = 18 cm^2



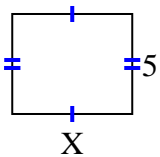
8) area = 40 cm^2



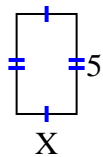
9) area = 18 cm^2



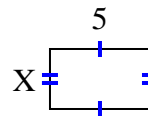
10) area = 30 cm^2



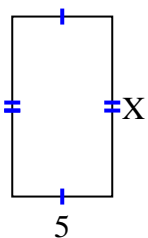
11) area = 15 cm^2



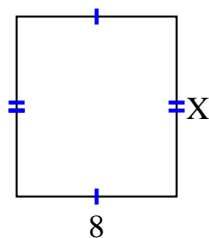
12) area = 15 cm^2



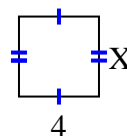
13) area = 45 cm^2



14) area = 72 cm^2



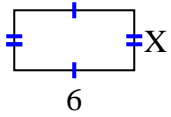
15) area = 16 cm^2

**Respuestas**1. 82. 63. 44. 85. 36. 77. 28. 89. 210. 611. 312. 313. 914. 915. 4

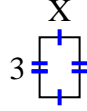


Encuentra el valor de X para cada figura. Cada figura está en centímetros (cm). No a escala.

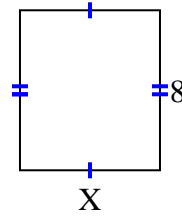
1) area = 18 cm^2



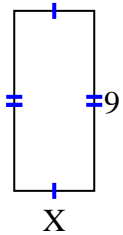
2) area = 6 cm^2



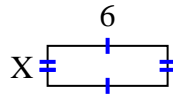
3) area = 56 cm^2



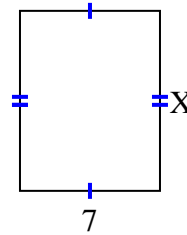
4) area = 36 cm^2



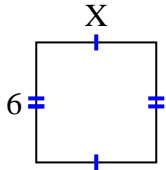
5) area = 12 cm^2



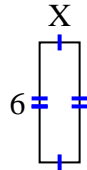
6) area = 63 cm^2



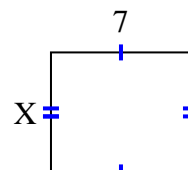
7) area = 36 cm^2



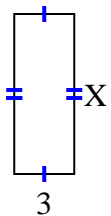
8) area = 12 cm^2



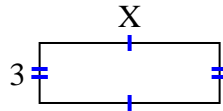
9) area = 42 cm^2



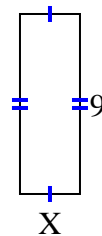
10) area = 24 cm^2



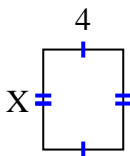
11) area = 27 cm^2



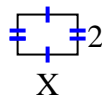
12) area = 27 cm^2



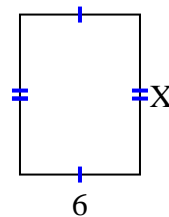
13) area = 20 cm^2



14) area = 6 cm^2



15) area = 48 cm^2



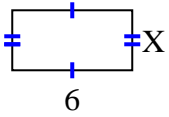
Respuestas

1. _____
2. _____
3. _____
4. _____
5. _____
6. _____
7. _____
8. _____
9. _____
10. _____
11. _____
12. _____
13. _____
14. _____
15. _____

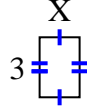


Encuentra el valor de X para cada figura. Cada figura está en centímetros (cm). No a escala.

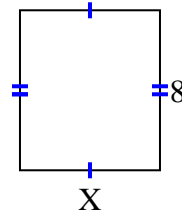
1) $\text{area} = 18 \text{ cm}^2$



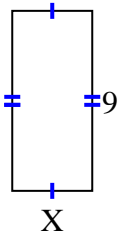
2) $\text{area} = 6 \text{ cm}^2$



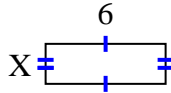
3) $\text{area} = 56 \text{ cm}^2$



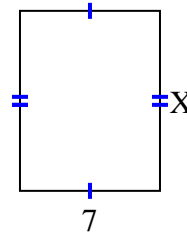
4) $\text{area} = 36 \text{ cm}^2$



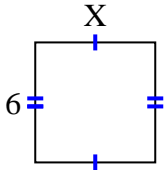
5) $\text{area} = 12 \text{ cm}^2$



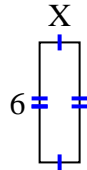
6) $\text{area} = 63 \text{ cm}^2$



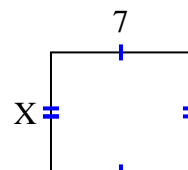
7) $\text{area} = 36 \text{ cm}^2$



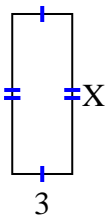
8) $\text{area} = 12 \text{ cm}^2$



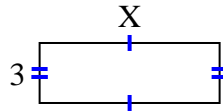
9) $\text{area} = 42 \text{ cm}^2$



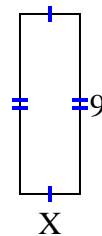
10) $\text{area} = 24 \text{ cm}^2$



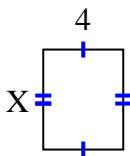
11) $\text{area} = 27 \text{ cm}^2$



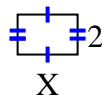
12) $\text{area} = 27 \text{ cm}^2$



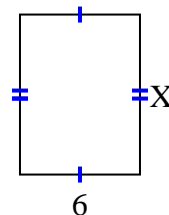
13) $\text{area} = 20 \text{ cm}^2$



14) $\text{area} = 6 \text{ cm}^2$



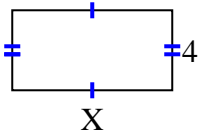
15) $\text{area} = 48 \text{ cm}^2$

**Respuestas**1. 32. 23. 74. 45. 26. 97. 68. 29. 610. 811. 912. 313. 514. 315. 8

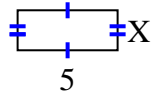


Encuentra el valor de X para cada figura. Cada figura está en centímetros (cm). No a escala.

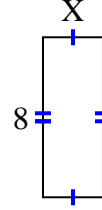
1) area = 32 cm^2



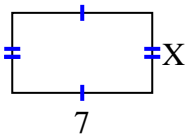
2) area = 10 cm^2



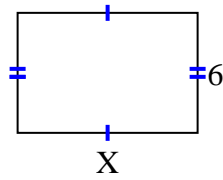
3) area = 24 cm^2



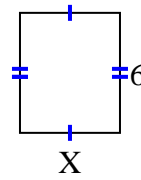
4) area = 28 cm^2



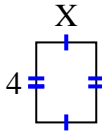
5) area = 54 cm^2



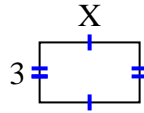
6) area = 30 cm^2



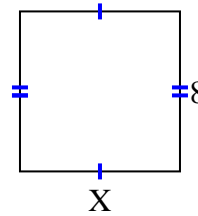
7) area = 12 cm^2



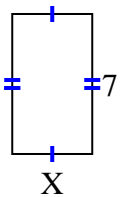
8) area = 15 cm^2



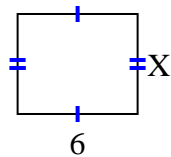
9) area = 64 cm^2



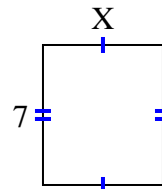
10) area = 28 cm^2



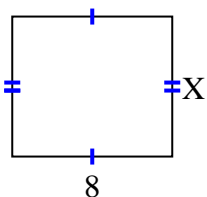
11) area = 30 cm^2



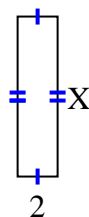
12) area = 42 cm^2



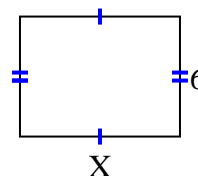
13) area = 56 cm^2



14) area = 16 cm^2



15) area = 48 cm^2



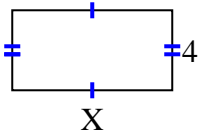
Respuestas

1. _____
2. _____
3. _____
4. _____
5. _____
6. _____
7. _____
8. _____
9. _____
10. _____
11. _____
12. _____
13. _____
14. _____
15. _____

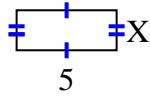


Encuentra el valor de X para cada figura. Cada figura está en centímetros (cm). No a escala.

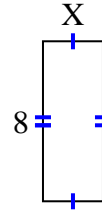
1) area = 32 cm^2



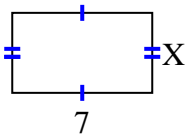
2) area = 10 cm^2



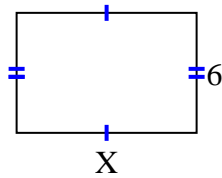
3) area = 24 cm^2



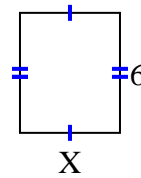
4) area = 28 cm^2



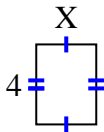
5) area = 54 cm^2



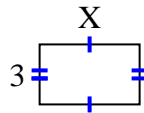
6) area = 30 cm^2



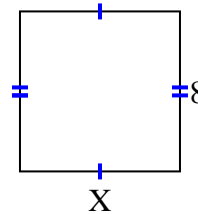
7) area = 12 cm^2



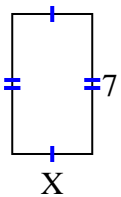
8) area = 15 cm^2



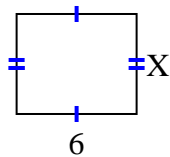
9) area = 64 cm^2



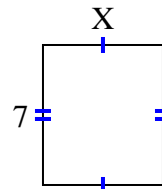
10) area = 28 cm^2



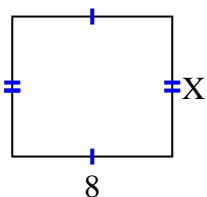
11) area = 30 cm^2



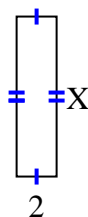
12) area = 42 cm^2



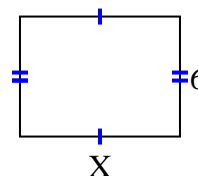
13) area = 56 cm^2



14) area = 16 cm^2



15) area = 48 cm^2

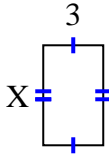
**Respuestas**1. 82. 23. 34. 45. 96. 57. 38. 59. 810. 411. 512. 613. 714. 815. 8



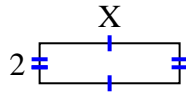
Encuentra el valor de X para cada figura. Cada figura está en centímetros (cm). No a escala.

Respuestas

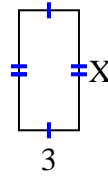
1) area = 15 cm^2



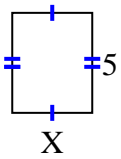
2) area = 14 cm^2



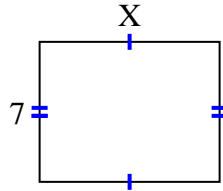
3) area = 18 cm^2



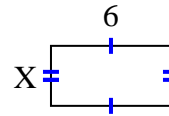
4) area = 20 cm^2



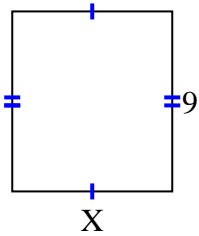
5) area = 63 cm^2



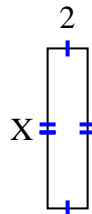
6) area = 18 cm^2



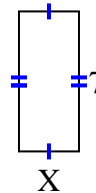
7) area = 72 cm^2



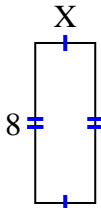
8) area = 16 cm^2



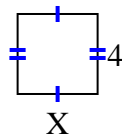
9) area = 21 cm^2



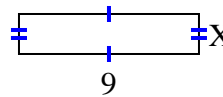
10) area = 24 cm^2



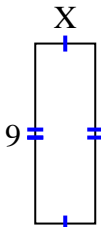
11) area = 16 cm^2



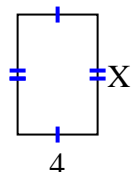
12) area = 18 cm^2



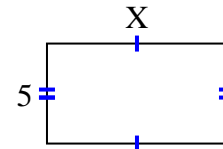
13) area = 27 cm^2



14) area = 24 cm^2



15) area = 45 cm^2

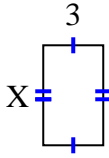


1. _____
2. _____
3. _____
4. _____
5. _____
6. _____
7. _____
8. _____
9. _____
10. _____
11. _____
12. _____
13. _____
14. _____
15. _____

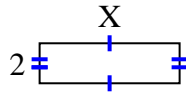


Encuentra el valor de X para cada figura. Cada figura está en centímetros (cm). No a escala.

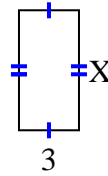
1) area = 15 cm^2



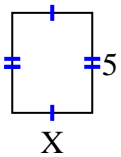
2) area = 14 cm^2



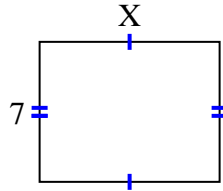
3) area = 18 cm^2



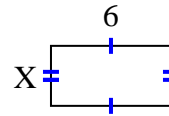
4) area = 20 cm^2



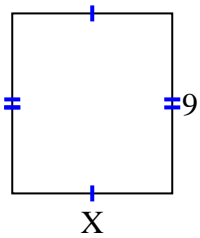
5) area = 63 cm^2



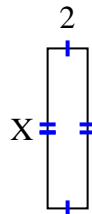
6) area = 18 cm^2



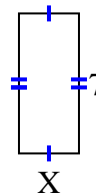
7) area = 72 cm^2



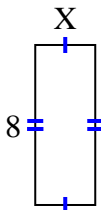
8) area = 16 cm^2



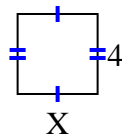
9) area = 21 cm^2



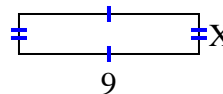
10) area = 24 cm^2



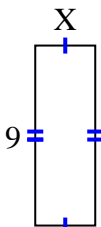
11) area = 16 cm^2



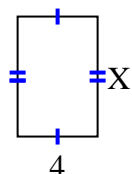
12) area = 18 cm^2



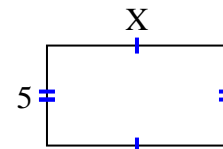
13) area = 27 cm^2



14) area = 24 cm^2



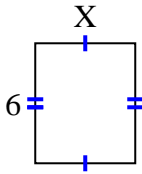
15) area = 45 cm^2

**Respuestas**1. 52. 73. 64. 45. 96. 37. 88. 89. 310. 311. 412. 213. 314. 615. 9

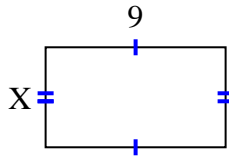


Encuentra el valor de X para cada figura. Cada figura está en centímetros (cm). No a escala.

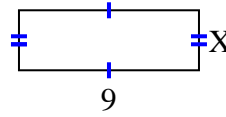
1) area = 30 cm^2



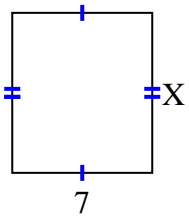
2) area = 45 cm^2



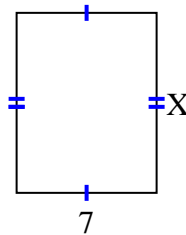
3) area = 27 cm^2



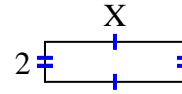
4) area = 56 cm^2



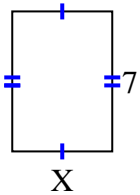
5) area = 63 cm^2



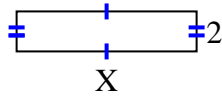
6) area = 14 cm^2



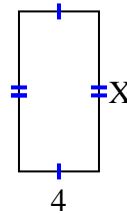
7) area = 35 cm^2



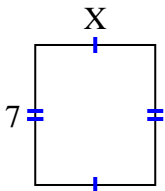
8) area = 18 cm^2



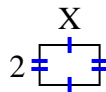
9) area = 32 cm^2



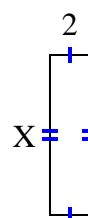
10) area = 42 cm^2



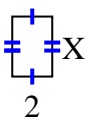
11) area = 6 cm^2



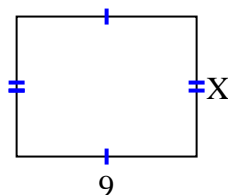
12) area = 16 cm^2



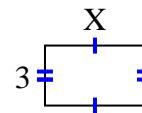
13) area = 6 cm^2



14) area = 63 cm^2



15) area = 15 cm^2



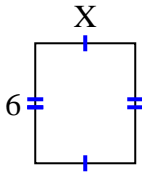
Respuestas

1. _____
2. _____
3. _____
4. _____
5. _____
6. _____
7. _____
8. _____
9. _____
10. _____
11. _____
12. _____
13. _____
14. _____
15. _____

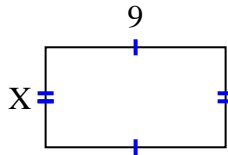


Encuentra el valor de X para cada figura. Cada figura está en centímetros (cm). No a escala.

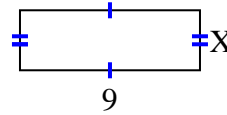
1) area = 30 cm^2



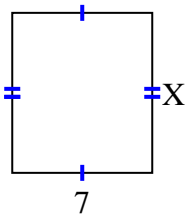
2) area = 45 cm^2



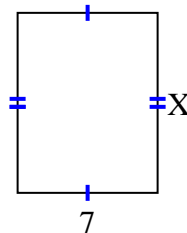
3) area = 27 cm^2



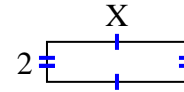
4) area = 56 cm^2



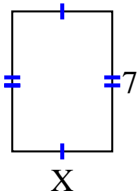
5) area = 63 cm^2



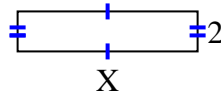
6) area = 14 cm^2



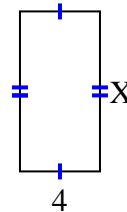
7) area = 35 cm^2



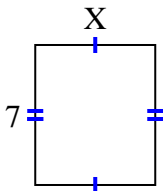
8) area = 18 cm^2



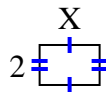
9) area = 32 cm^2



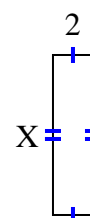
10) area = 42 cm^2



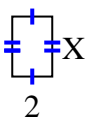
11) area = 6 cm^2



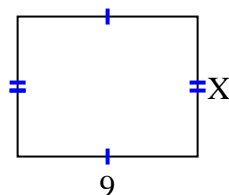
12) area = 16 cm^2



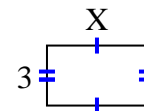
13) area = 6 cm^2



14) area = 63 cm^2



15) area = 15 cm^2

**Respuestas**1. 52. 53. 34. 85. 96. 77. 58. 99. 810. 611. 312. 813. 314. 715. 5