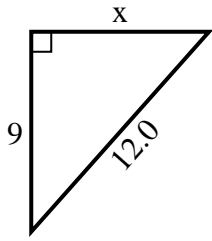




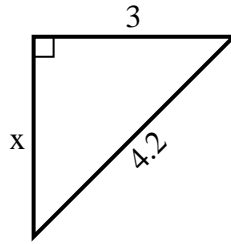
**SPANISH\_INSTRUCTIONS**

**Respuestas**

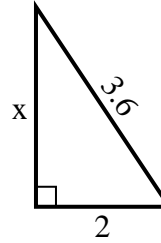
1) perímetro = 29 u



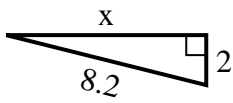
2) perímetro = 10.2 u



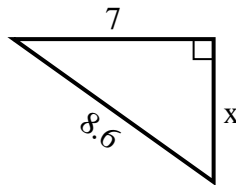
3) perímetro = 8.6 u



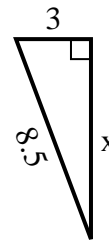
4) perímetro = 18.2 u



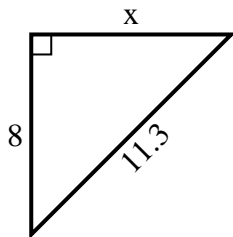
5) perímetro = 20.6 u



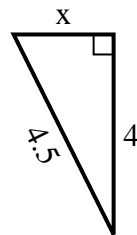
6) perímetro = 19.5 u



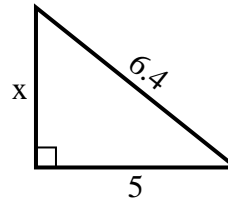
7) perímetro = 27.3 u



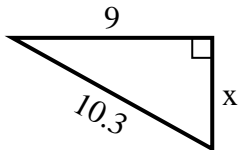
8) perímetro = 10.5 u



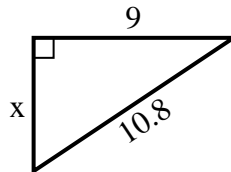
9) perímetro = 15.4 u



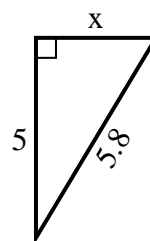
10) perímetro = 24.3 u



11) perímetro = 25.8 u



12) perímetro = 13.8 u



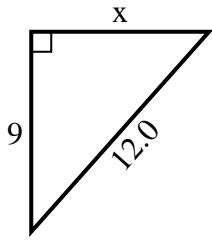
1. \_\_\_\_\_
2. \_\_\_\_\_
3. \_\_\_\_\_
4. \_\_\_\_\_
5. \_\_\_\_\_
6. \_\_\_\_\_
7. \_\_\_\_\_
8. \_\_\_\_\_
9. \_\_\_\_\_
10. \_\_\_\_\_
11. \_\_\_\_\_
12. \_\_\_\_\_



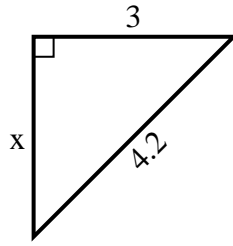
**SPANISH\_INSTRUCTIONS**

**Respuestas**

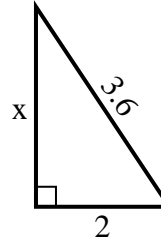
1) perímetro = 29 u



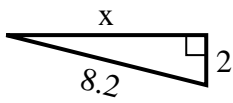
2) perímetro = 10.2 u



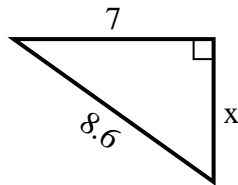
3) perímetro = 8.6 u



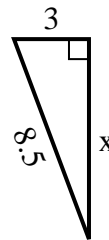
4) perímetro = 18.2 u



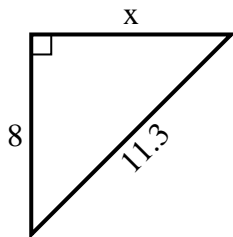
5) perímetro = 20.6 u



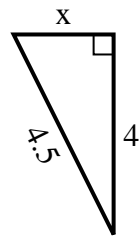
6) perímetro = 19.5 u



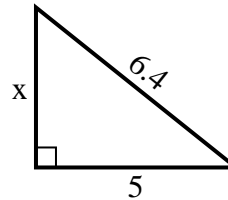
7) perímetro = 27.3 u



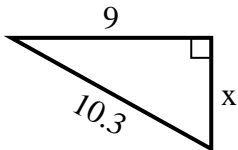
8) perímetro = 10.5 u



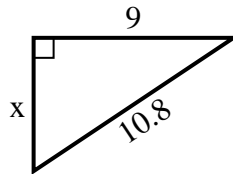
9) perímetro = 15.4 u



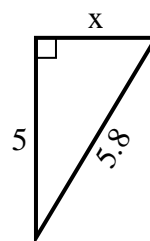
10) perímetro = 24.3 u



11) perímetro = 25.8 u



12) perímetro = 13.8 u



1. 8
2. 3
3. 3
4. 8
5. 5
6. 8
7. 8
8. 2
9. 4
10. 5
11. 6
12. 3