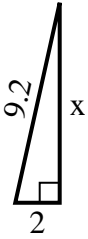




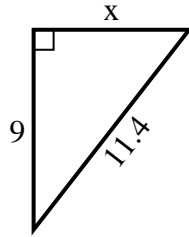
SPANISH_INSTRUCTIONS

Respuestas

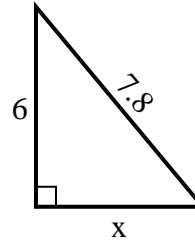
1) perímetro = 20.2 u



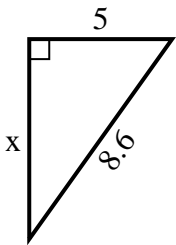
2) perímetro = 27.4 u



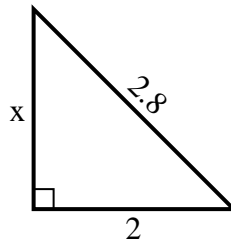
3) perímetro = 18.8 u



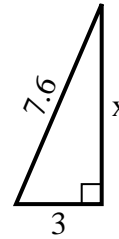
4) perímetro = 20.6 u



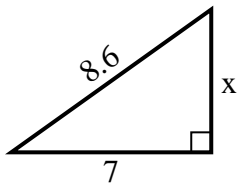
5) perímetro = 6.8 u



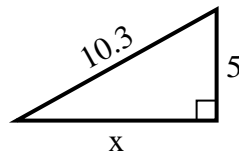
6) perímetro = 17.6 u



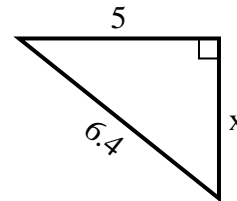
7) perímetro = 20.6 u



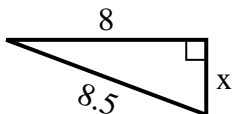
8) perímetro = 24.3 u



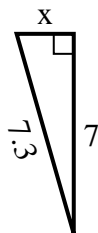
9) perímetro = 15.4 u



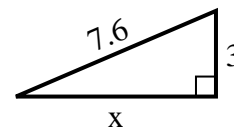
10) perímetro = 19.5 u



11) perímetro = 16.3 u



12) perímetro = 17.6 u



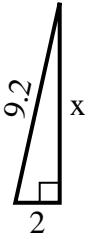
1. _____
2. _____
3. _____
4. _____
5. _____
6. _____
7. _____
8. _____
9. _____
10. _____
11. _____
12. _____



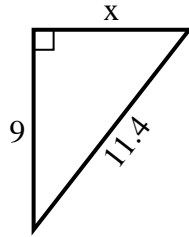
SPANISH_INSTRUCTIONS

Respuestas

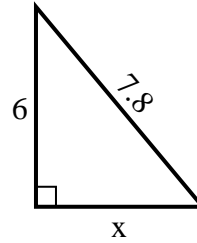
1) perímetro = 20.2 u



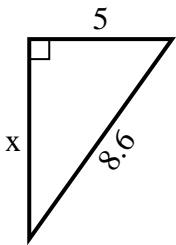
2) perímetro = 27.4 u



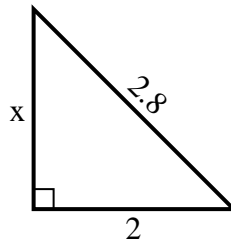
3) perímetro = 18.8 u



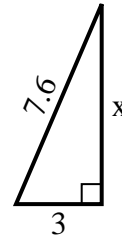
4) perímetro = 20.6 u



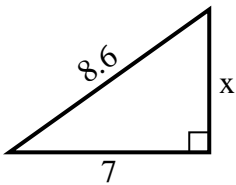
5) perímetro = 6.8 u



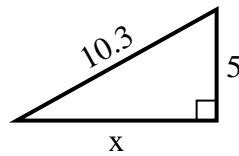
6) perímetro = 17.6 u



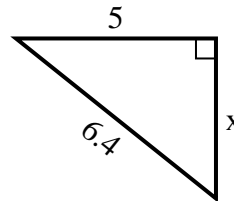
7) perímetro = 20.6 u



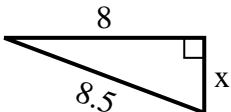
8) perímetro = 24.3 u



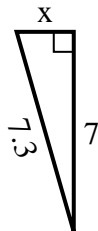
9) perímetro = 15.4 u



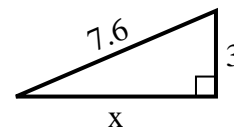
10) perímetro = 19.5 u



11) perímetro = 16.3 u



12) perímetro = 17.6 u



1. 9
2. 7
3. 5
4. 7
5. 2
6. 7
7. 5
8. 9
9. 4
10. 3
11. 2
12. 7