

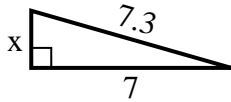




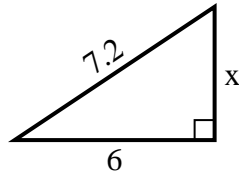
**SPANISH\_INSTRUCTIONS**

**Respuestas**

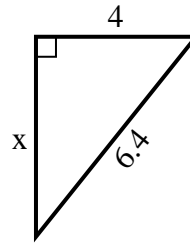
1) perímetro = 16.3 u



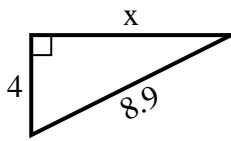
2) perímetro = 17.2 u



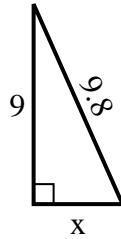
3) perímetro = 15.4 u



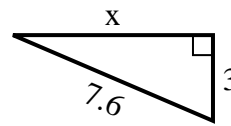
4) perímetro = 20.9 u



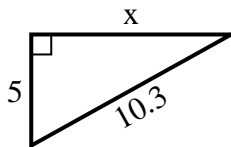
5) perímetro = 22.8 u



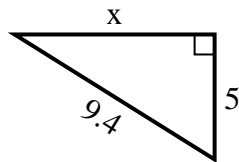
6) perímetro = 17.6 u



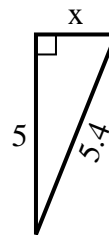
7) perímetro = 24.3 u



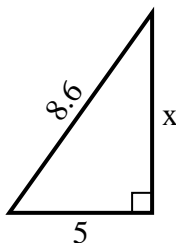
8) perímetro = 22.4 u



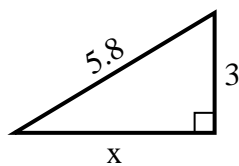
9) perímetro = 12.4 u



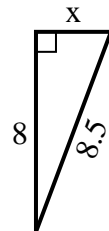
10) perímetro = 20.6 u



11) perímetro = 13.8 u



12) perímetro = 19.5 u



1. 2
2. 4
3. 5
4. 8
5. 4
6. 7
7. 9
8. 8
9. 2
10. 7
11. 5
12. 3