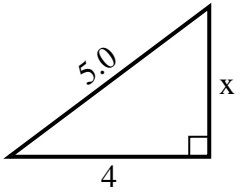




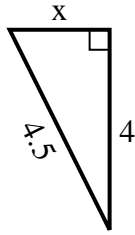
SPANISH_INSTRUCTIONS

Respuestas

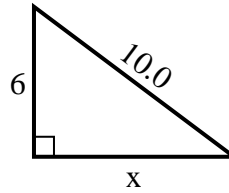
1) perímetro = 12 u



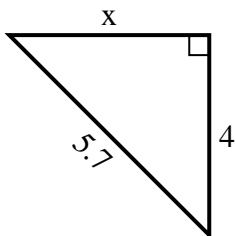
2) perímetro = 10.5 u



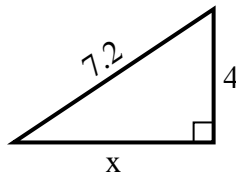
3) perímetro = 24 u



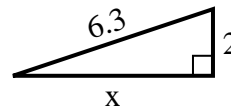
4) perímetro = 13.7 u



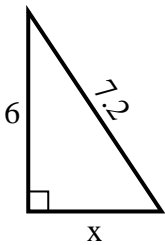
5) perímetro = 17.2 u



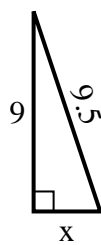
6) perímetro = 14.3 u



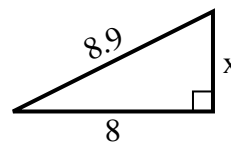
7) perímetro = 17.2 u



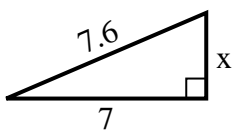
8) perímetro = 21.5 u



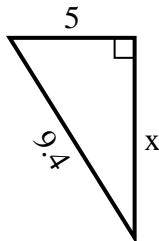
9) perímetro = 20.9 u



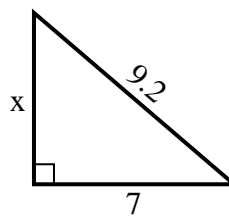
10) perímetro = 17.6 u



11) perímetro = 22.4 u



12) perímetro = 22.2 u



1. 3

2. 2

3. 8

4. 4

5. 6

6. 6

7. 4

8. 3

9. 4

10. 3

11. 8

12. 6