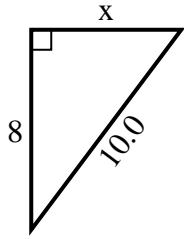




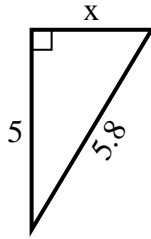
SPANISH_INSTRUCTIONS

Respuestas

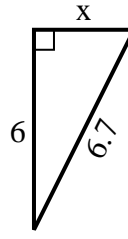
1) perímetro = 24 u



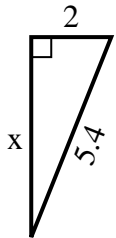
2) perímetro = 13.8 u



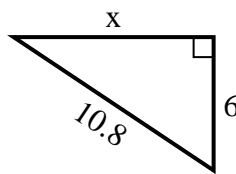
3) perímetro = 15.7 u



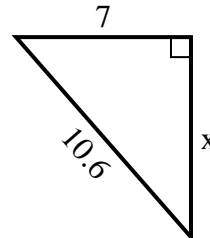
4) perímetro = 12.4 u



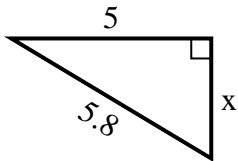
5) perímetro = 25.8 u



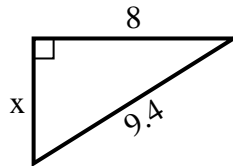
6) perímetro = 25.6 u



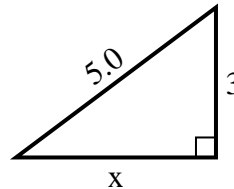
7) perímetro = 13.8 u



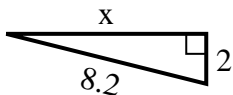
8) perímetro = 22.4 u



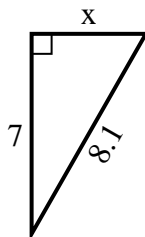
9) perímetro = 12 u



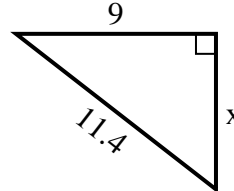
10) perímetro = 18.2 u



11) perímetro = 19.1 u



12) perímetro = 27.4 u



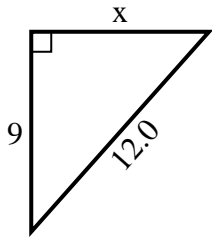
1. 6
2. 3
3. 3
4. 5
5. 9
6. 8
7. 3
8. 5
9. 4
10. 8
11. 4
12. 7



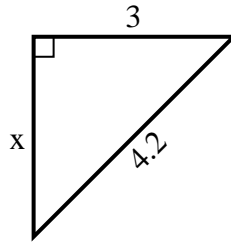
SPANISH_INSTRUCTIONS

Respuestas

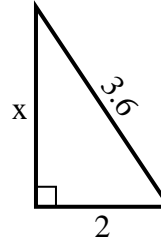
1) perímetro = 29 u



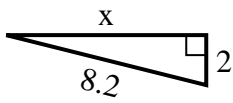
2) perímetro = 10.2 u



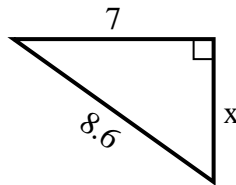
3) perímetro = 8.6 u



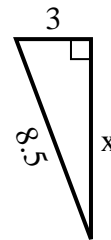
4) perímetro = 18.2 u



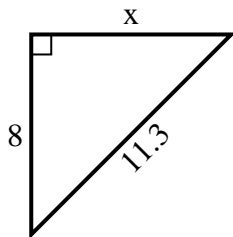
5) perímetro = 20.6 u



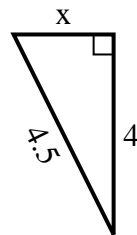
6) perímetro = 19.5 u



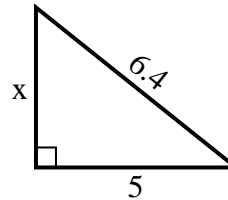
7) perímetro = 27.3 u



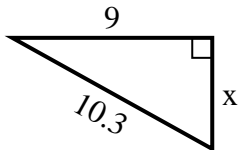
8) perímetro = 10.5 u



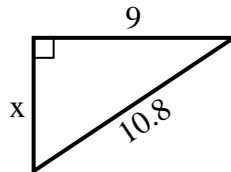
9) perímetro = 15.4 u



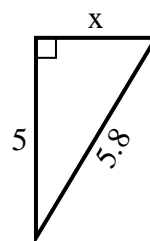
10) perímetro = 24.3 u



11) perímetro = 25.8 u



12) perímetro = 13.8 u



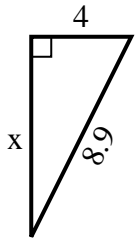
1. 8
2. 3
3. 3
4. 8
5. 5
6. 8
7. 8
8. 2
9. 4
10. 5
11. 6
12. 3



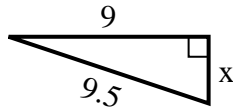
SPANISH_INSTRUCTIONS

Respuestas

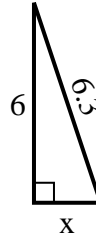
1) perímetro = 20.9 u



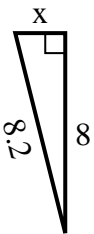
2) perímetro = 21.5 u



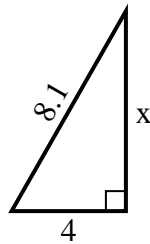
3) perímetro = 14.3 u



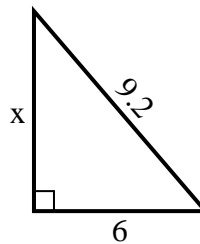
4) perímetro = 18.2 u



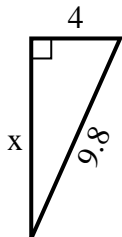
5) perímetro = 19.1 u



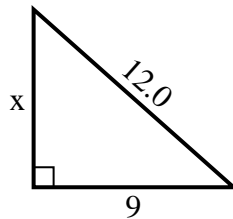
6) perímetro = 22.2 u



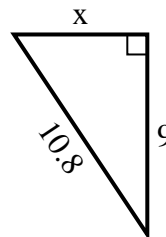
7) perímetro = 22.8 u



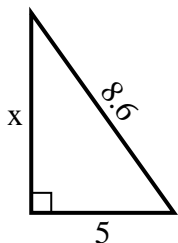
8) perímetro = 29 u



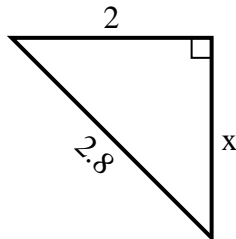
9) perímetro = 25.8 u



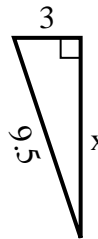
10) perímetro = 20.6 u



11) perímetro = 6.8 u



12) perímetro = 21.5 u



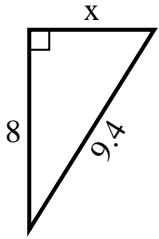
1. 8
2. 3
3. 2
4. 2
5. 7
6. 7
7. 9
8. 8
9. 6
10. 7
11. 2
12. 9



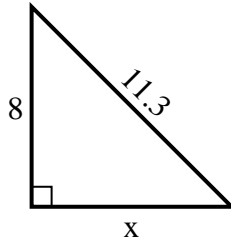
SPANISH_INSTRUCTIONS

Respuestas

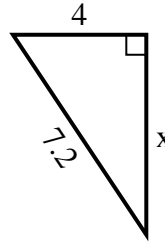
1) perímetro = 22.4 u



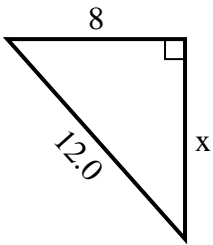
2) perímetro = 27.3 u



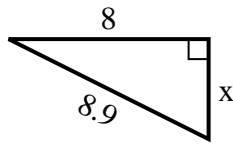
3) perímetro = 17.2 u



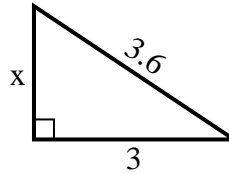
4) perímetro = 29 u



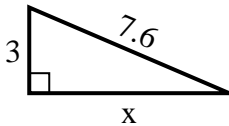
5) perímetro = 20.9 u



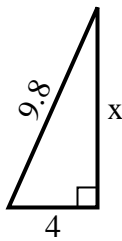
6) perímetro = 8.6 u



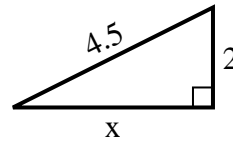
7) perímetro = 17.6 u



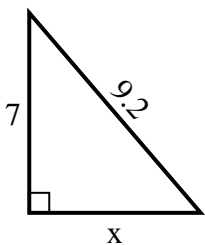
8) perímetro = 22.8 u



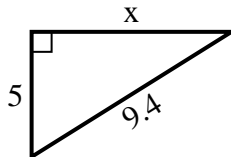
9) perímetro = 10.5 u



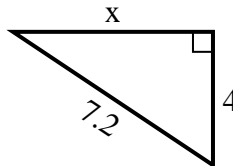
10) perímetro = 22.2 u



11) perímetro = 22.4 u



12) perímetro = 17.2 u



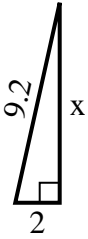
1. 5
2. 8
3. 6
4. 9
5. 4
6. 2
7. 7
8. 9
9. 4
10. 6
11. 8
12. 6



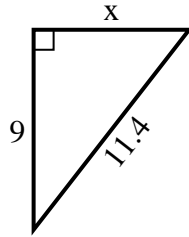
SPANISH_INSTRUCTIONS

Respuestas

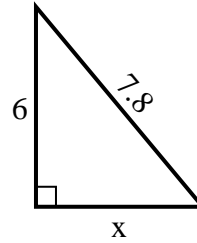
1) perímetro = 20.2 u



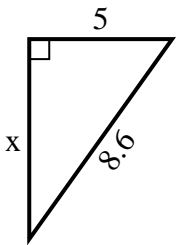
2) perímetro = 27.4 u



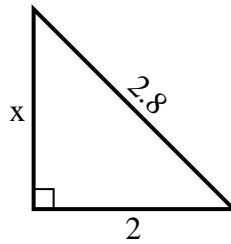
3) perímetro = 18.8 u



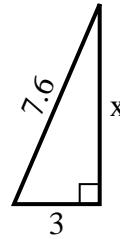
4) perímetro = 20.6 u



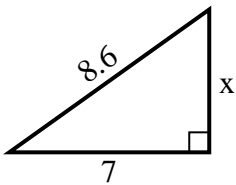
5) perímetro = 6.8 u



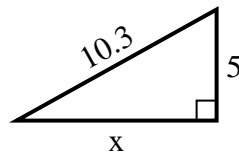
6) perímetro = 17.6 u



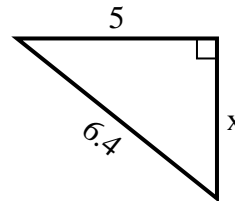
7) perímetro = 20.6 u



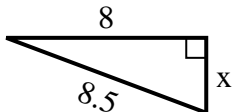
8) perímetro = 24.3 u



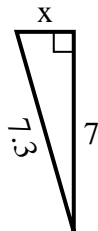
9) perímetro = 15.4 u



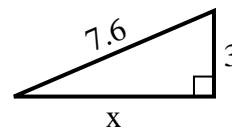
10) perímetro = 19.5 u



11) perímetro = 16.3 u



12) perímetro = 17.6 u



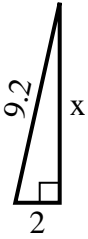
1. _____
2. _____
3. _____
4. _____
5. _____
6. _____
7. _____
8. _____
9. _____
10. _____
11. _____
12. _____



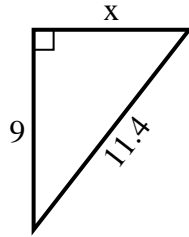
SPANISH_INSTRUCTIONS

Respuestas

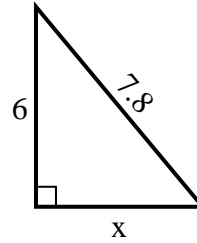
1) perímetro = 20.2 u



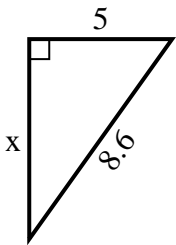
2) perímetro = 27.4 u



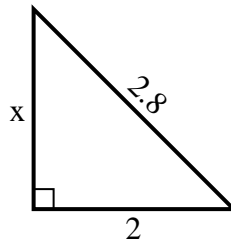
3) perímetro = 18.8 u



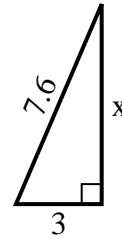
4) perímetro = 20.6 u



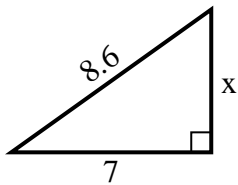
5) perímetro = 6.8 u



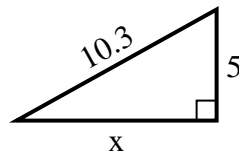
6) perímetro = 17.6 u



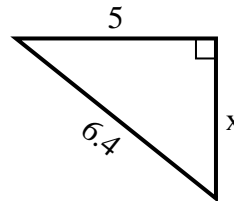
7) perímetro = 20.6 u



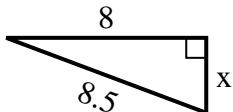
8) perímetro = 24.3 u



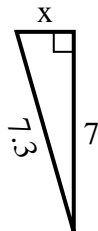
9) perímetro = 15.4 u



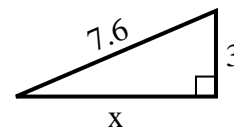
10) perímetro = 19.5 u



11) perímetro = 16.3 u



12) perímetro = 17.6 u



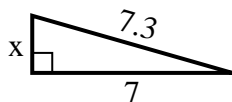
1. 9
2. 7
3. 5
4. 7
5. 2
6. 7
7. 5
8. 9
9. 4
10. 3
11. 2
12. 7



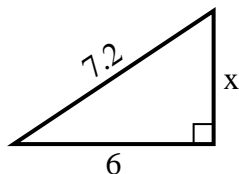
SPANISH_INSTRUCTIONS

Respuestas

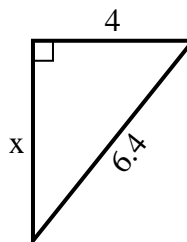
1) perímetro = 16.3 u



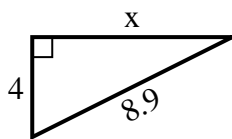
2) perímetro = 17.2 u



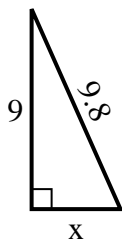
3) perímetro = 15.4 u



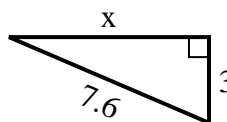
4) perímetro = 20.9 u



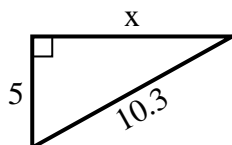
5) perímetro = 22.8 u



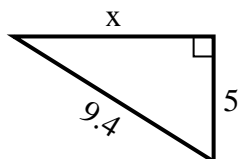
6) perímetro = 17.6 u



7) perímetro = 24.3 u



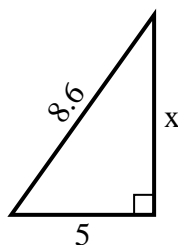
8) perímetro = 22.4 u



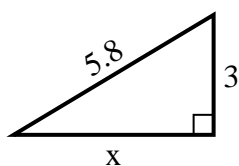
9) perímetro = 12.4 u



10) perímetro = 20.6 u



11) perímetro = 13.8 u



12) perímetro = 19.5 u



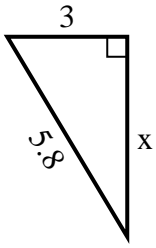
1. 2
2. 4
3. 5
4. 8
5. 4
6. 7
7. 9
8. 8
9. 2
10. 7
11. 5
12. 3



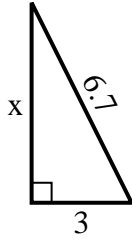
SPANISH_INSTRUCTIONS

Respuestas

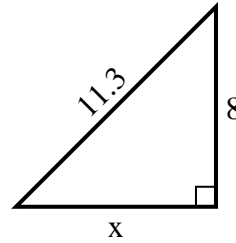
1) perímetro = 13.8 u



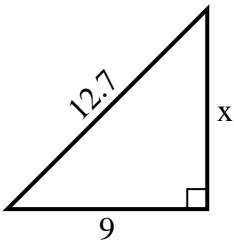
2) perímetro = 15.7 u



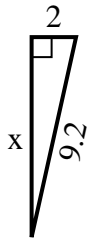
3) perímetro = 27.3 u



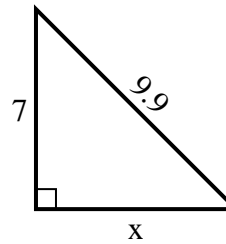
4) perímetro = 30.7 u



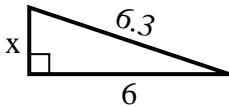
5) perímetro = 20.2 u



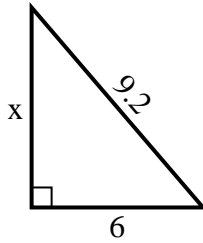
6) perímetro = 23.9 u



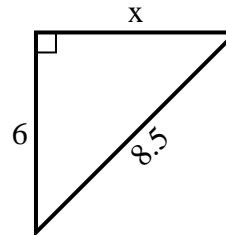
7) perímetro = 14.3 u



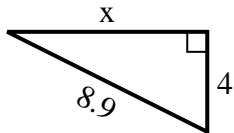
8) perímetro = 22.2 u



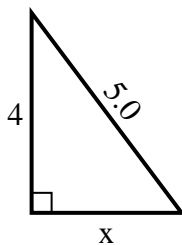
9) perímetro = 20.5 u



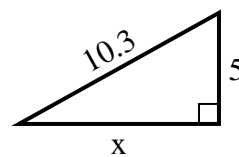
10) perímetro = 20.9 u



11) perímetro = 12 u



12) perímetro = 24.3 u



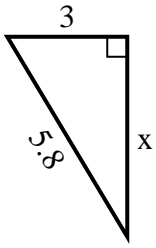
1. _____
2. _____
3. _____
4. _____
5. _____
6. _____
7. _____
8. _____
9. _____
10. _____
11. _____
12. _____



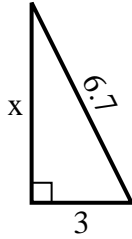
SPANISH_INSTRUCTIONS

Respuestas

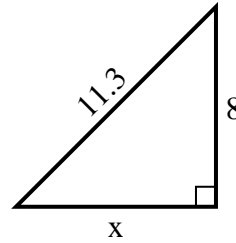
1) perímetro = 13.8 u



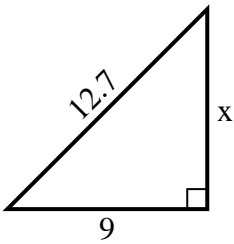
2) perímetro = 15.7 u



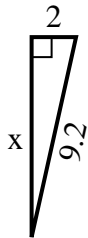
3) perímetro = 27.3 u



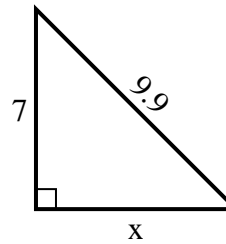
4) perímetro = 30.7 u



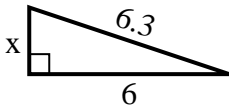
5) perímetro = 20.2 u



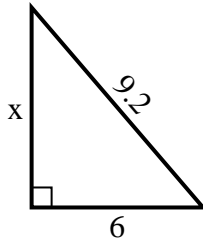
6) perímetro = 23.9 u



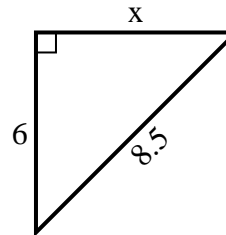
7) perímetro = 14.3 u



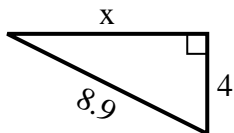
8) perímetro = 22.2 u



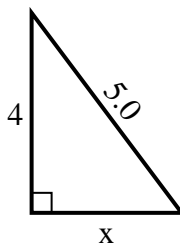
9) perímetro = 20.5 u



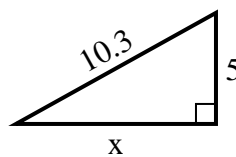
10) perímetro = 20.9 u



11) perímetro = 12 u



12) perímetro = 24.3 u



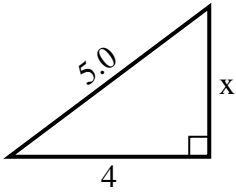
1. 5
2. 6
3. 8
4. 9
5. 9
6. 7
7. 2
8. 7
9. 6
10. 8
11. 3
12. 9



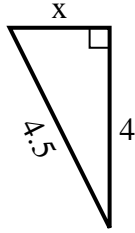
SPANISH_INSTRUCTIONS

Respuestas

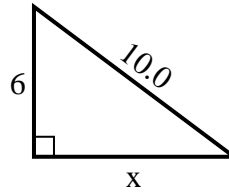
1) perímetro = 12 u



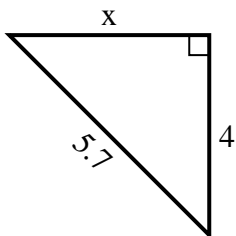
2) perímetro = 10.5 u



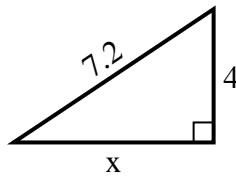
3) perímetro = 24 u



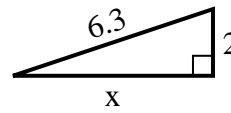
4) perímetro = 13.7 u



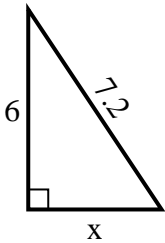
5) perímetro = 17.2 u



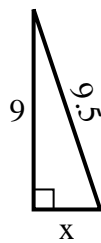
6) perímetro = 14.3 u



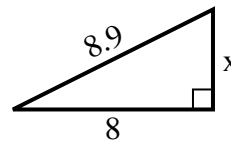
7) perímetro = 17.2 u



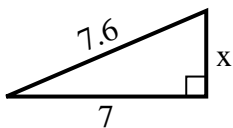
8) perímetro = 21.5 u



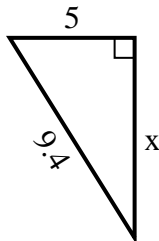
9) perímetro = 20.9 u



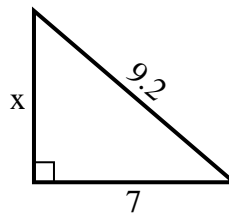
10) perímetro = 17.6 u



11) perímetro = 22.4 u



12) perímetro = 22.2 u



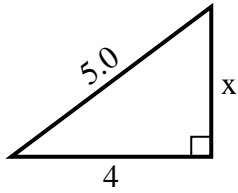
1. _____
2. _____
3. _____
4. _____
5. _____
6. _____
7. _____
8. _____
9. _____
10. _____
11. _____
12. _____



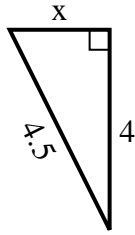
SPANISH_INSTRUCTIONS

Respuestas

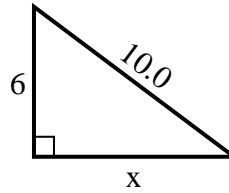
1) perímetro = 12 u



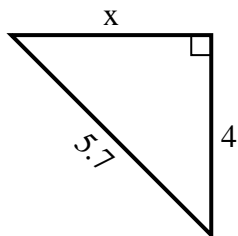
2) perímetro = 10.5 u



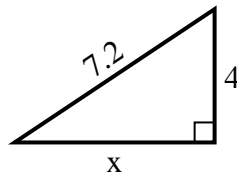
3) perímetro = 24 u



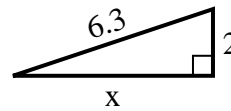
4) perímetro = 13.7 u



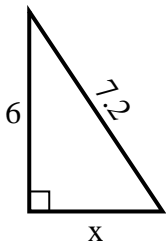
5) perímetro = 17.2 u



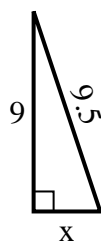
6) perímetro = 14.3 u



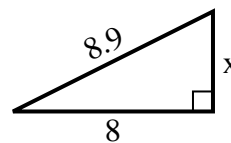
7) perímetro = 17.2 u



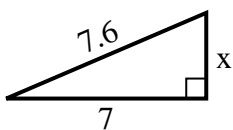
8) perímetro = 21.5 u



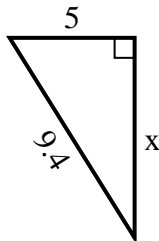
9) perímetro = 20.9 u



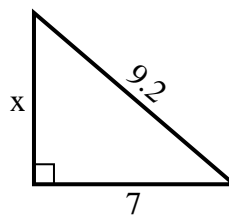
10) perímetro = 17.6 u



11) perímetro = 22.4 u



12) perímetro = 22.2 u



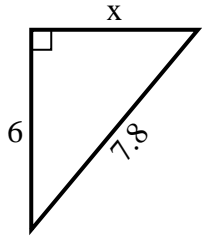
1. 3
2. 2
3. 8
4. 4
5. 6
6. 6
7. 4
8. 3
9. 4
10. 3
11. 8
12. 6



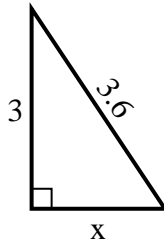
SPANISH_INSTRUCTIONS

Respuestas

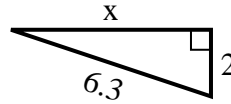
1) perímetro = 18.8 u



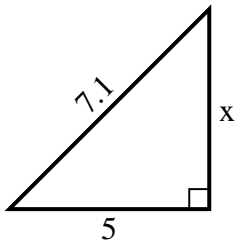
2) perímetro = 8.6 u



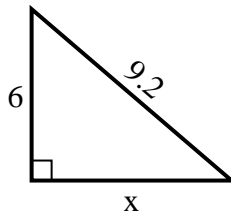
3) perímetro = 14.3 u



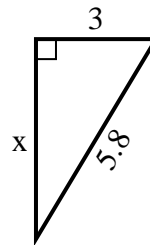
4) perímetro = 17.1 u



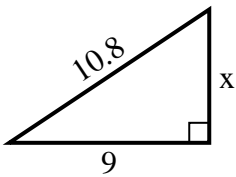
5) perímetro = 22.2 u



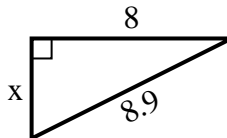
6) perímetro = 13.8 u



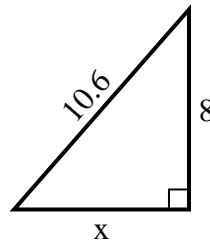
7) perímetro = 25.8 u



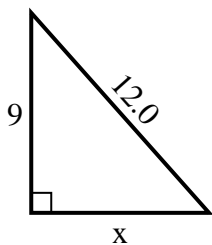
8) perímetro = 20.9 u



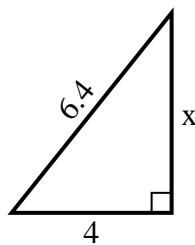
9) perímetro = 25.6 u



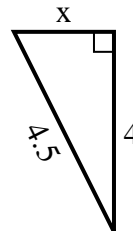
10) perímetro = 29 u



11) perímetro = 15.4 u



12) perímetro = 10.5 u



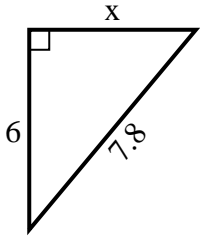
1. _____
2. _____
3. _____
4. _____
5. _____
6. _____
7. _____
8. _____
9. _____
10. _____
11. _____
12. _____



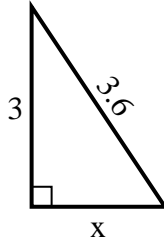
SPANISH_INSTRUCTIONS

Respuestas

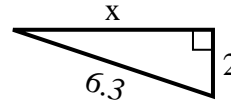
1) perímetro = 18.8 u



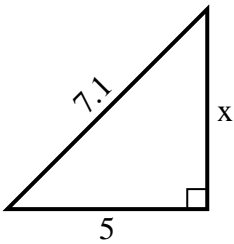
2) perímetro = 8.6 u



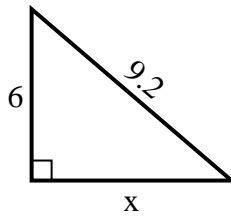
3) perímetro = 14.3 u



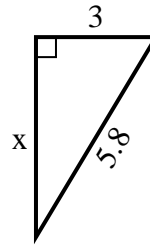
4) perímetro = 17.1 u



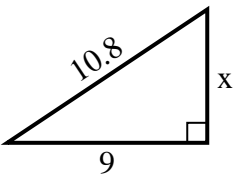
5) perímetro = 22.2 u



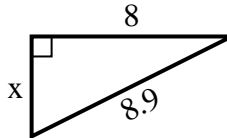
6) perímetro = 13.8 u



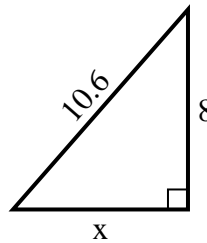
7) perímetro = 25.8 u



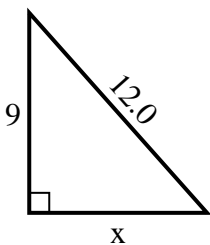
8) perímetro = 20.9 u



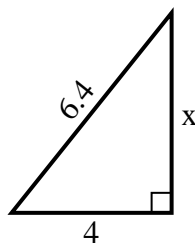
9) perímetro = 25.6 u



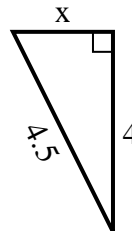
10) perímetro = 29 u



11) perímetro = 15.4 u



12) perímetro = 10.5 u



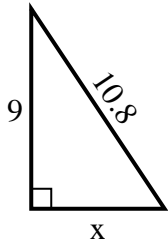
1. 5
2. 2
3. 6
4. 5
5. 7
6. 5
7. 6
8. 4
9. 7
10. 8
11. 5
12. 2



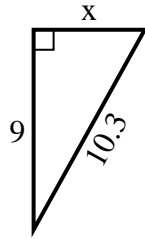
SPANISH_INSTRUCTIONS

Respuestas

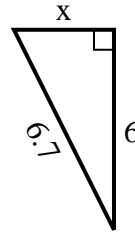
1) perímetro = 25.8 u



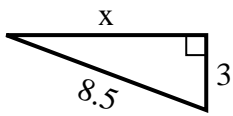
2) perímetro = 24.3 u



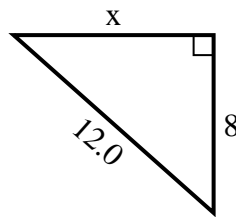
3) perímetro = 15.7 u



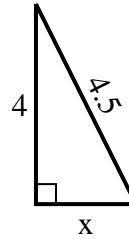
4) perímetro = 19.5 u



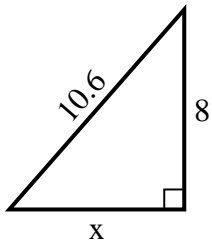
5) perímetro = 29 u



6) perímetro = 10.5 u



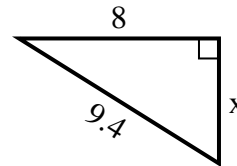
7) perímetro = 25.6 u



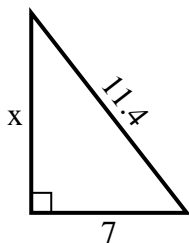
8) perímetro = 14.3 u



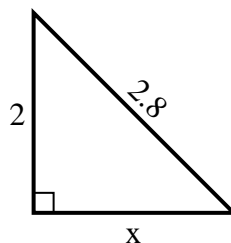
9) perímetro = 22.4 u



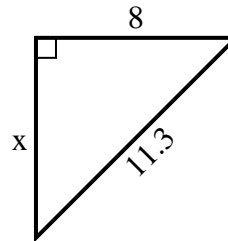
10) perímetro = 27.4 u



11) perímetro = 6.8 u



12) perímetro = 27.3 u



1. _____
2. _____
3. _____
4. _____
5. _____
6. _____
7. _____
8. _____
9. _____
10. _____
11. _____
12. _____

