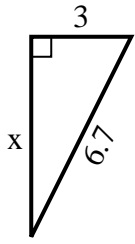




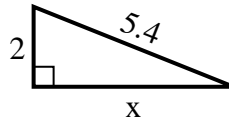
**SPANISH\_INSTRUCTIONS**

**Respuestas**

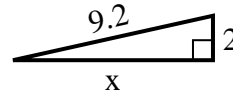
1) perímetro = 15.7 u



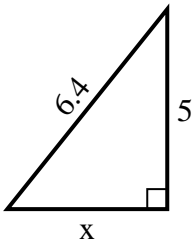
2) perímetro = 12.4 u



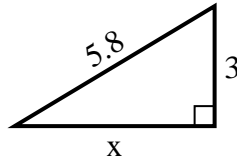
3) perímetro = 20.2 u



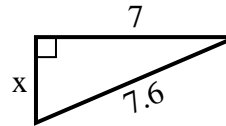
4) perímetro = 15.4 u



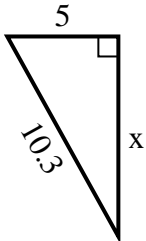
5) perímetro = 13.8 u



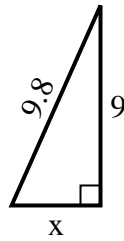
6) perímetro = 17.6 u



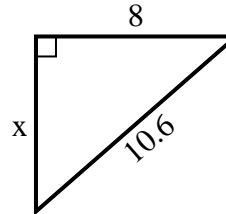
7) perímetro = 24.3 u



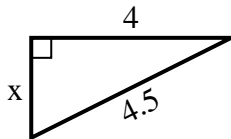
8) perímetro = 22.8 u



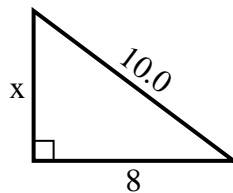
9) perímetro = 25.6 u



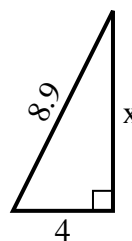
10) perímetro = 10.5 u



11) perímetro = 24 u



12) perímetro = 20.9 u



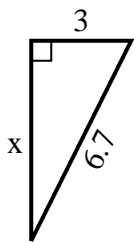
1. \_\_\_\_\_
2. \_\_\_\_\_
3. \_\_\_\_\_
4. \_\_\_\_\_
5. \_\_\_\_\_
6. \_\_\_\_\_
7. \_\_\_\_\_
8. \_\_\_\_\_
9. \_\_\_\_\_
10. \_\_\_\_\_
11. \_\_\_\_\_
12. \_\_\_\_\_



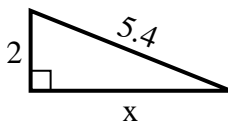
**SPANISH\_INSTRUCTIONS**

**Respuestas**

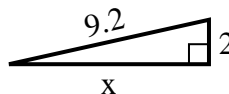
1) perímetro = 15.7 u



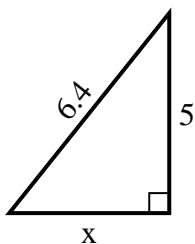
2) perímetro = 12.4 u



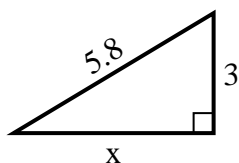
3) perímetro = 20.2 u



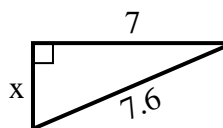
4) perímetro = 15.4 u



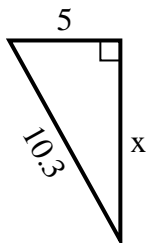
5) perímetro = 13.8 u



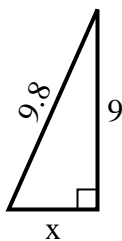
6) perímetro = 17.6 u



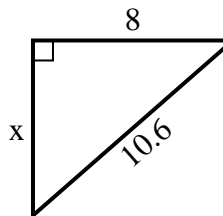
7) perímetro = 24.3 u



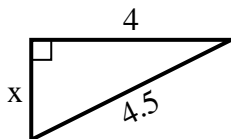
8) perímetro = 22.8 u



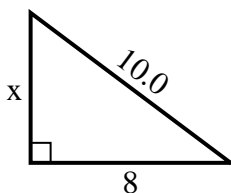
9) perímetro = 25.6 u



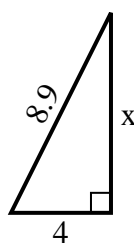
10) perímetro = 10.5 u



11) perímetro = 24 u



12) perímetro = 20.9 u



1. 6

2. 5

3. 9

4. 4

5. 5

6. 3

7. 9

8. 4

9. 7

10. 2

11. 6

12. 8