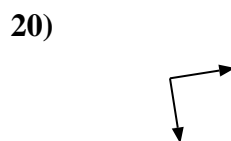
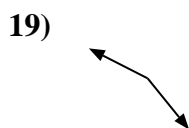
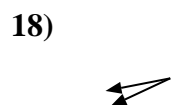
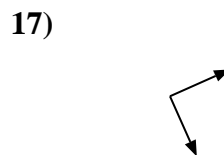
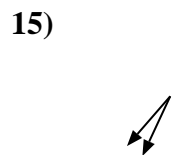
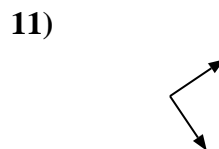
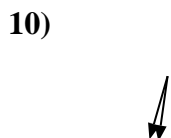
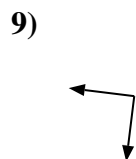
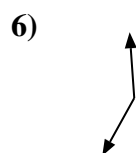
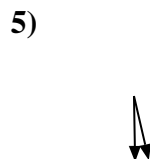
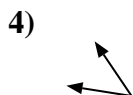
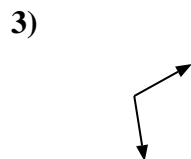
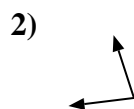
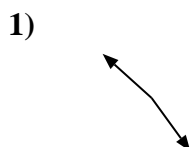
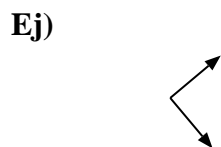




Determina si el ángulo mostrado es 'mayor', 'menor' o 'igual' a 90°.

Respuestas



Ej. igual

1. _____

2. _____

3. _____

4. _____

5. _____

6. _____

7. _____

8. _____

9. _____

10. _____

11. _____

12. _____

13. _____

14. _____

15. _____

16. _____

17. _____

18. _____

19. _____

20. _____



Determina si el ángulo mostrado es 'mayor', 'menor' o 'igual' a 90° .

Ej)



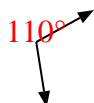
1)



2)



3)



4)



5)



6)



7)



8)



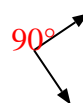
9)



10)



11)



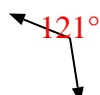
12)



13)



14)



15)



16)



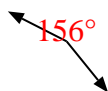
17)



18)



19)



20)



Respuestas

Ej. igual

1. mayor

2. menor

3. mayor

4. menor

5. menor

6. mayor

7. igual

8. mayor

9. igual

10. menor

11. igual

12. menor

13. menor

14. mayor

15. menor

16. igual

17. igual

18. menor

19. mayor

20. igual