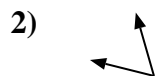
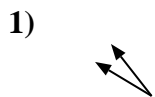
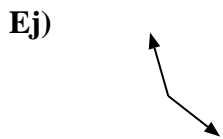




Determina si el ángulo mostrado es 'mayor', 'menor' o 'igual' a 90°.

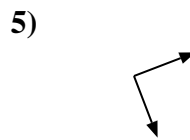
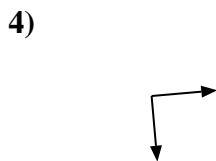
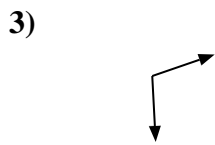


Respuestas

Ej. mayor

1. _____

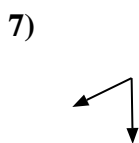
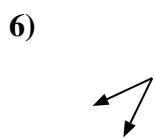
2. _____



3. _____

4. _____

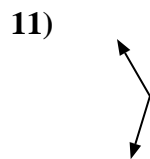
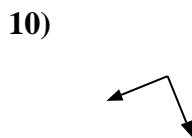
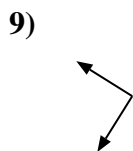
5. _____



6. _____

7. _____

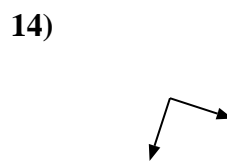
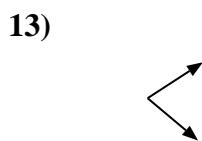
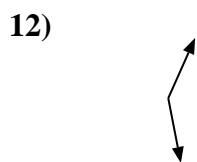
8. _____



9. _____

10. _____

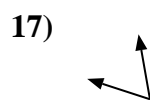
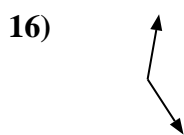
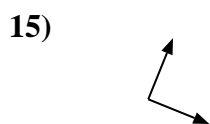
11. _____



12. _____

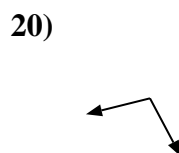
13. _____

14. _____



15. _____

16. _____



17. _____

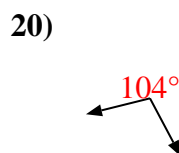
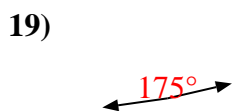
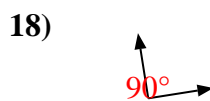
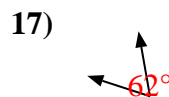
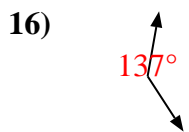
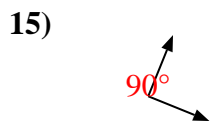
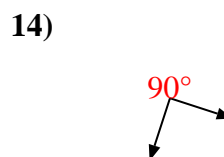
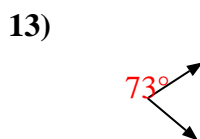
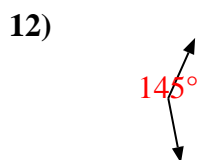
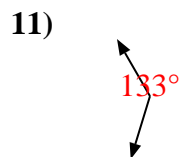
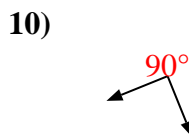
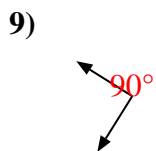
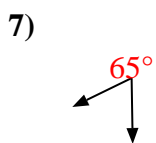
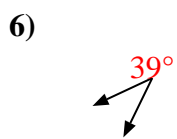
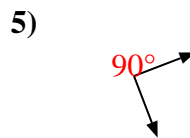
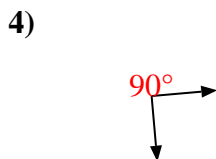
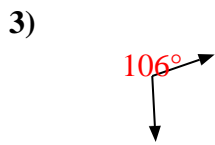
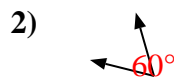
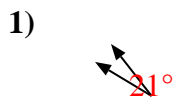
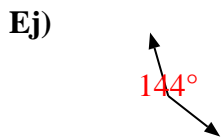
18. _____

19. _____

20. _____



Determina si el ángulo mostrado es 'mayor', 'menor' o 'igual' a 90° .



Respuestas

Ej. mayor

1. menor

2. menor

3. mayor

4. igual

5. igual

6. menor

7. menor

8. menor

9. igual

10. igual

11. mayor

12. mayor

13. menor

14. igual

15. igual

16. mayor

17. menor

18. igual

19. mayor

20. mayor