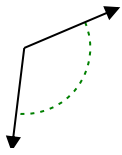




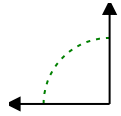
Determina si el ángulo mostrado es agudo, obtuso, recto o llano.

**Respuestas**

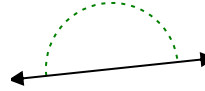
Ej)



1)



2)

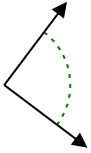


Ej. obtuso

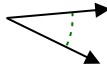
1. \_\_\_\_\_

2. \_\_\_\_\_

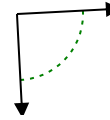
3)



4)



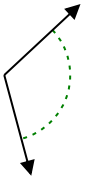
5)



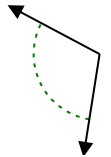
3. \_\_\_\_\_

4. \_\_\_\_\_

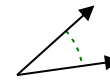
6)



7)



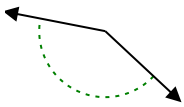
8)



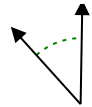
5. \_\_\_\_\_

6. \_\_\_\_\_

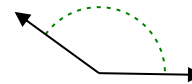
9)



10)



11)



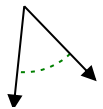
7. \_\_\_\_\_

8. \_\_\_\_\_

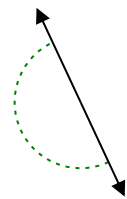
9. \_\_\_\_\_

10. \_\_\_\_\_

12)



13)



14)

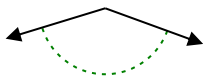


11. \_\_\_\_\_

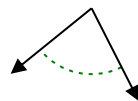
12. \_\_\_\_\_

13. \_\_\_\_\_

15)



16)



17)

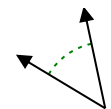


14. \_\_\_\_\_

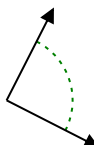
15. \_\_\_\_\_

16. \_\_\_\_\_

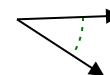
18)



19)



20)



17. \_\_\_\_\_

18. \_\_\_\_\_

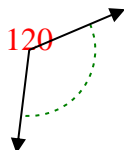
19. \_\_\_\_\_

20. \_\_\_\_\_

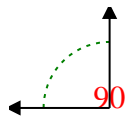


Determina si el ángulo mostrado es agudo, obtuso, recto o llano.

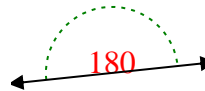
Ej)



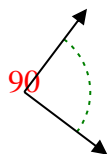
1)



2)



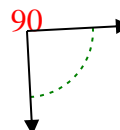
3)



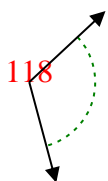
4)



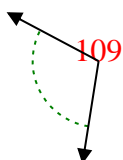
5)



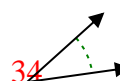
6)



7)



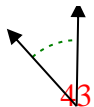
8)



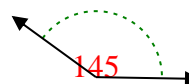
9)



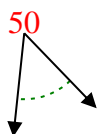
10)



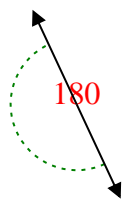
11)



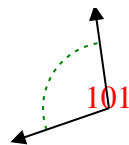
12)



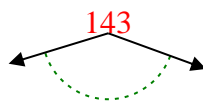
13)



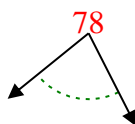
14)



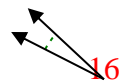
15)



16)



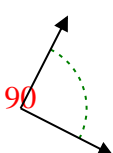
17)



18)



19)



20)



**Respuestas**

Ej. obtuso

1. derecho

2. recto

3. derecho

4. agudo

5. derecho

6. obtuso

7. obtuso

8. agudo

9. obtuso

10. agudo

11. obtuso

12. agudo

13. recto

14. obtuso

15. obtuso

16. agudo

17. agudo

18. agudo

19. derecho

20. agudo