



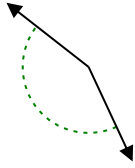
Determina si el ángulo mostrado es agudo, obtuso, recto o llano.

Respuestas

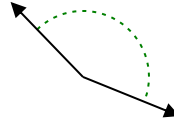
Ej)



1)

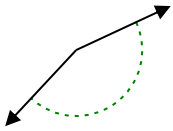


2)

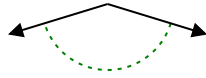


Ej. **recto**

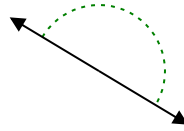
3)



4)



5)



1. _____

2. _____

6)



7)



8)



3. _____

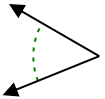
4. _____

5. _____

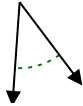
6. _____

7. _____

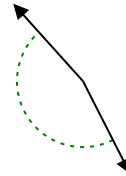
9)



10)



11)



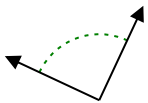
8. _____

9. _____

10. _____

11. _____

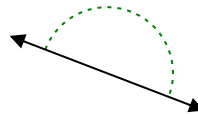
12)



13)



14)

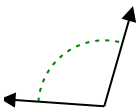


12. _____

13. _____

14. _____

15)



16)



17)



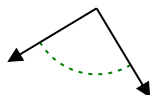
15. _____

16. _____

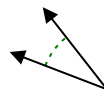
18)



19)



20)



17. _____

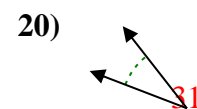
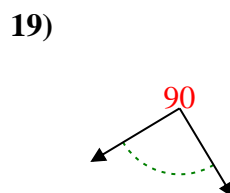
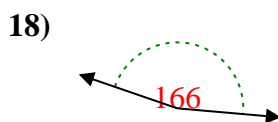
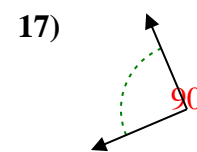
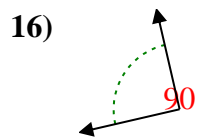
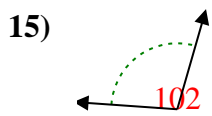
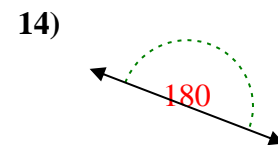
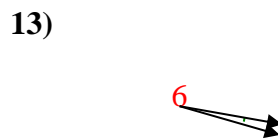
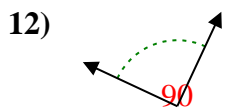
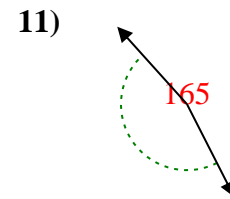
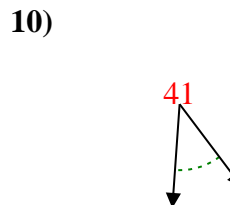
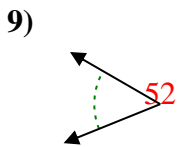
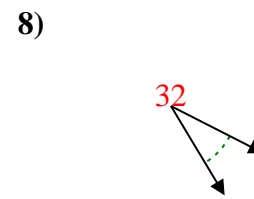

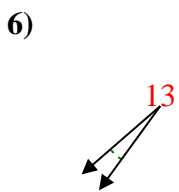
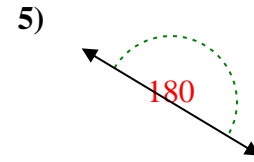
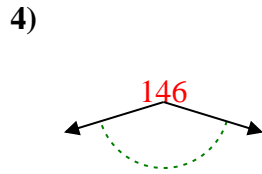
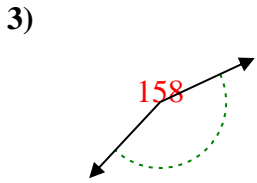
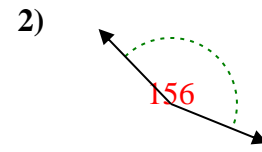
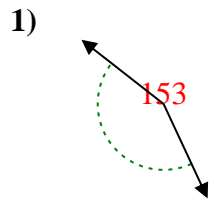
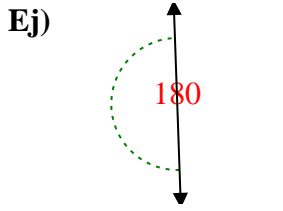
18. _____

19. _____

20. _____



Determina si el ángulo mostrado es agudo, obtuso, recto o llano.



Respuestas

Ej. recto

1. obtuso

2. obtuso

3. obtuso

4. obtuso

5. recto

6. agudo

7. agudo

8. agudo

9. agudo

10. agudo

11. obtuso

12. derecho

13. agudo

14. recto

15. obtuso

16. derecho

17. derecho

18. obtuso

19. derecho

20. agudo