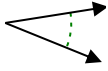


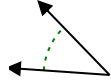


Determina si el ángulo mostrado es agudo, obtuso, recto o llano.

Ej)



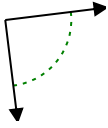
1)



2)



3)



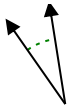
4)



5)



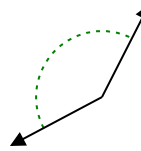
6)



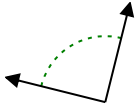
7)



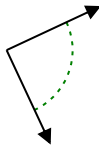
8)



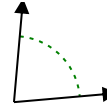
9)



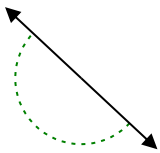
10)



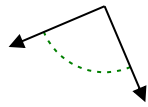
11)



12)



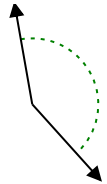
13)



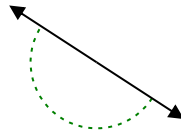
14)



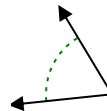
15)



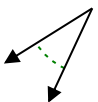
16)



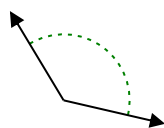
17)



18)



19)



20)



**Respuestas**

Ej. agudo

1. \_\_\_\_\_

2. \_\_\_\_\_

3. \_\_\_\_\_

4. \_\_\_\_\_

5. \_\_\_\_\_

6. \_\_\_\_\_

7. \_\_\_\_\_

8. \_\_\_\_\_

9. \_\_\_\_\_

10. \_\_\_\_\_

11. \_\_\_\_\_

12. \_\_\_\_\_

13. \_\_\_\_\_

14. \_\_\_\_\_

15. \_\_\_\_\_

16. \_\_\_\_\_

17. \_\_\_\_\_

18. \_\_\_\_\_

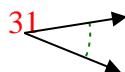
19. \_\_\_\_\_

20. \_\_\_\_\_

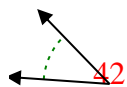


Determina si el ángulo mostrado es agudo, obtuso, recto o llano.

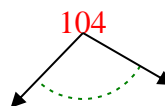
Ej)



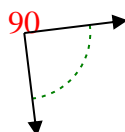
1)



2)



3)



4)



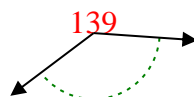
5)



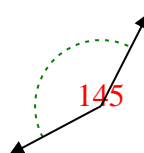
6)



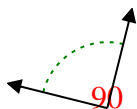
7)



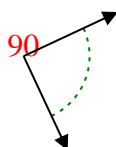
8)



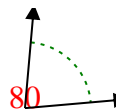
9)



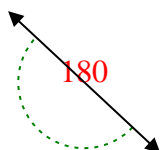
10)



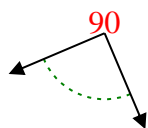
11)



12)



13)



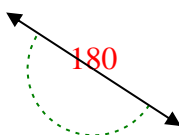
14)



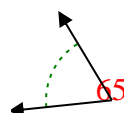
15)



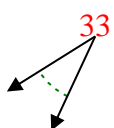
16)



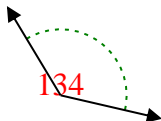
17)



18)



19)



20)



**Respuestas**

Ej. **agudo**

1. **agudo**

2. **obtuso**

3. **derecho**

4. **agudo**

5. **obtuso**

6. **agudo**

7. **obtuso**

8. **obtuso**

9. **derecho**

10. **derecho**

11. **agudo**

12. **recto**

13. **derecho**

14. **obtuso**

15. **obtuso**

16. **recto**

17. **agudo**

18. **agudo**

19. **obtuso**

20. **obtuso**