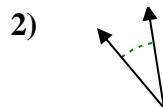

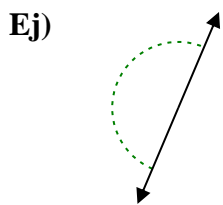




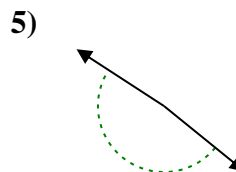
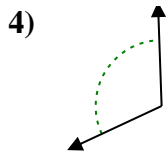
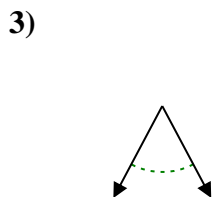
Determina si el ángulo mostrado es agudo, obtuso, recto o llano.

Respuestas



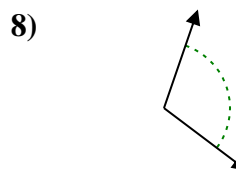
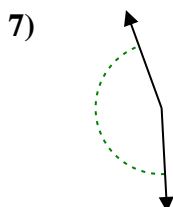
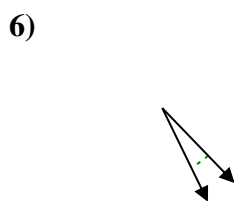
Ej. recto

1. _____



2. _____

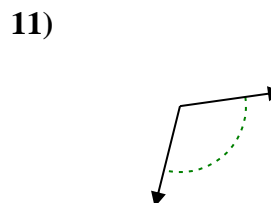
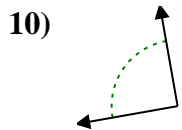
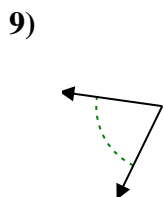
3. _____



4. _____

5. _____

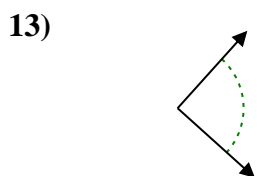
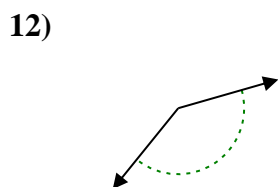
6. _____



7. _____

8. _____

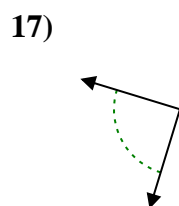
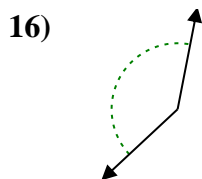
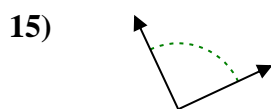
9. _____



10. _____

11. _____

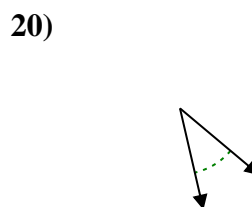
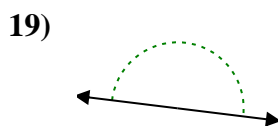
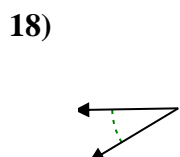
12. _____



13. _____

14. _____

15. _____



16. _____

17. _____

18. _____

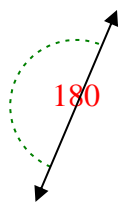
19. _____

20. _____

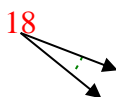


Determina si el ángulo mostrado es agudo, obtuso, recto o llano.

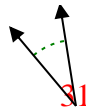
Ej)



1)

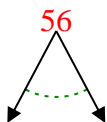


2)

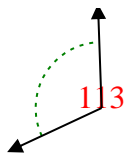


Ej. **recto**

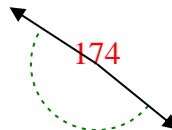
3)



4)

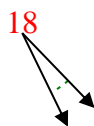


5)



1. **agudo**

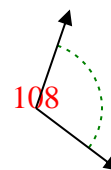
6)



7)

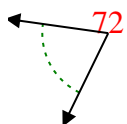


8)

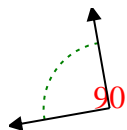


2. **agudo**

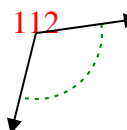
9)



10)

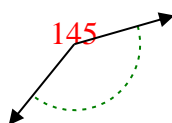


11)

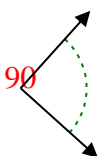


3. **agudo**

12)



13)

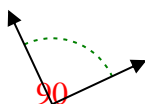


14)



4. **obtuso**

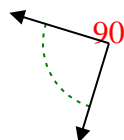
15)



16)



17)

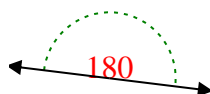


5. **obtuso**

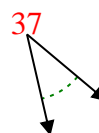
18)



19)



20)



6. **agudo**

7. **obtuso**

8. **obtuso**

9. **agudo**

10. **derecho**

11. **obtuso**

12. **obtuso**

13. **derecho**

14. **agudo**

15. **derecho**

16. **obtuso**

17. **derecho**

18. **agudo**

19. **recto**

20. **agudo**