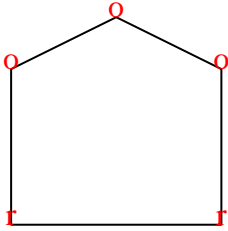


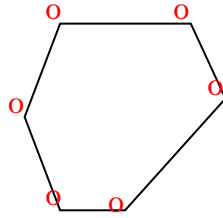


Cuenta el número de ángulos Agudos, Obtusos y Rectos dentro de cada figura

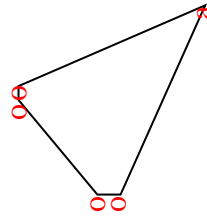
Ej)



1)



2)



Ej.

Respuestas

0 3 2

1.

0 6 0

2.

1 4 0

3.

1 2 1

4.

3 0 0

5.

0 2 3

6.

2 0 1

7.

0 4 2

8.

0 6 0

9.

0 7 0

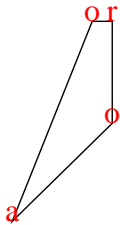
10.

0 2 3

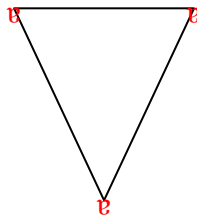
11.

2 2 0

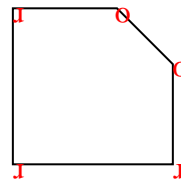
3)



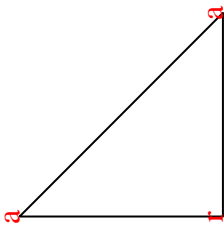
4)



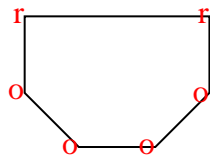
5)



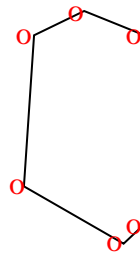
6)



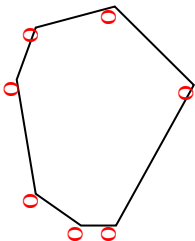
7)



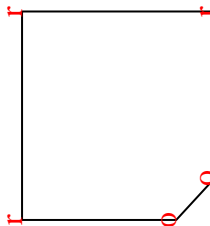
8)



9)



10)



11)

