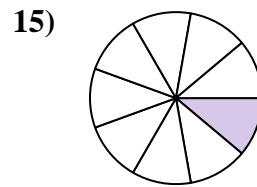
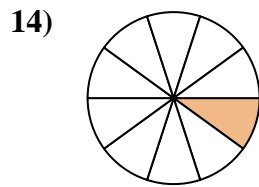
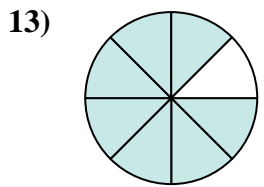
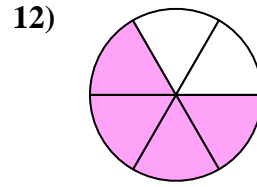
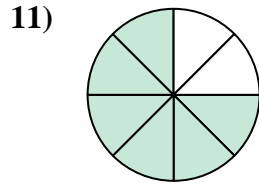
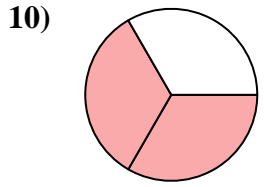
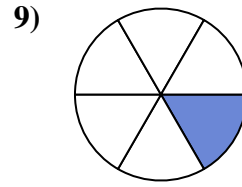
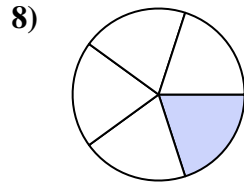
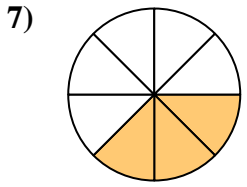
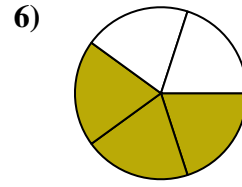
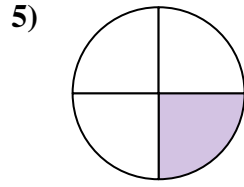
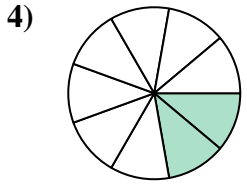
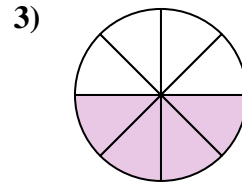
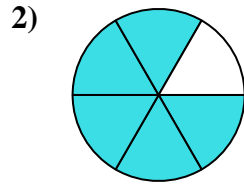
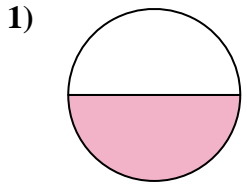




Encuentra el ángulo (en grados) de la parte sombreada del círculo.



Respuestas

1. _____

2. _____

3. _____

4. _____

5. _____

6. _____

7. _____

8. _____

9. _____

10. _____

11. _____

12. _____

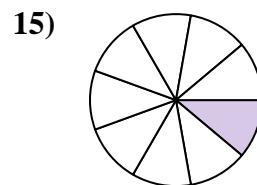
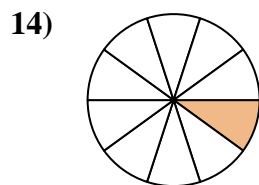
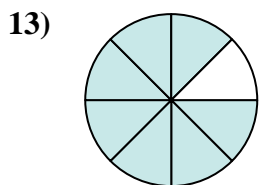
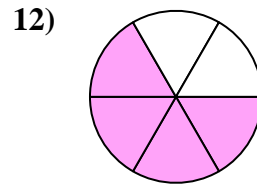
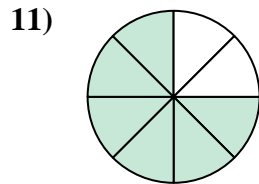
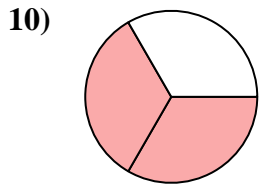
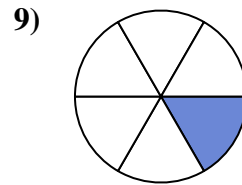
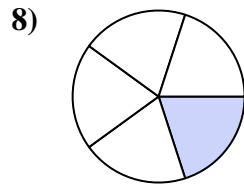
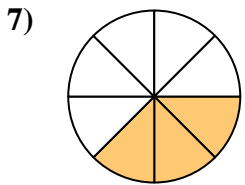
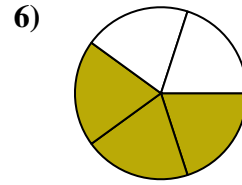
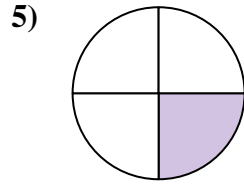
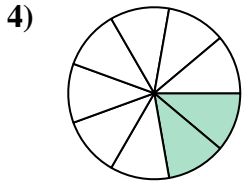
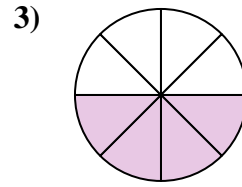
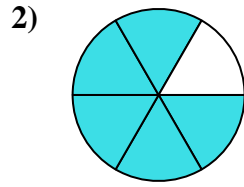
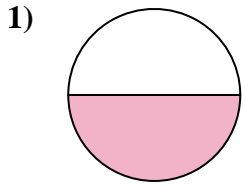
13. _____

14. _____

15. _____



Encuentra el ángulo (en grados) de la parte sombreada del círculo.



Respuestas

1. 180

2. 300

3. 180

4. 80

5. 90

6. 216

7. 135

8. 72

9. 60

10. 240

11. 270

12. 240

13. 315

14. 36

15. 40



Encuentra el ángulo (en grados) de la parte sombreada del círculo.

135

72

80

60

90

216

270

240

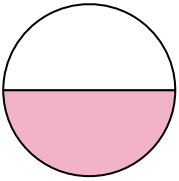
180

180

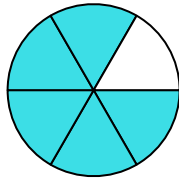
240

300

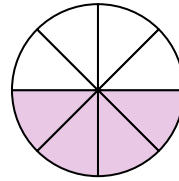
1)



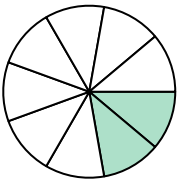
2)



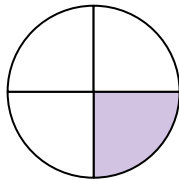
3)



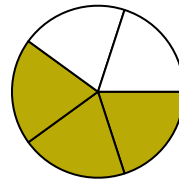
4)



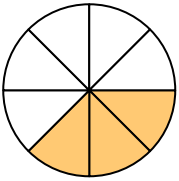
5)



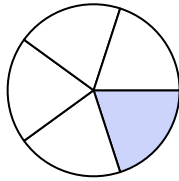
6)



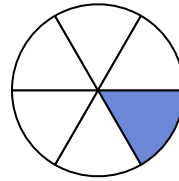
7)



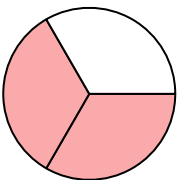
8)



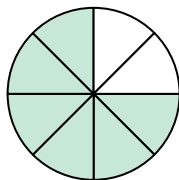
9)



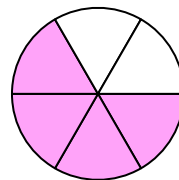
10)



11)



12)



Respuestas

1. _____

2. _____

3. _____

4. _____

5. _____

6. _____

7. _____

8. _____

9. _____

10. _____

11. _____

12. _____