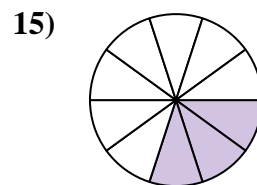
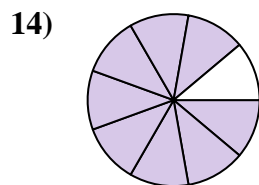
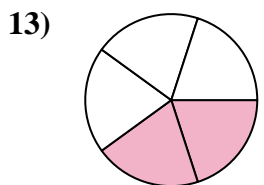
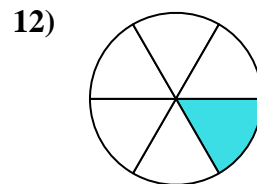
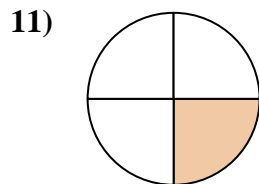
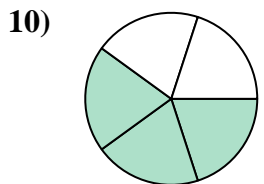
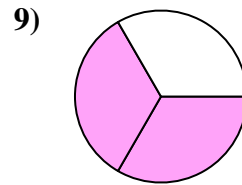
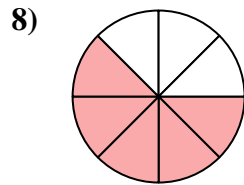
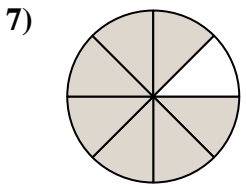
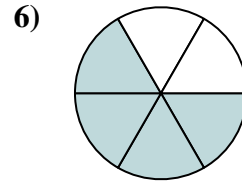
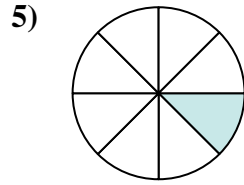
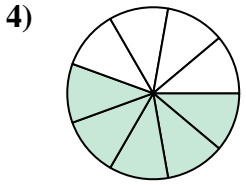
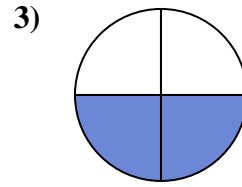
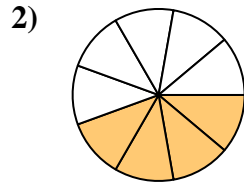
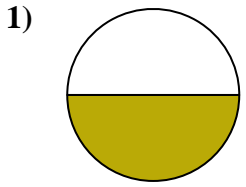




Encuentra el ángulo (en grados) de la parte sombreada del círculo.

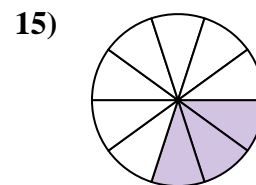
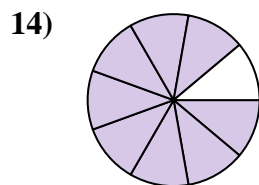
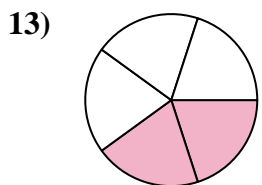
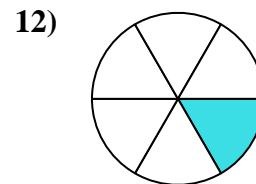
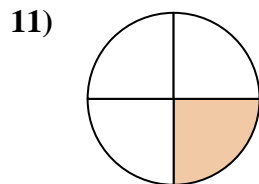
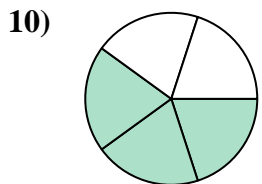
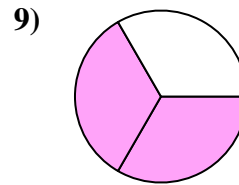
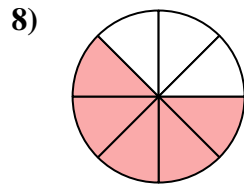
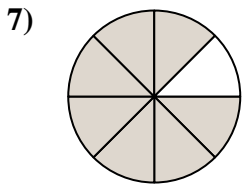
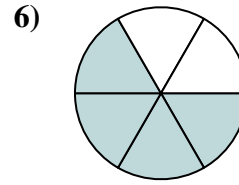
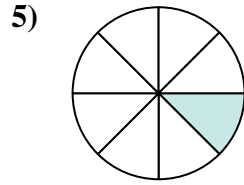
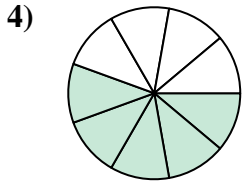
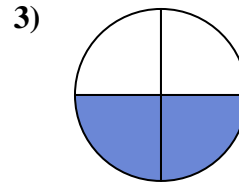
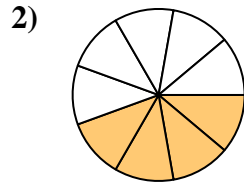
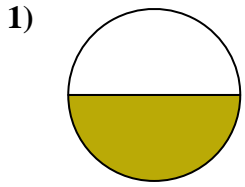
**Respuestas**



1. \_\_\_\_\_
2. \_\_\_\_\_
3. \_\_\_\_\_
4. \_\_\_\_\_
5. \_\_\_\_\_
6. \_\_\_\_\_
7. \_\_\_\_\_
8. \_\_\_\_\_
9. \_\_\_\_\_
10. \_\_\_\_\_
11. \_\_\_\_\_
12. \_\_\_\_\_
13. \_\_\_\_\_
14. \_\_\_\_\_
15. \_\_\_\_\_



Encuentra el ángulo (en grados) de la parte sombreada del círculo.



**Respuestas**

1. 180

2. 160

3. 180

4. 200

5. 45

6. 240

7. 315

8. 225

9. 240

10. 216

11. 90

12. 60

13. 144

14. 320

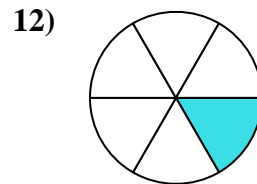
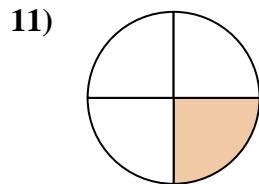
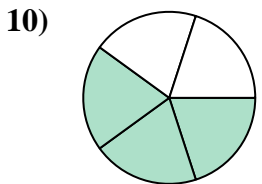
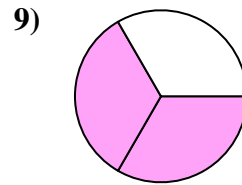
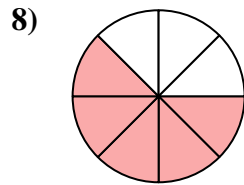
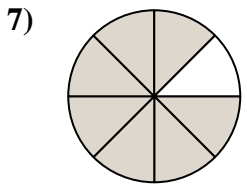
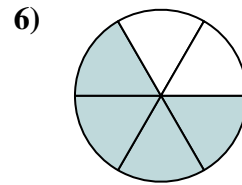
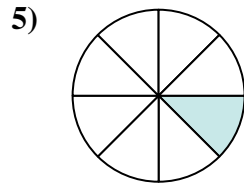
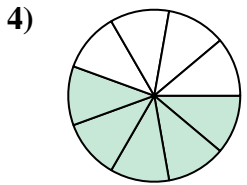
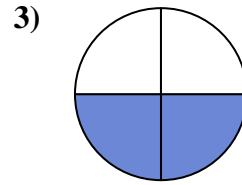
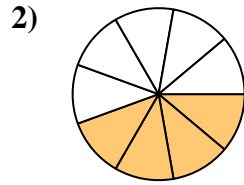
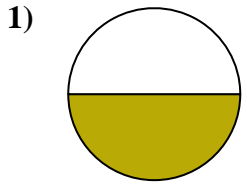
15. 108



Encuentra el ángulo (en grados) de la parte sombreada del círculo.

90	200	240	60	160
216	315	180	45	225
240	180			

**Respuestas**



1. \_\_\_\_\_
2. \_\_\_\_\_
3. \_\_\_\_\_
4. \_\_\_\_\_
5. \_\_\_\_\_
6. \_\_\_\_\_
7. \_\_\_\_\_
8. \_\_\_\_\_
9. \_\_\_\_\_
10. \_\_\_\_\_
11. \_\_\_\_\_
12. \_\_\_\_\_