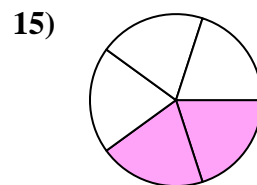
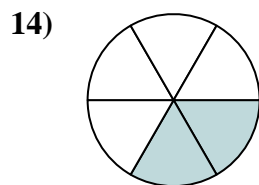
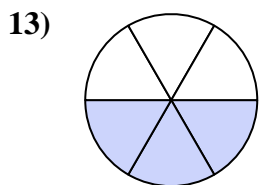
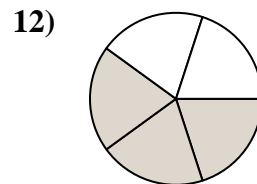
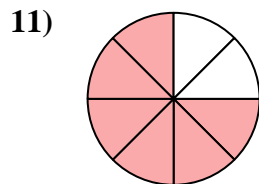
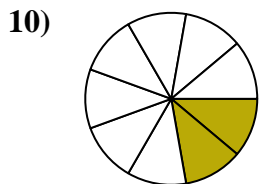
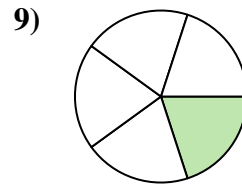
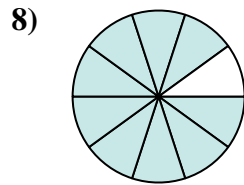
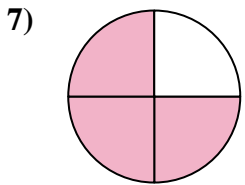
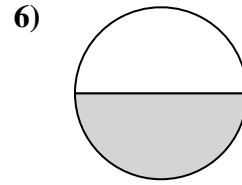
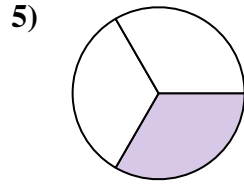
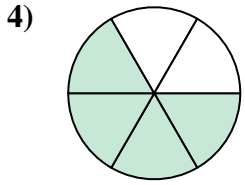
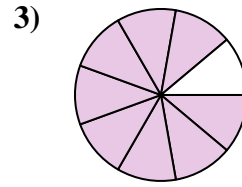
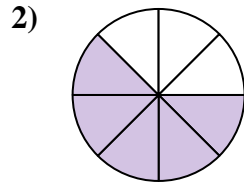
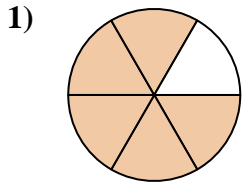




Encuentra el ángulo (en grados) de la parte sombreada del círculo.

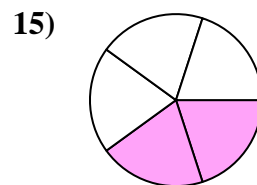
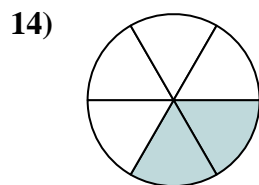
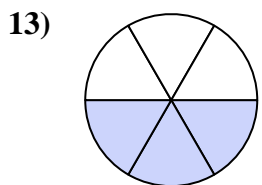
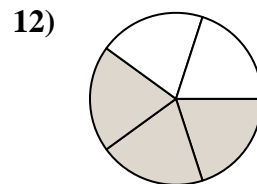
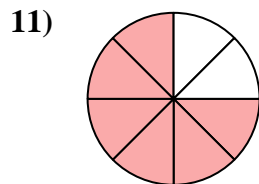
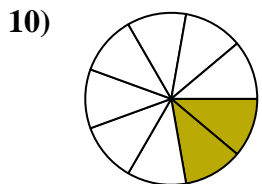
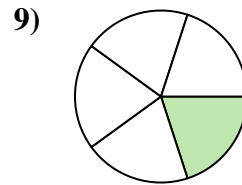
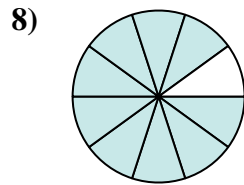
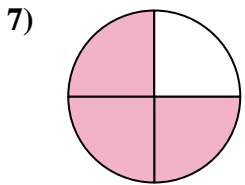
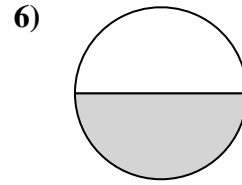
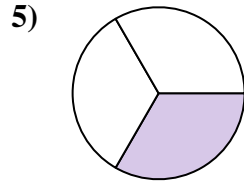
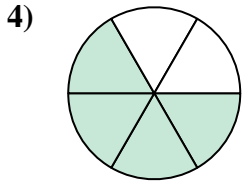
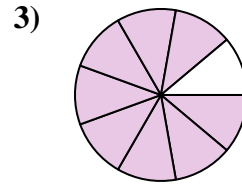
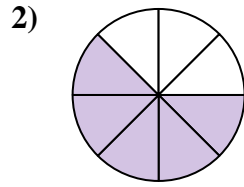
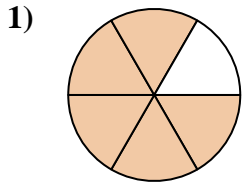


**Respuestas**

1. \_\_\_\_\_
2. \_\_\_\_\_
3. \_\_\_\_\_
4. \_\_\_\_\_
5. \_\_\_\_\_
6. \_\_\_\_\_
7. \_\_\_\_\_
8. \_\_\_\_\_
9. \_\_\_\_\_
10. \_\_\_\_\_
11. \_\_\_\_\_
12. \_\_\_\_\_
13. \_\_\_\_\_
14. \_\_\_\_\_
15. \_\_\_\_\_



Encuentra el ángulo (en grados) de la parte sombreada del círculo.



**Respuestas**

1. 300

2. 225

3. 320

4. 240

5. 120

6. 180

7. 270

8. 324

9. 72

10. 80

11. 270

12. 216

13. 180

14. 120

15. 144



Encuentra el ángulo (en grados) de la parte sombreada del círculo.

270

180

216

72

320

80

240

225

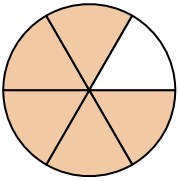
300

120

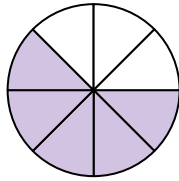
270

324

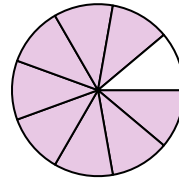
1)



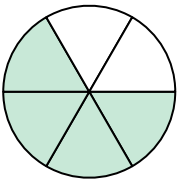
2)



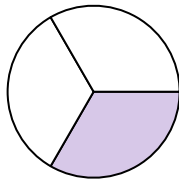
3)



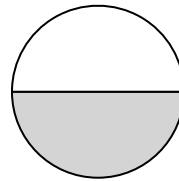
4)



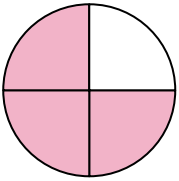
5)



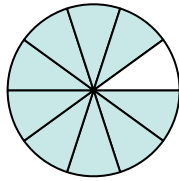
6)



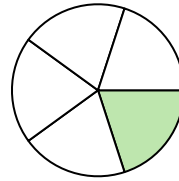
7)



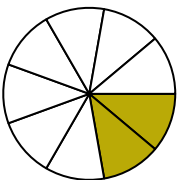
8)



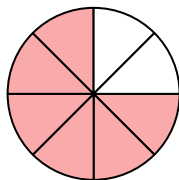
9)



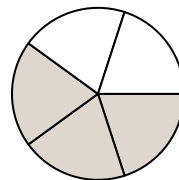
10)



11)



12)



**Respuestas**

1. \_\_\_\_\_

2. \_\_\_\_\_

3. \_\_\_\_\_

4. \_\_\_\_\_

5. \_\_\_\_\_

6. \_\_\_\_\_

7. \_\_\_\_\_

8. \_\_\_\_\_

9. \_\_\_\_\_

10. \_\_\_\_\_

11. \_\_\_\_\_

12. \_\_\_\_\_