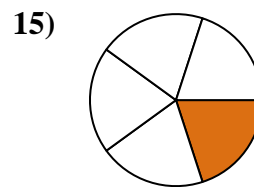
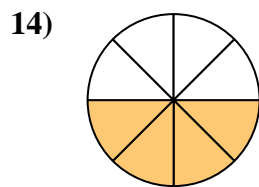
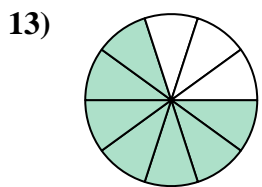
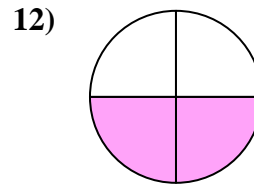
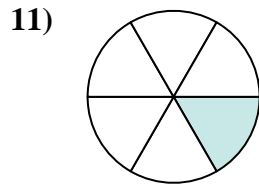
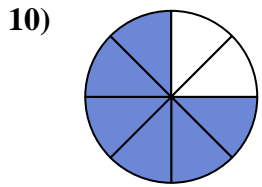
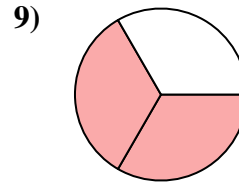
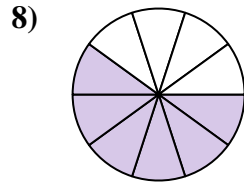
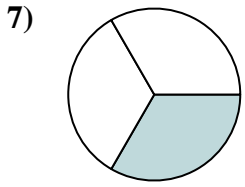
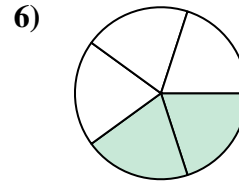
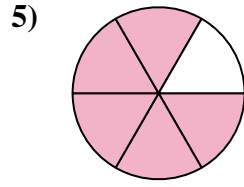
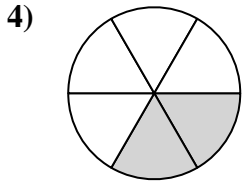
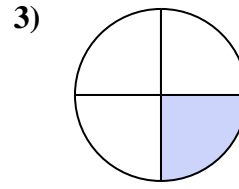
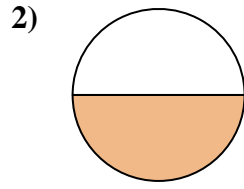
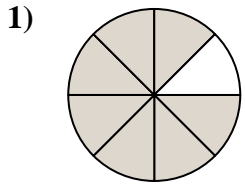




Encuentra el ángulo (en grados) de la parte sombreada del círculo.



Respuestas

1. _____

2. _____

3. _____

4. _____

5. _____

6. _____

7. _____

8. _____

9. _____

10. _____

11. _____

12. _____

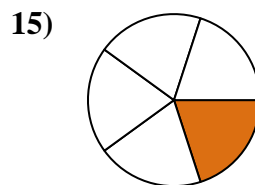
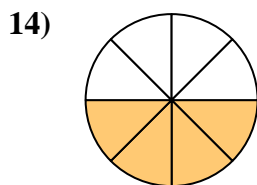
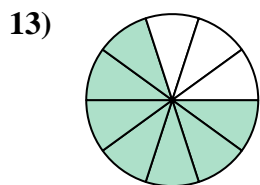
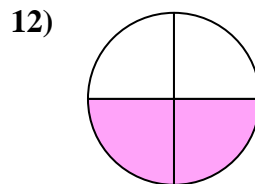
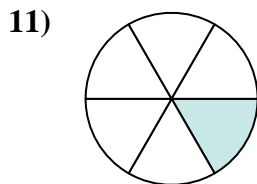
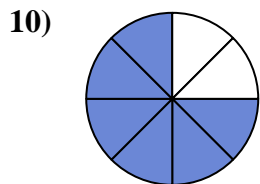
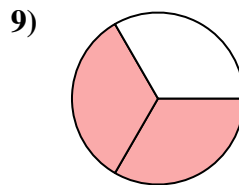
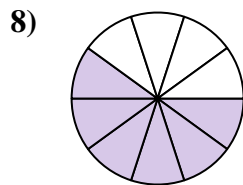
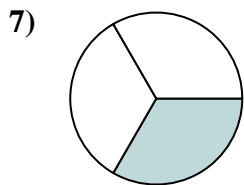
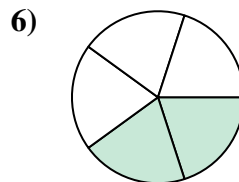
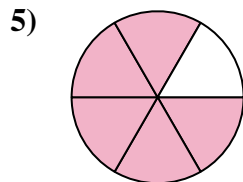
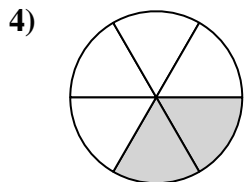
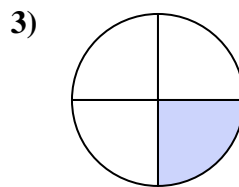
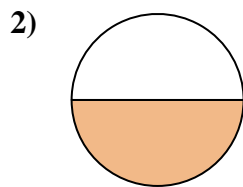
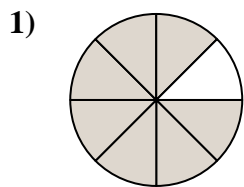
13. _____

14. _____

15. _____



Encuentra el ángulo (en grados) de la parte sombreada del círculo.



Respuestas

1. 315
2. 180
3. 90
4. 120
5. 300
6. 144
7. 120
8. 216
9. 240
10. 270
11. 60
12. 180
13. 252
14. 180
15. 72



Encuentra el ángulo (en grados) de la parte sombreada del círculo.

120

270

90

216

315

180

180

144

240

300

120

60

Respuestas

1. _____

2. _____

3. _____

4. _____

5. _____

6. _____

7. _____

8. _____

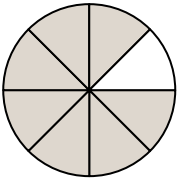
9. _____

10. _____

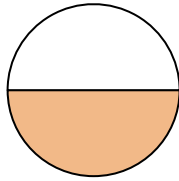
11. _____

12. _____

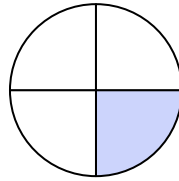
1)



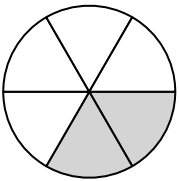
2)



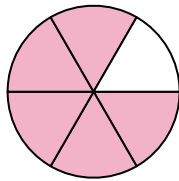
3)



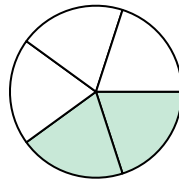
4)



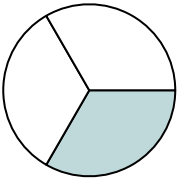
5)



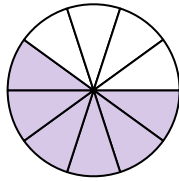
6)



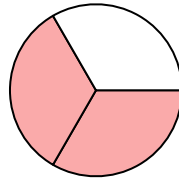
7)



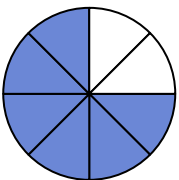
8)



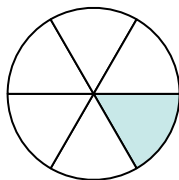
9)



10)



11)



12)

