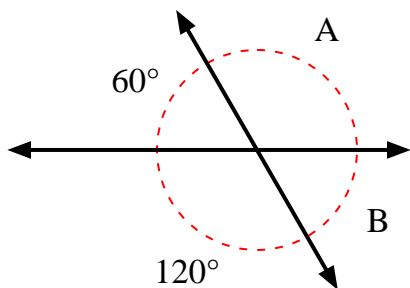


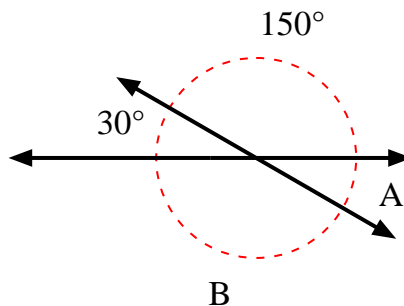


Encuentra el valor del ángulo 'A' y el ángulo 'B'.

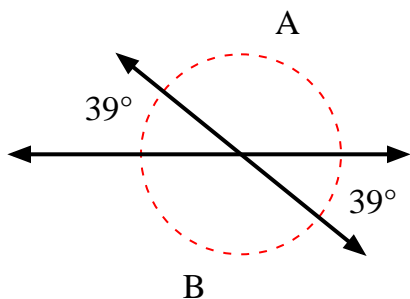
1)



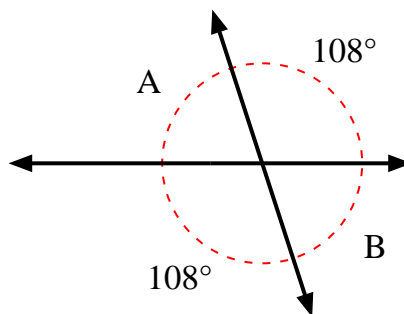
2)



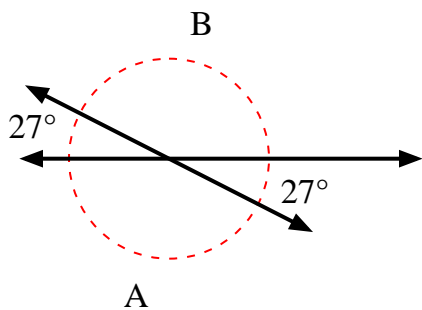
3)



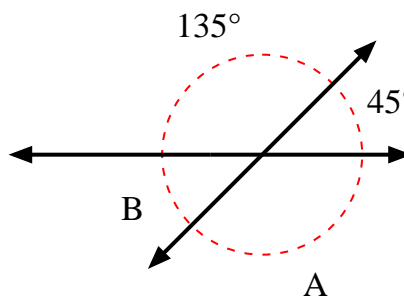
4)



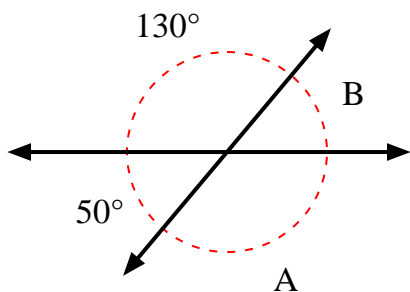
5)



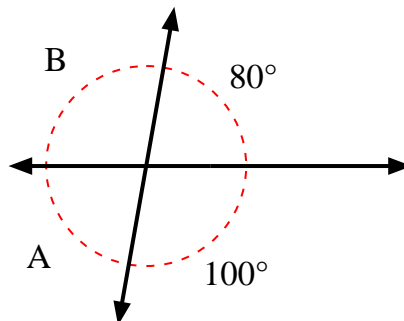
6)



7)



8)



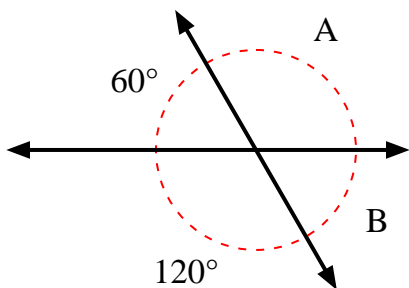
**Respuestas**

1. \_\_\_\_\_
2. \_\_\_\_\_
3. \_\_\_\_\_
4. \_\_\_\_\_
5. \_\_\_\_\_
6. \_\_\_\_\_
7. \_\_\_\_\_
8. \_\_\_\_\_

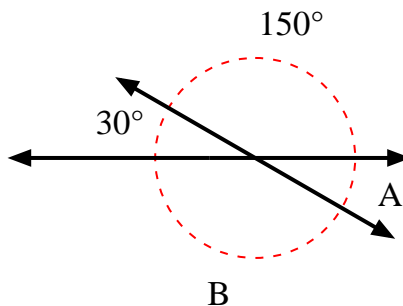


Encuentra el valor del ángulo 'A' y el ángulo 'B'.

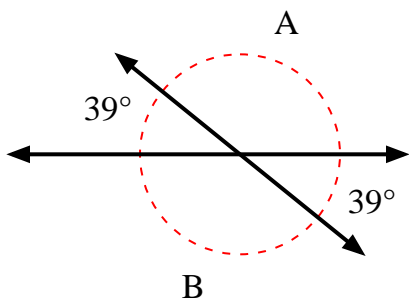
1)



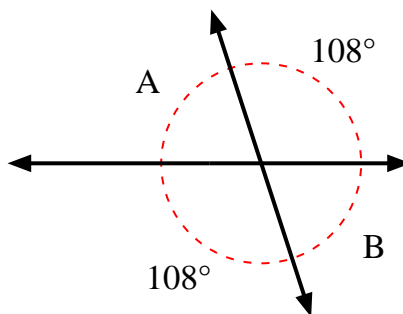
2)



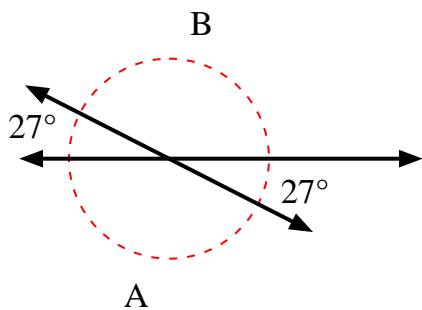
3)



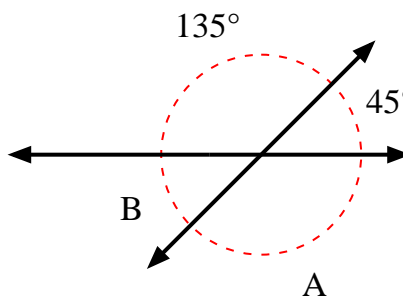
4)



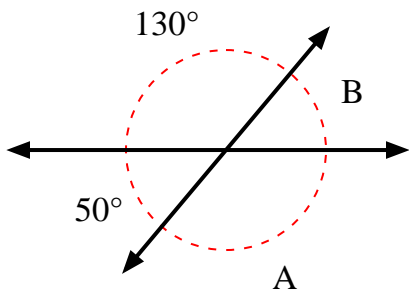
5)



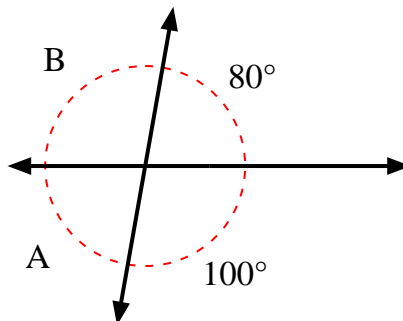
6)



7)



8)



**Respuestas**

1.	<b>120°</b>	<b>60°</b>
2.	<b>30°</b>	<b>150°</b>
3.	<b>141°</b>	<b>141°</b>
4.	<b>72°</b>	<b>72°</b>
5.	<b>153°</b>	<b>153°</b>
6.	<b>135°</b>	<b>45°</b>
7.	<b>130°</b>	<b>50°</b>
8.	<b>80°</b>	<b>100°</b>