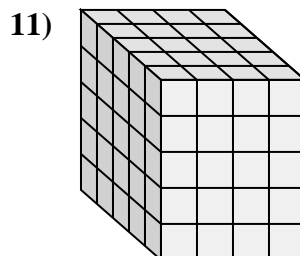
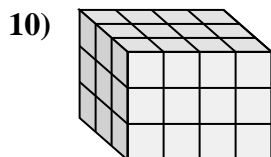
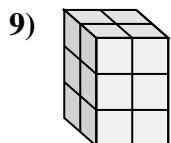
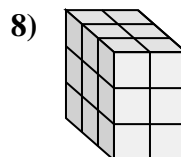
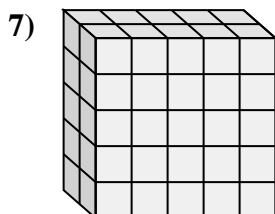
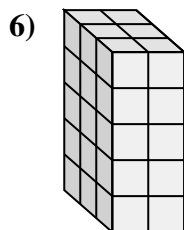
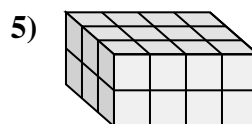
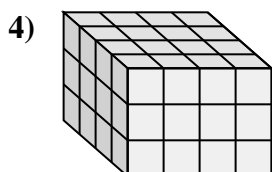
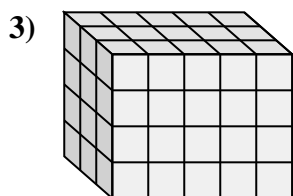
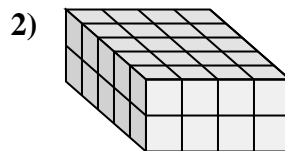
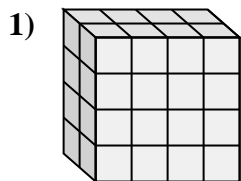
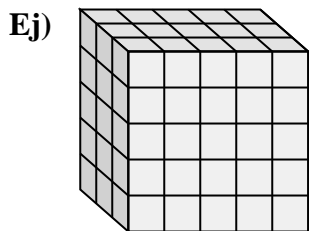




Empareje cada problema con la ecuación que podría representarlo. Responda con el término y la letra que faltan.



A. $5 \times \underline{\quad} \times 2 = 40$

B. $\underline{\quad} \times 5 \times 4 = 60$

C. $3 \times \underline{\quad} \times 3 = 18$

D. $\underline{\quad} \times 4 \times 5 = 100$

E. $3 \times 4 \times \underline{\quad} = 24$

F. $\underline{\quad} \times 2 \times 5 = 30$

G. $4 \times \underline{\quad} \times 3 = 48$

H. $3 \times 4 \times \underline{\quad} = 36$

I. $2 \times 5 \times 5 = \underline{\quad}$

J. $2 \times \underline{\quad} \times 3 = 12$

K. $\underline{\quad} \times 5 \times 5 = 75$

L. $\underline{\quad} \times 4 \times 4 = 32$

Respuestas

Ej. **K, 3**

1. **L, 2**

2. **A, 4**

3. **B, 3**

4. **G, 4**

5. **E, 2**

6. **F, 3**

7. **I, 50**

8. **C, 2**

9. **J, 2**

10. **H, 3**

11. **D, 5**