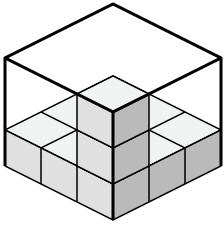


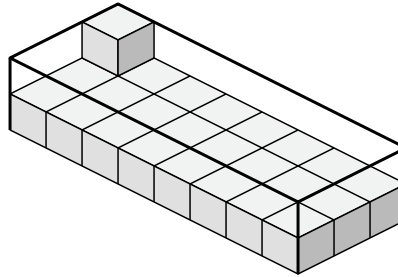


Cree una expresión para determinar el volumen de cada caja.

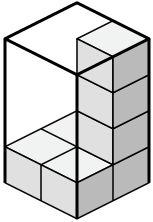
1)



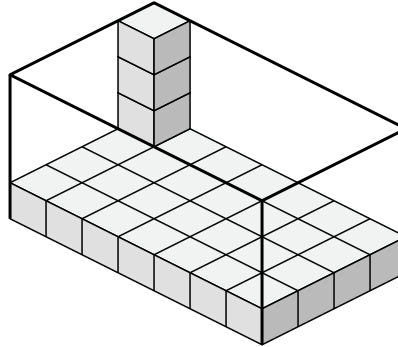
2)



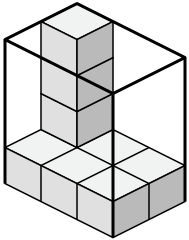
3)



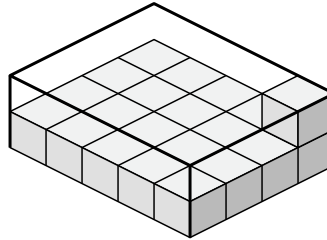
4)



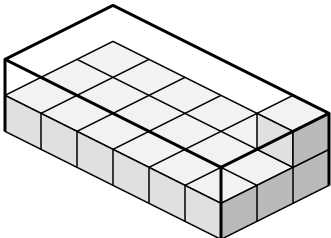
5)



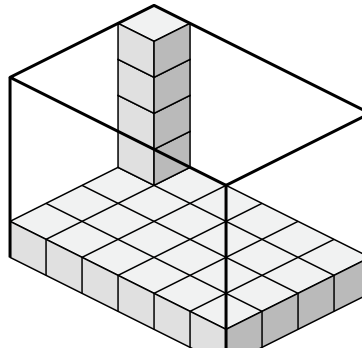
6)



7)



8)



Respuestas

1. _____

2. _____

3. _____

4. _____

5. _____

6. _____

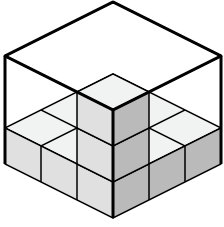
7. _____

8. _____

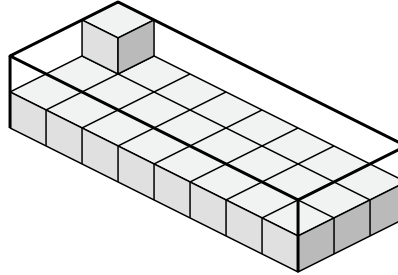


Cree una expresión para determinar el volumen de cada caja.

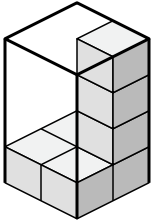
1)



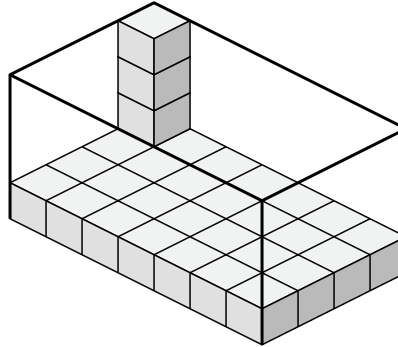
2)



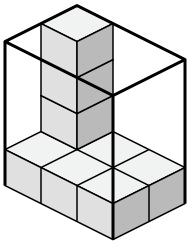
3)



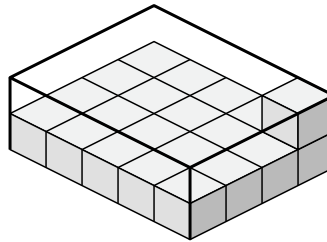
4)



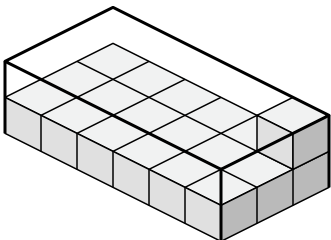
5)



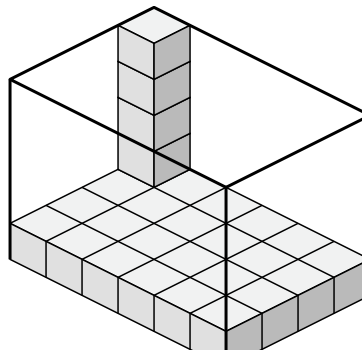
6)



7)



8)

**Respuestas**

1. $3 \times 3 \times 3$

2. $8 \times 3 \times 2$

3. $2 \times 2 \times 4$

4. $7 \times 4 \times 4$

5. $3 \times 2 \times 4$

6. $5 \times 4 \times 2$

7. $6 \times 3 \times 2$

8. $6 \times 4 \times 5$