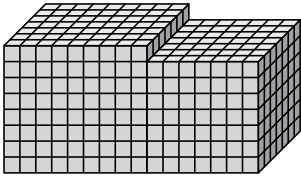




Encuentra el volumen total de cada figura. La medida es en cm (no a escala).

Respuestas

1)



1. _____

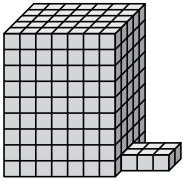
2. _____

3. _____

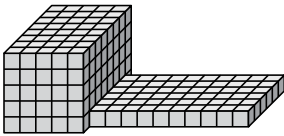
4. _____

5. _____

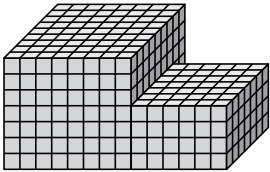
2)



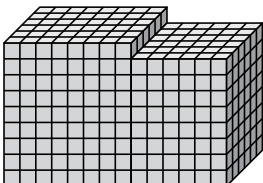
3)



4)



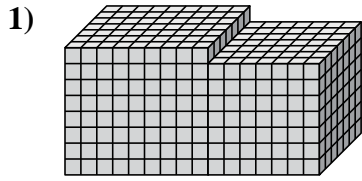
5)





Encuentra el volumen total de cada figura. La medida es en cm (no a escala).

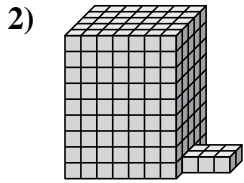
Respuestas



$$9 \times 7 \times 8 = 504$$

$$7 \times 7 \times 7 = 343$$

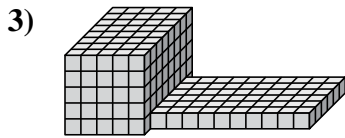
1. 847 cm³



$$7 \times 5 \times 9 = 315$$

$$3 \times 2 \times 1 = 6$$

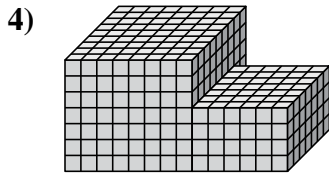
2. 321 cm³



$$5 \times 8 \times 5 = 200$$

$$10 \times 6 \times 1 = 60$$

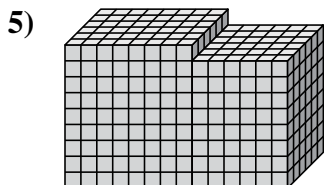
3. 260 cm³



$$8 \times 9 \times 7 = 504$$

$$6 \times 7 \times 4 = 168$$

4. 672 cm³



$$8 \times 6 \times 9 = 432$$

$$6 \times 6 \times 8 = 288$$

5. 720 cm³