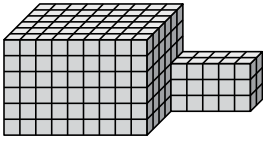




Encuentra el volumen total de cada figura. La medida es en cm (no a escala).

Respuestas

1)



1. _____

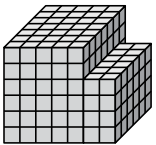
2. _____

3. _____

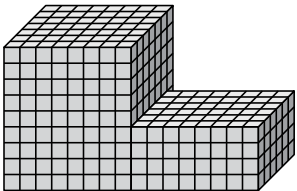
4. _____

5. _____

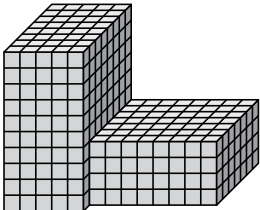
2)



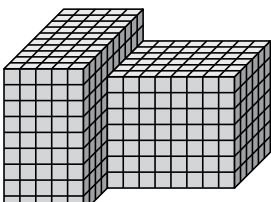
3)



4)

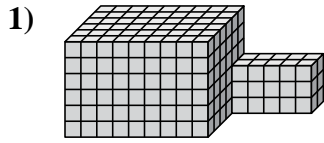


5)



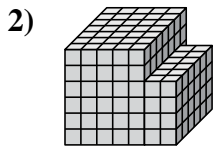


Encuentra el volumen total de cada figura. La medida es en cm (no a escala).

Respuestas

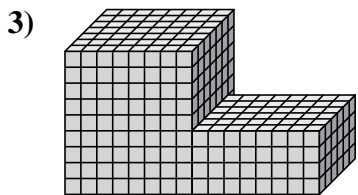
$$9 \times 6 \times 6 = 324$$
$$5 \times 2 \times 3 = 30$$

1. 354 cm³



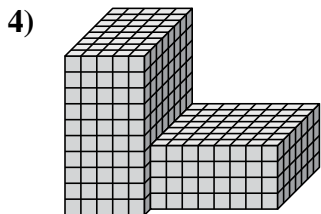
$$5 \times 7 \times 6 = 210$$
$$2 \times 6 \times 4 = 48$$

2. 258 cm³



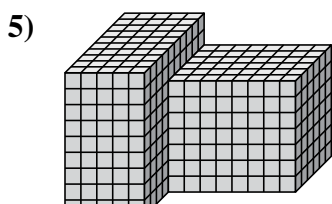
$$8 \times 7 \times 9 = 504$$
$$8 \times 6 \times 4 = 192$$

3. 696 cm³



$$5 \times 8 \times 10 = 400$$
$$8 \times 7 \times 4 = 224$$

4. 624 cm³



$$5 \times 10 \times 9 = 450$$
$$8 \times 6 \times 7 = 336$$

5. 786 cm³