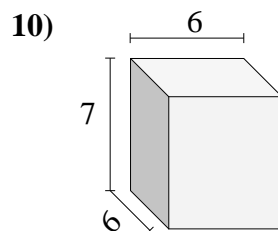
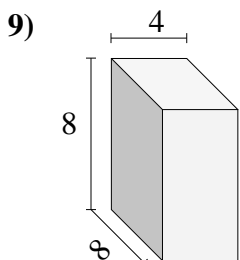
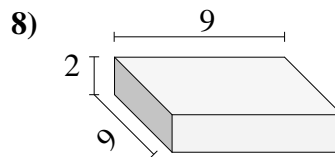
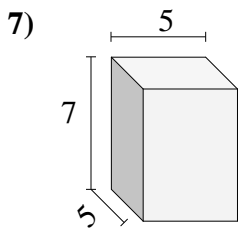
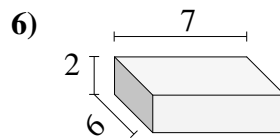
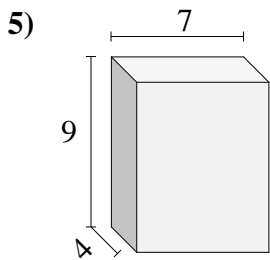
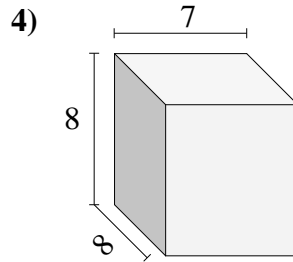
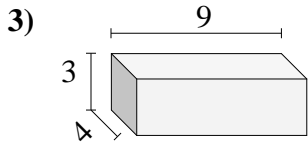
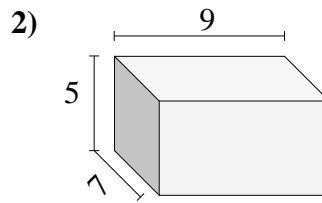
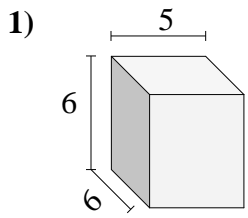




Encuentra el volumen de cada prisma rectangular. Mide en cm (no estan en escala).

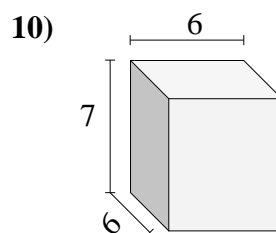
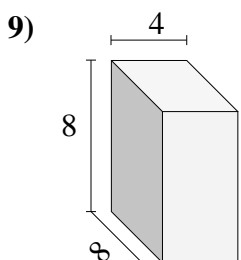
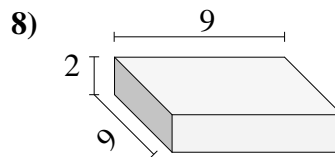
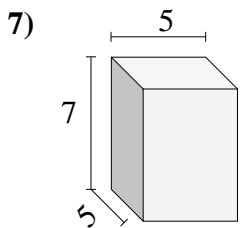
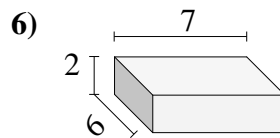
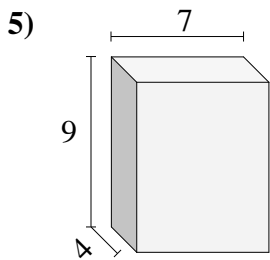
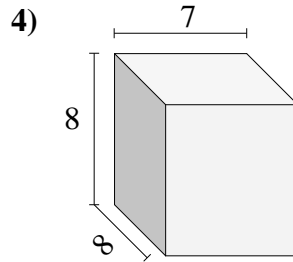
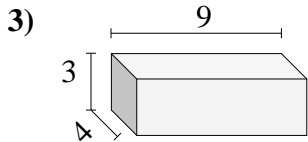
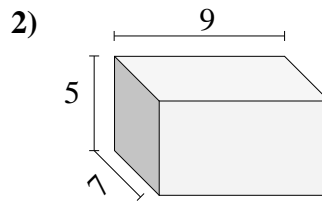
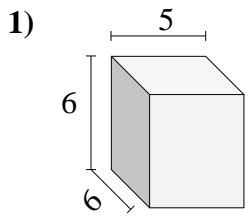


Respuestas

- 1. _____
- 2. _____
- 3. _____
- 4. _____
- 5. _____
- 6. _____
- 7. _____
- 8. _____
- 9. _____
- 10. _____



Encuentra el volumen de cada prisma rectangular. Mide en cm (no estan en escala).



Respuestas

- 1. **180**
- 2. **315**
- 3. **108**
- 4. **448**
- 5. **252**
- 6. **84**
- 7. **175**
- 8. **162**
- 9. **256**
- 10. **252**