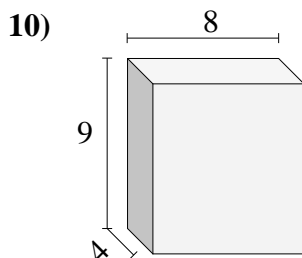
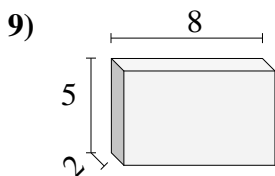
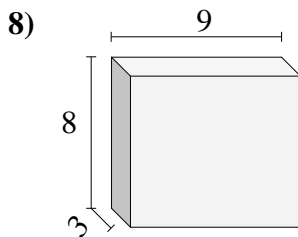
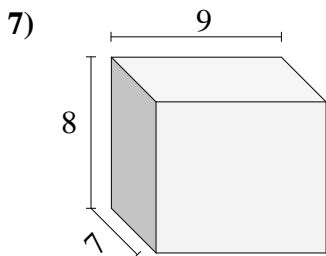
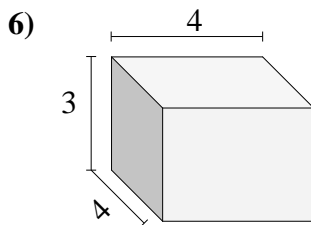
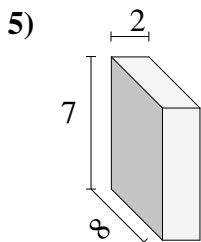
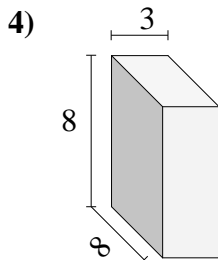
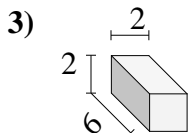
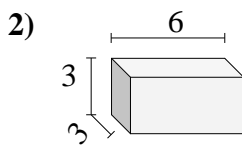
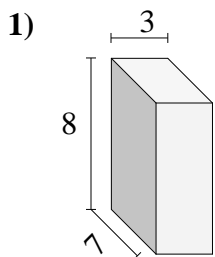




Encuentra el volumen de cada prisma rectangular. Mide en cm (no estan en escala).

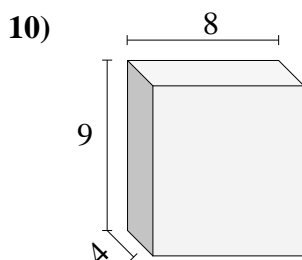
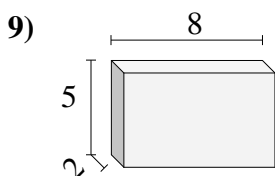
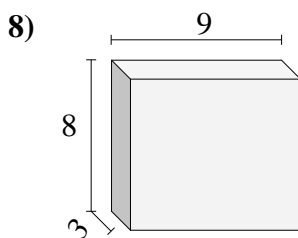
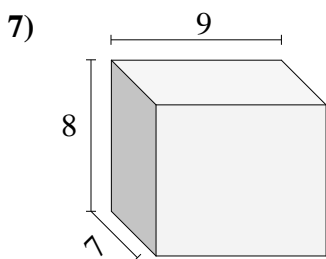
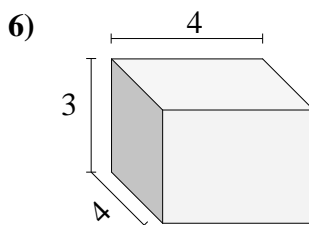
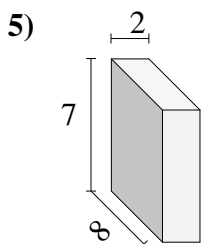
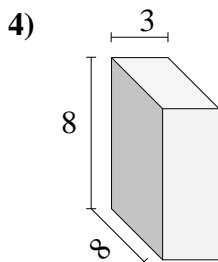
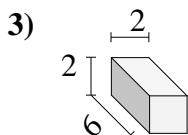
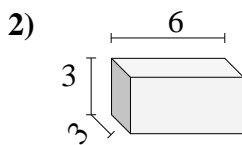
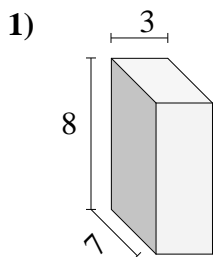


Respuestas

- 1. _____
- 2. _____
- 3. _____
- 4. _____
- 5. _____
- 6. _____
- 7. _____
- 8. _____
- 9. _____
- 10. _____



Encuentra el volumen de cada prisma rectangular. Mide en cm (no estan en escala).



Respuestas

1. 168

2. 54

3. 24

4. 192

5. 112

6. 48

7. 504

8. 216

9. 80

10. 288