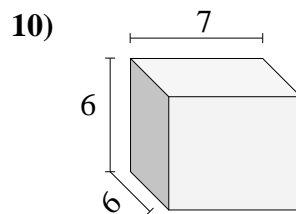
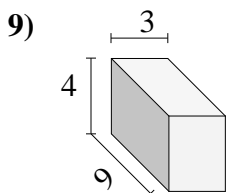
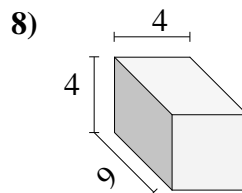
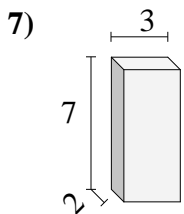
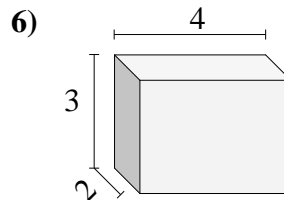
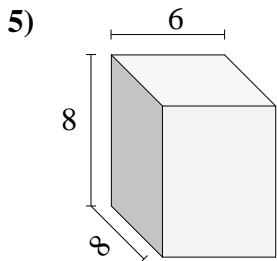
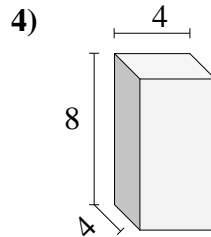
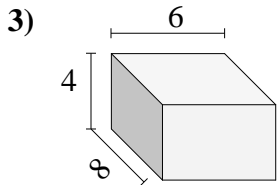
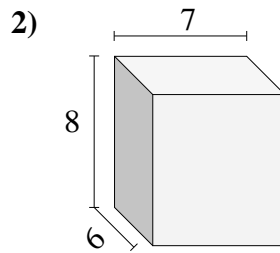
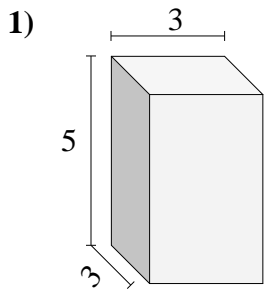




Encuentra el volumen de cada prisma rectangular. Mide en cm (no estan en escala).

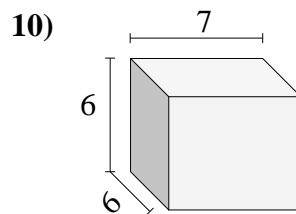
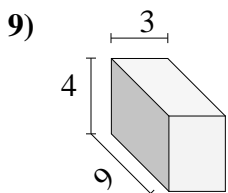
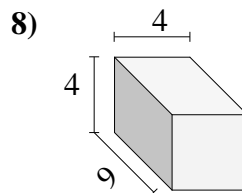
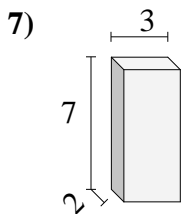
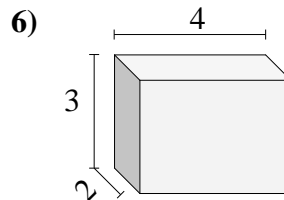
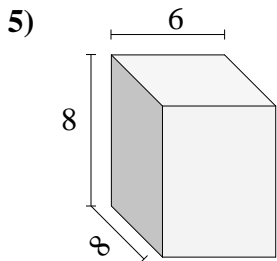
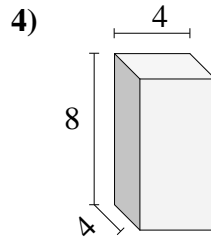
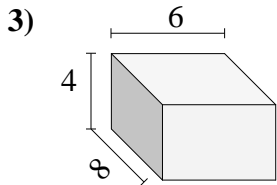
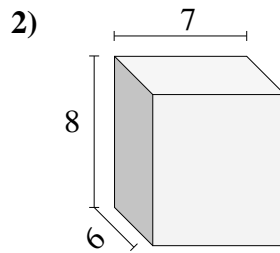
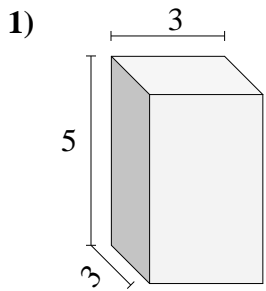


Respuestas

- 1. _____
- 2. _____
- 3. _____
- 4. _____
- 5. _____
- 6. _____
- 7. _____
- 8. _____
- 9. _____
- 10. _____



Encuentra el volumen de cada prisma rectangular. Mide en cm (no estan en escala).

**Respuestas**1. 452. 3363. 1924. 1285. 3846. 247. 428. 1449. 10810. 252