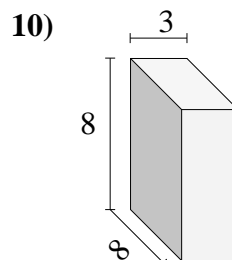
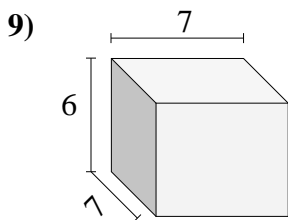
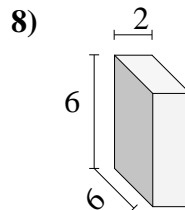
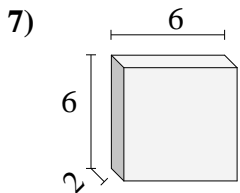
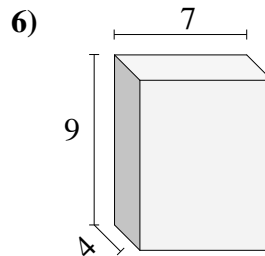
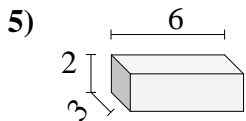
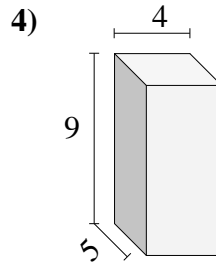
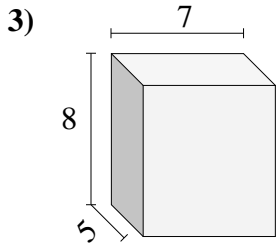
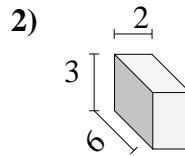
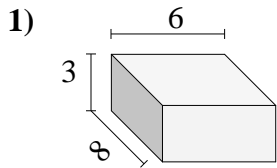




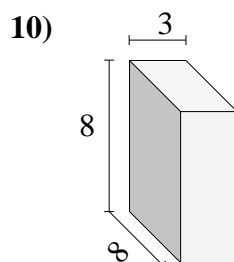
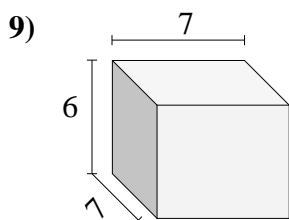
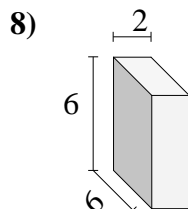
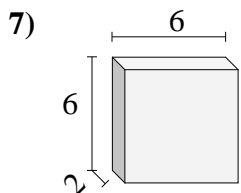
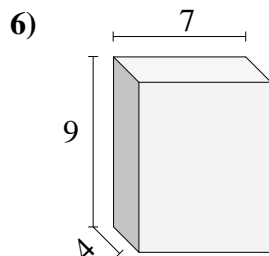
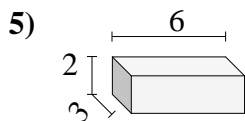
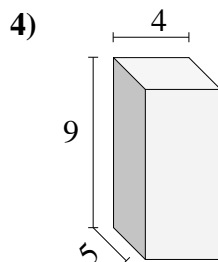
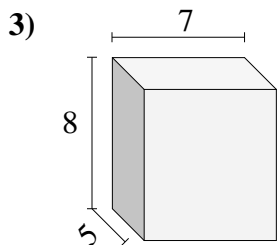
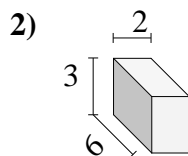
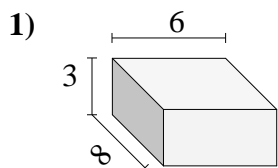
Encuentra el volumen de cada prisma rectangular. Mide en cm (no estan en escala).

**Respuestas**

1. _____
2. _____
3. _____
4. _____
5. _____
6. _____
7. _____
8. _____
9. _____
10. _____



Encuentra el volumen de cada prisma rectangular. Mide en cm (no estan en escala).

Respuestas

1. **144**
2. **36**
3. **280**
4. **180**
5. **36**
6. **252**
7. **72**
8. **72**
9. **294**
10. **192**