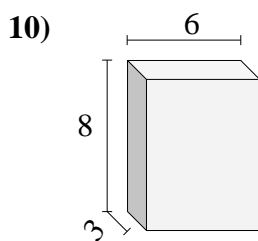
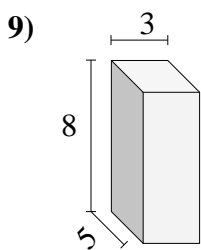
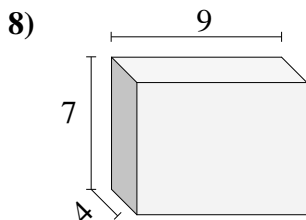
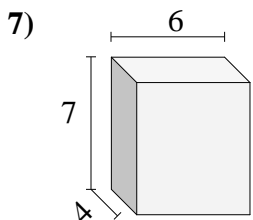
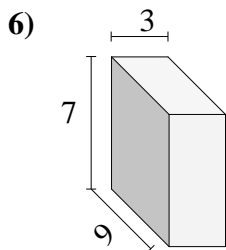
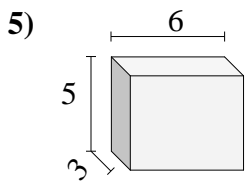
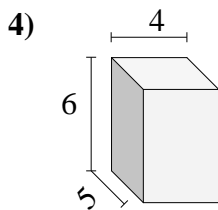
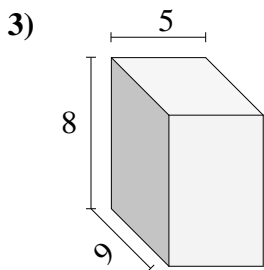
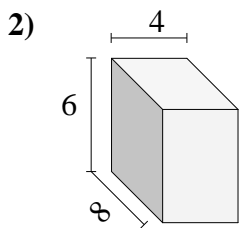
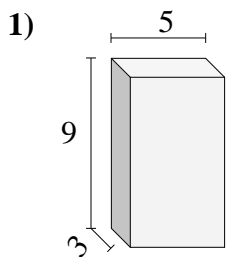




Encuentra el volumen de cada prisma rectangular. Mide en cm (no estan en escala).

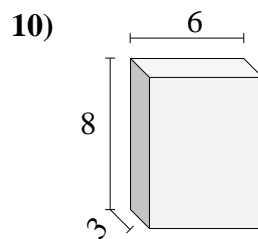
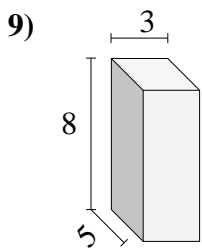
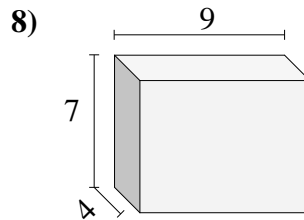
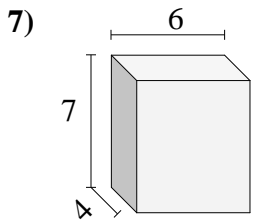
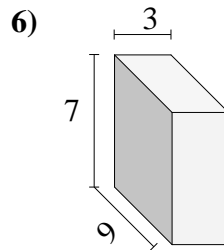
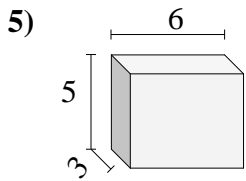
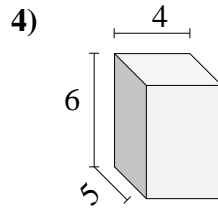
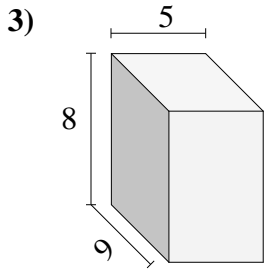
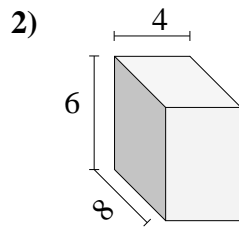
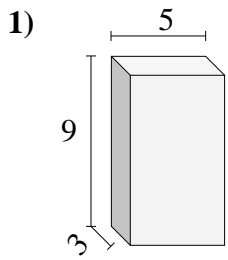


**Respuestas**

- 1. \_\_\_\_\_
- 2. \_\_\_\_\_
- 3. \_\_\_\_\_
- 4. \_\_\_\_\_
- 5. \_\_\_\_\_
- 6. \_\_\_\_\_
- 7. \_\_\_\_\_
- 8. \_\_\_\_\_
- 9. \_\_\_\_\_
- 10. \_\_\_\_\_



Encuentra el volumen de cada prisma rectangular. Mide en cm (no estan en escala).



**Respuestas**

- 1. 135
- 2. 192
- 3. 360
- 4. 120
- 5. 90
- 6. 189
- 7. 168
- 8. 252
- 9. 120
- 10. 144