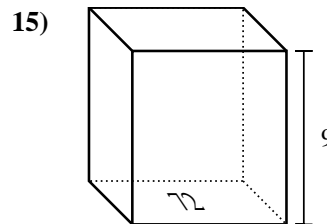
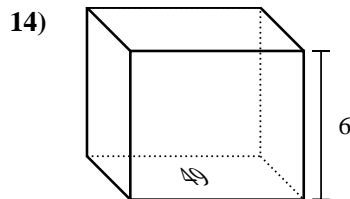
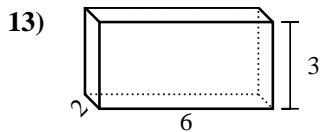
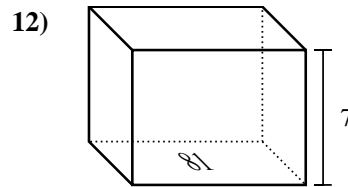
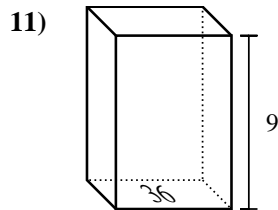
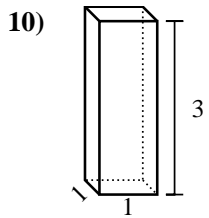
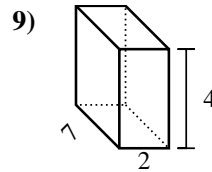
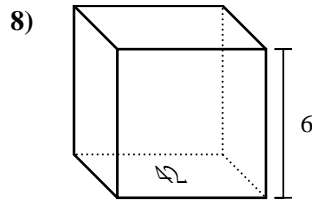
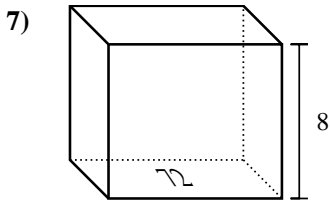
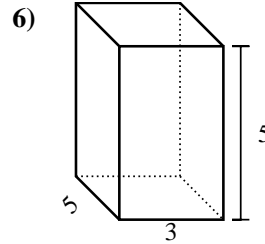
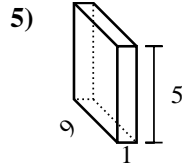
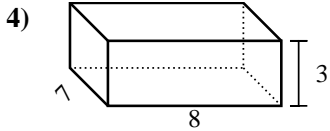
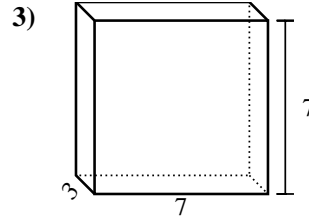
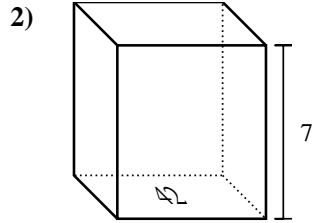
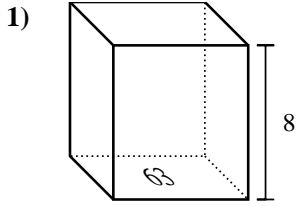




Encontrar el volumen de cada prisma rectangular. Recuerda $V = \text{Base} \times \text{Altura}$ y $V = \text{Largo} \times \text{ancho} \times \text{alto}$.

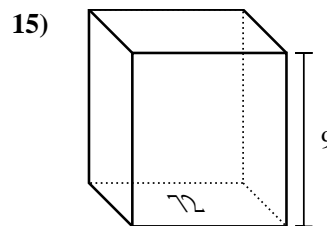
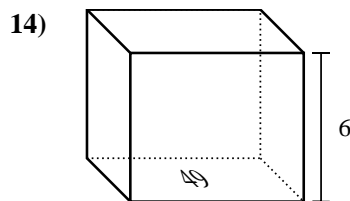
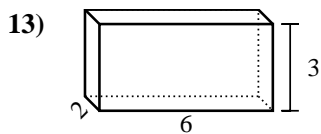
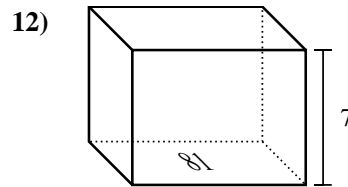
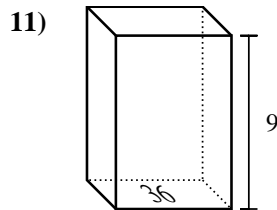
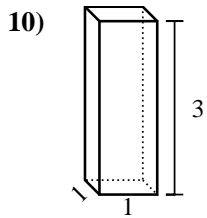
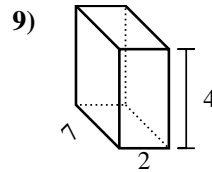
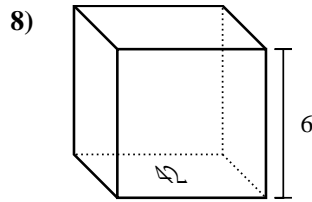
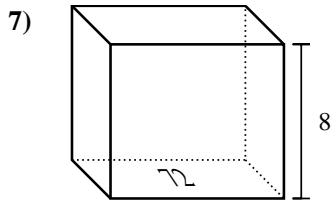
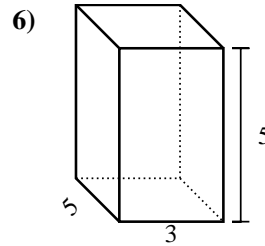
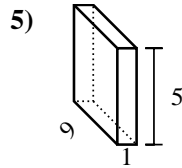
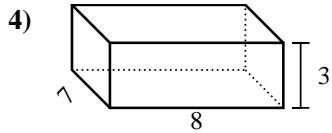
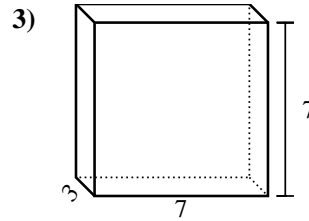
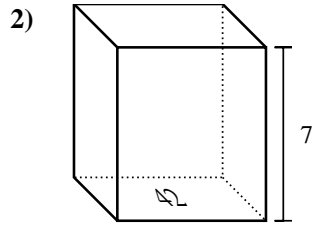
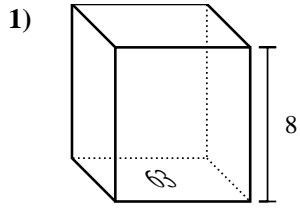
Respuestas



1. _____
2. _____
3. _____
4. _____
5. _____
6. _____
7. _____
8. _____
9. _____
10. _____
11. _____
12. _____
13. _____
14. _____
15. _____



Encontrar el volumen de cada prisma rectangular. Recuerda $V = \text{Base} \times \text{Altura}$ y $V = \text{Largo} \times \text{ancho} \times \text{alto}$.



Respuestas

1. 504 cm³
2. 294 cm³
3. 147 cm³
4. 168 cm³
5. 45 cm³
6. 75 cm³
7. 576 cm³
8. 252 cm³
9. 56 cm³
10. 3 cm³
11. 324 cm³
12. 567 cm³
13. 36 cm³
14. 294 cm³
15. 648 cm³