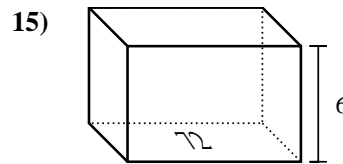
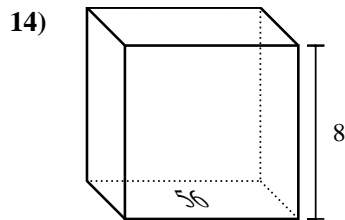
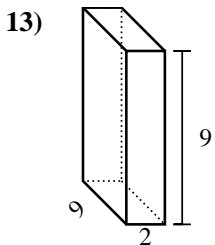
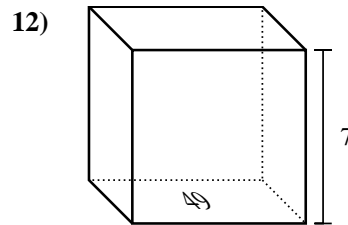
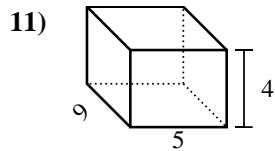
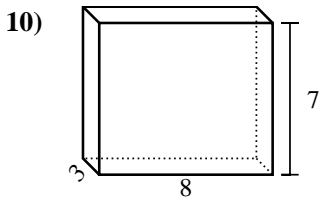
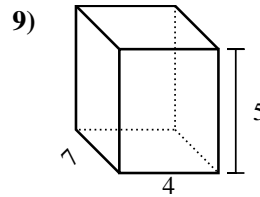
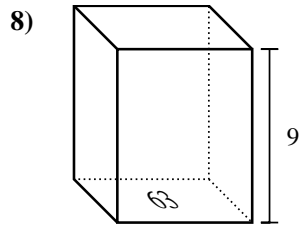
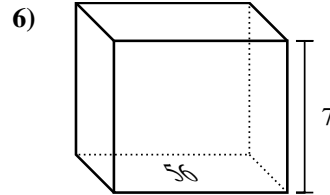
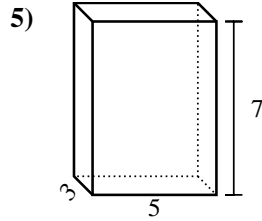
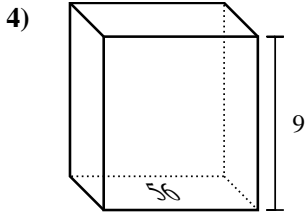
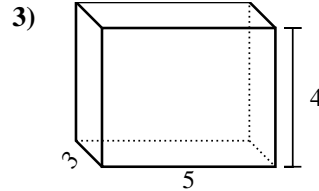
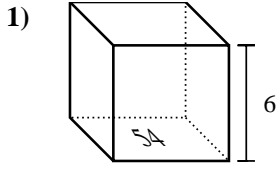




Encontrar el volumen de cada prisma rectangular. Recuerda $V = \text{Base} \times \text{Altura}$ y $V = \text{Largo} \times \text{ancho} \times \text{alto}$.

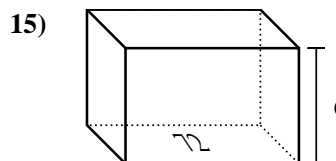
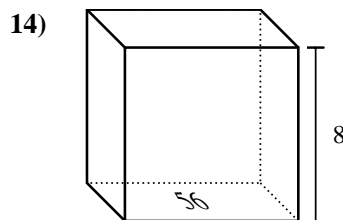
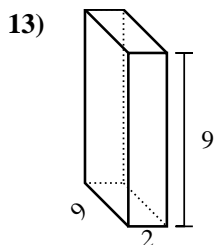
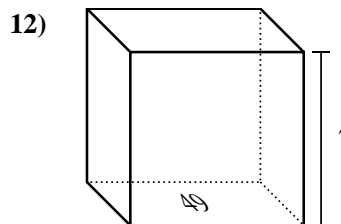
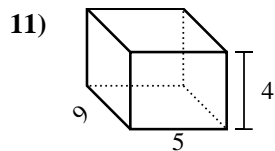
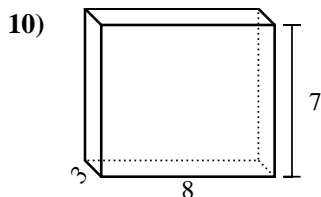
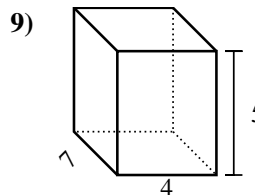
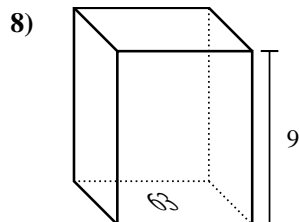
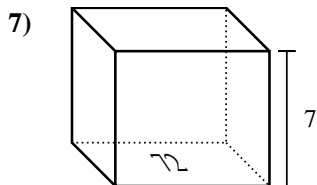
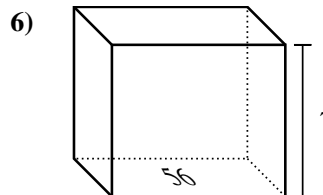
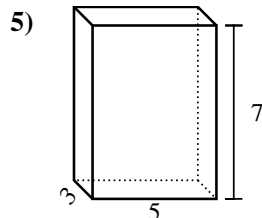
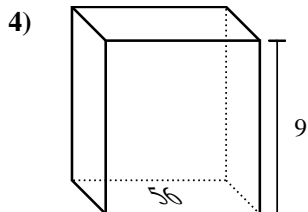
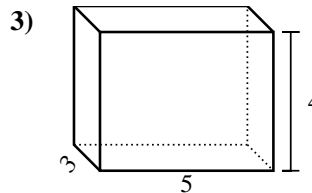
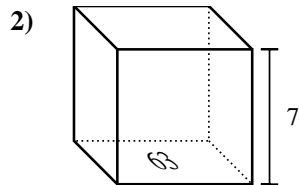
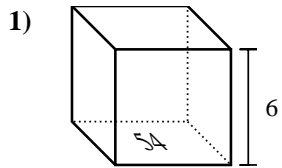
Respuestas



1. _____
2. _____
3. _____
4. _____
5. _____
6. _____
7. _____
8. _____
9. _____
10. _____
11. _____
12. _____
13. _____
14. _____
15. _____



Encontrar el volumen de cada prisma rectangular. Recuerda $V = \text{Base} \times \text{Altura}$ y $V = \text{Largo} \times \text{ancho} \times \text{alto}$.



Respuestas

1. **324 cm³**

2. **441 cm³**

3. **60 cm³**

4. **504 cm³**

5. **105 cm³**

6. **392 cm³**

7. **504 cm³**

8. **567 cm³**

9. **140 cm³**

10. **168 cm³**

11. **180 cm³**

12. **343 cm³**

13. **162 cm³**

14. **448 cm³**

15. **432 cm³**