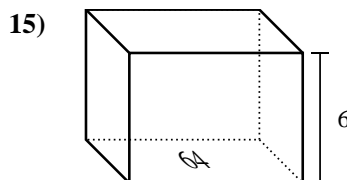
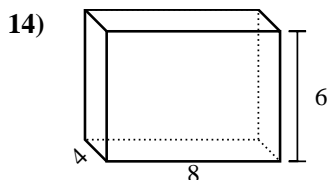
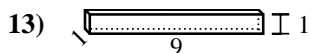
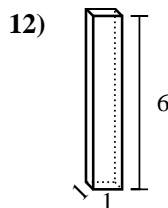
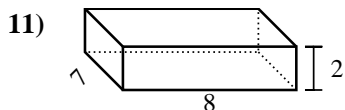
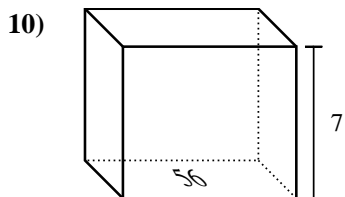
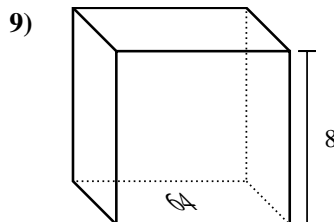
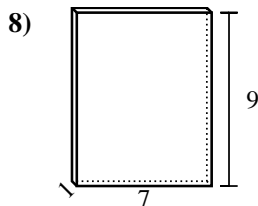
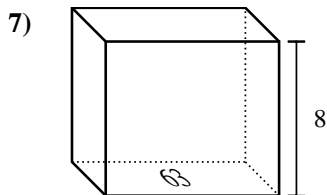
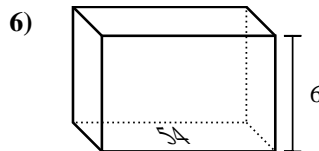
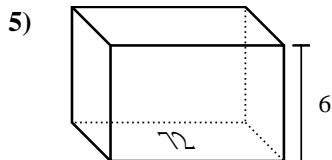
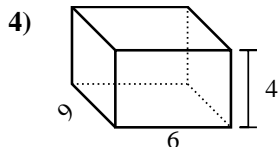
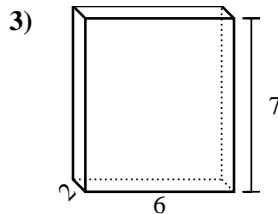
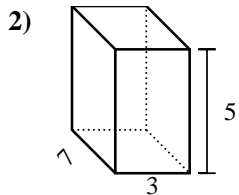
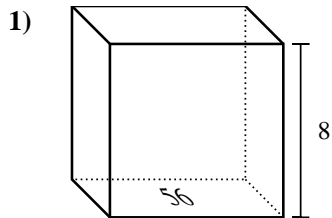




Encontrar el volumen de cada prisma rectangular. Recuerda $V = \text{Base} \times \text{Altura}$ y $V = \text{Largo} \times \text{ancho} \times \text{alto}$.

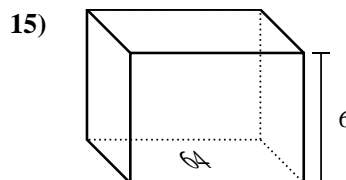
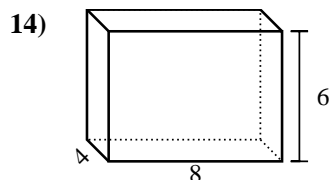
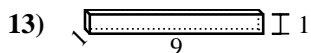
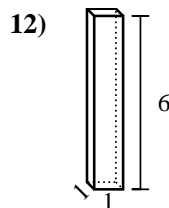
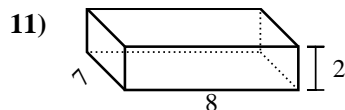
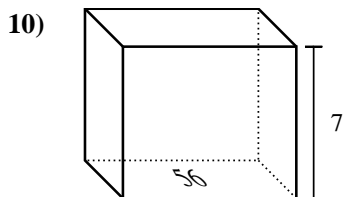
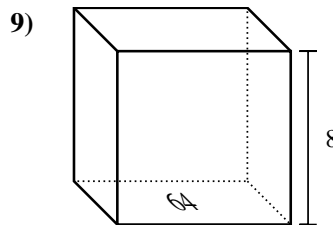
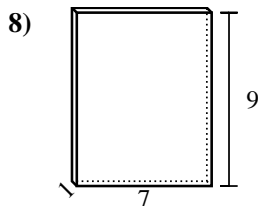
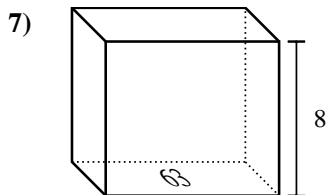
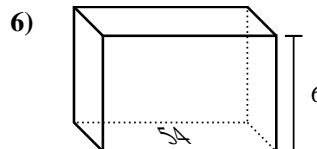
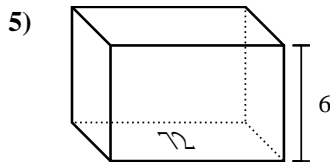
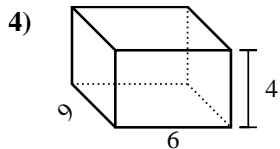
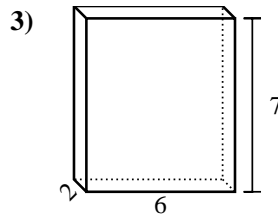
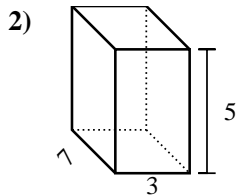
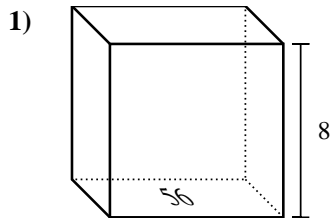
Respuestas



1. _____
2. _____
3. _____
4. _____
5. _____
6. _____
7. _____
8. _____
9. _____
10. _____
11. _____
12. _____
13. _____
14. _____
15. _____



Encontrar el volumen de cada prisma rectangular. Recuerda $V = \text{Base} \times \text{Altura}$ y $V = \text{Largo} \times \text{ancho} \times \text{alto}$.



Respuestas

1. 448 cm³

2. 105 cm³

3. 84 cm³

4. 216 cm³

5. 432 cm³

6. 324 cm³

7. 504 cm³

8. 63 cm³

9. 512 cm³

10. 392 cm³

11. 112 cm³

12. 6 cm³

13. 9 cm³

14. 192 cm³

15. 384 cm³