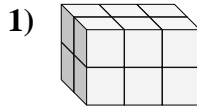
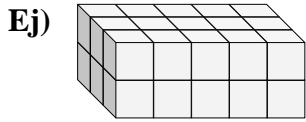




Encuentra el largo, ancho y alto del prisma rectangular. Después encuentra el volumen.

Respuestas



Ej. 3 5 2 30

1. _____

2. _____

3. _____

4. _____

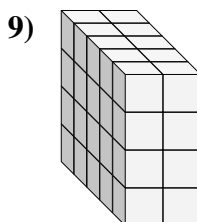
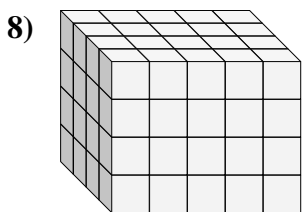
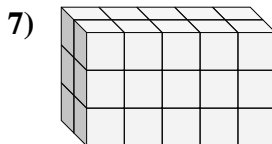
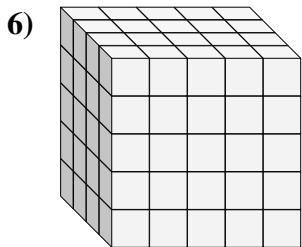
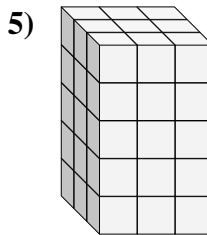
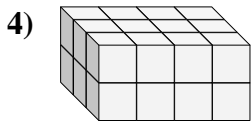
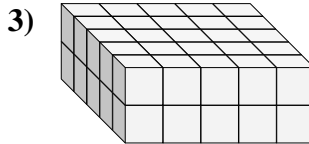
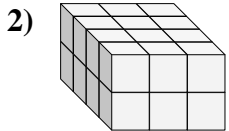
5. _____

6. _____

7. _____

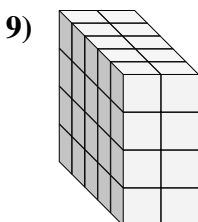
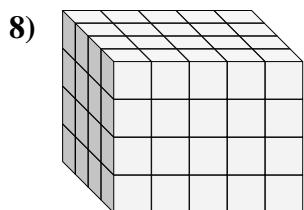
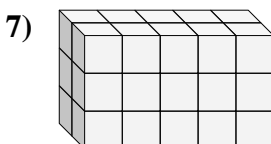
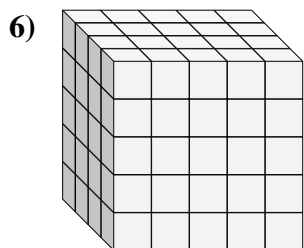
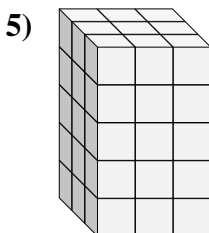
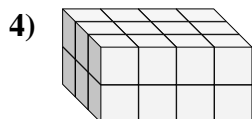
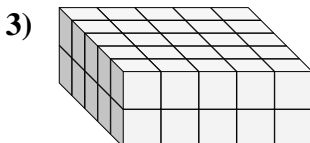
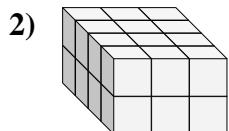
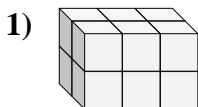
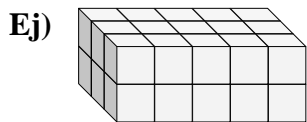
8. _____

9. _____





Encuentra el largo, ancho y alto del prisma rectangular. Después encuentra el volumen.



Respuestas

Ej. 3 5 2 30

1. 2 3 2 12

2. 4 3 2 24

3. 5 5 2 50

4. 3 4 2 24

5. 3 3 5 45

6. 4 5 5 100

7. 2 5 3 30

8. 4 5 4 80

9. 5 2 4 40