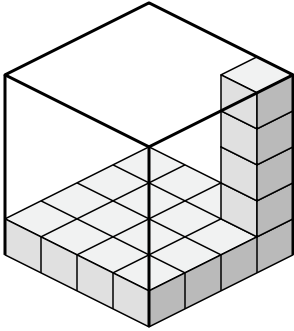


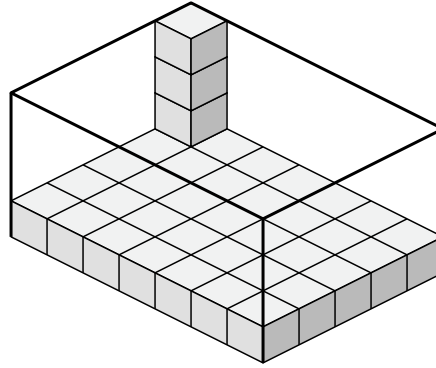


Determina el volumen de cada caja. Cada bloque es de una unidad cúbica (u^3).

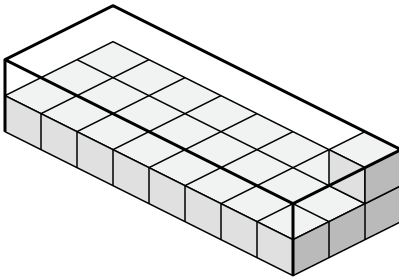
1)



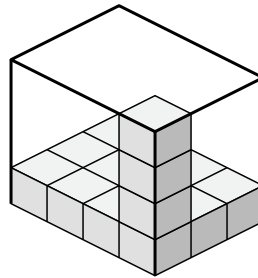
2)



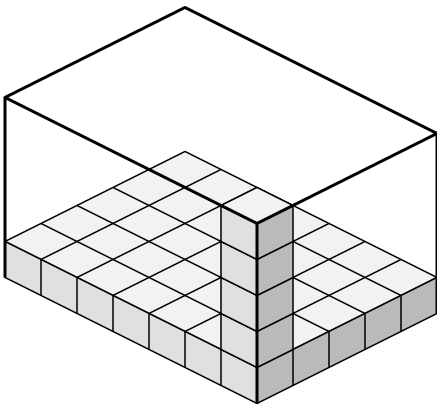
3)



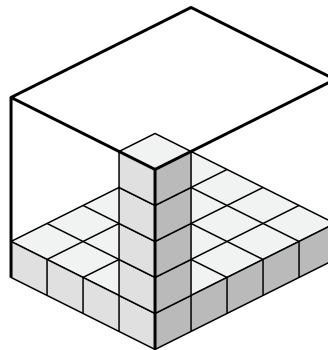
4)



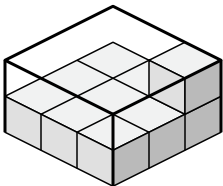
5)



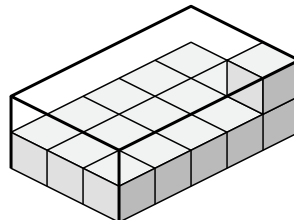
6)



7)



8)



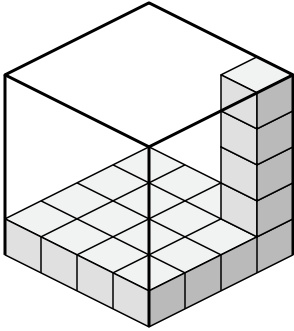
Respuestas

- 1. _____
- 2. _____
- 3. _____
- 4. _____
- 5. _____
- 6. _____
- 7. _____
- 8. _____

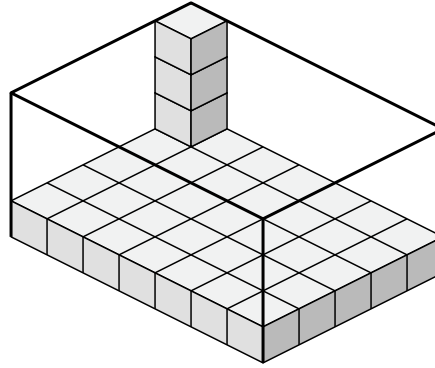


Determina el volumen de cada caja. Cada bloque es de una unidad cúbica (u^3).

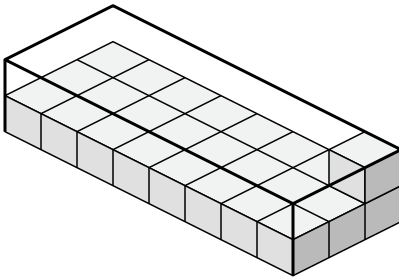
1)



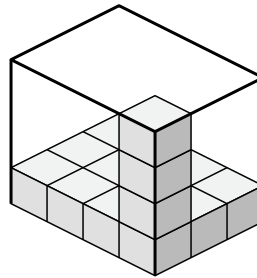
2)



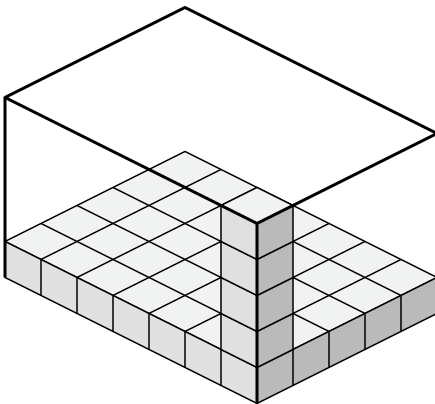
3)



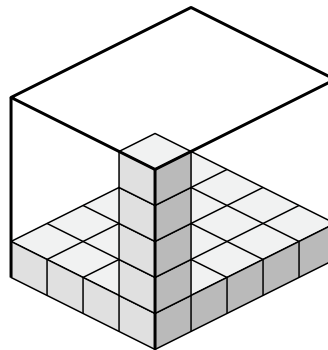
4)



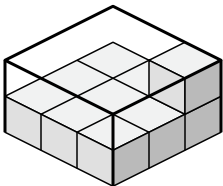
5)



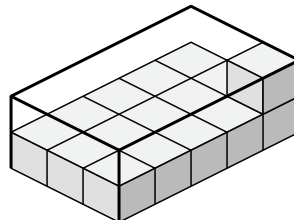
6)



7)



8)



Respuestas

1. 80 u^3

2. 140 u^3

3. 48 u^3

4. 48 u^3

5. 175 u^3

6. 100 u^3

7. 18 u^3

8. 30 u^3