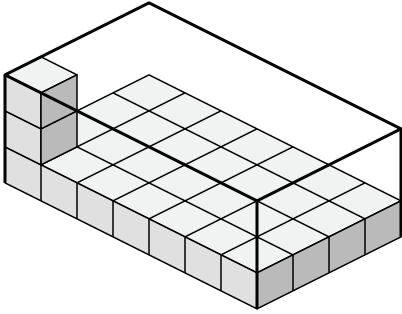


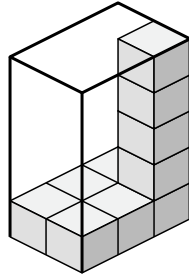


Determina el volumen de cada caja. Cada bloque es de una unidad cúbica ( $u^3$ ).

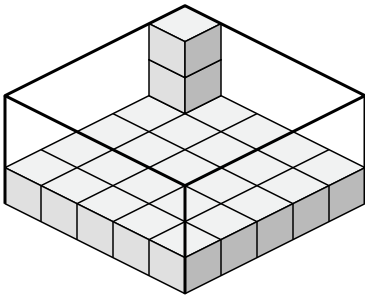
1)



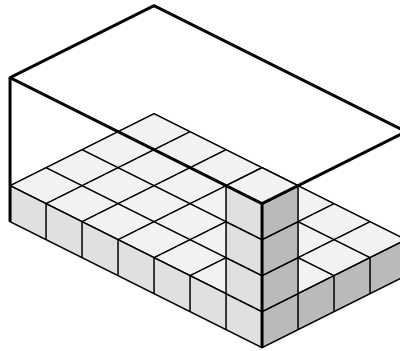
2)



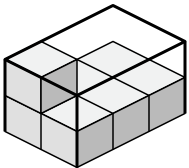
3)



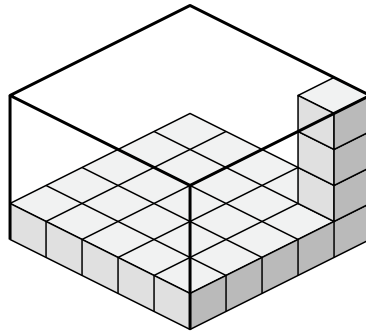
4)



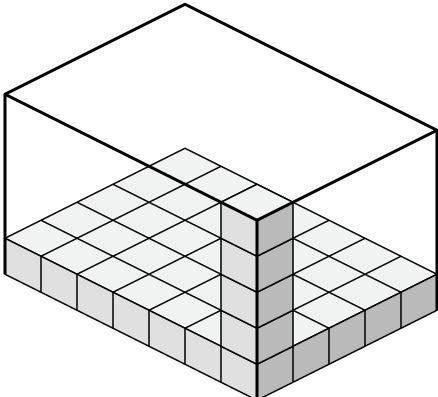
5)



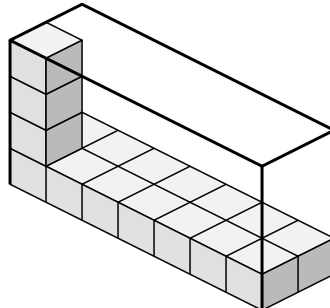
6)



7)



8)



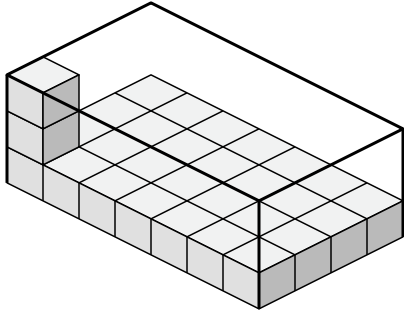
**Respuestas**

- 1. \_\_\_\_\_
- 2. \_\_\_\_\_
- 3. \_\_\_\_\_
- 4. \_\_\_\_\_
- 5. \_\_\_\_\_
- 6. \_\_\_\_\_
- 7. \_\_\_\_\_
- 8. \_\_\_\_\_

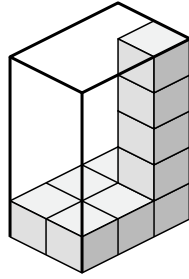


Determina el volumen de cada caja. Cada bloque es de una unidad cúbica ( $u^3$ ).

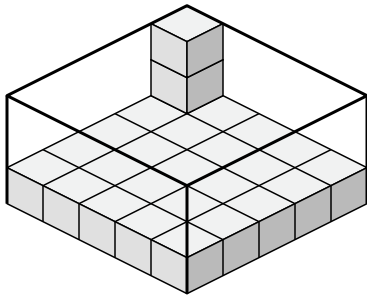
1)



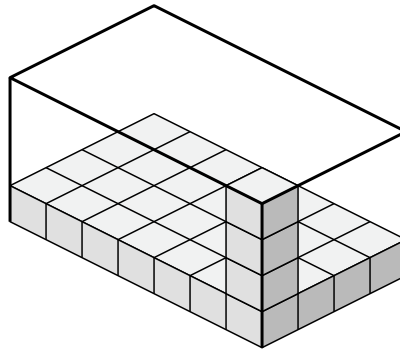
2)



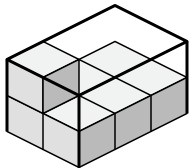
3)



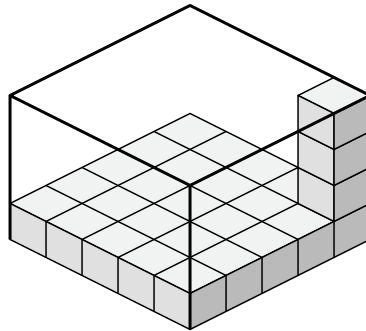
4)



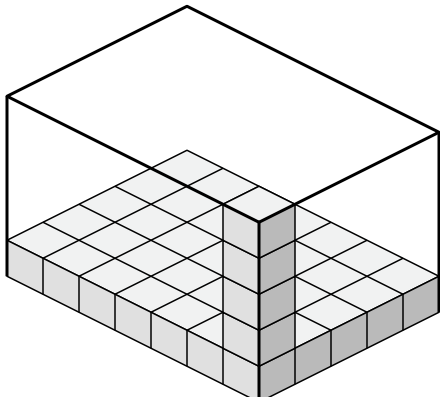
5)



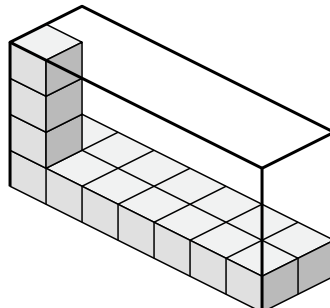
6)



7)



8)



**Respuestas**

1. **84  $u^3$**

2. **30  $u^3$**

3. **75  $u^3$**

4. **112  $u^3$**

5. **12  $u^3$**

6. **100  $u^3$**

7. **175  $u^3$**

8. **56  $u^3$**