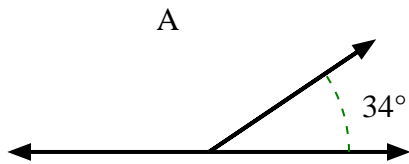




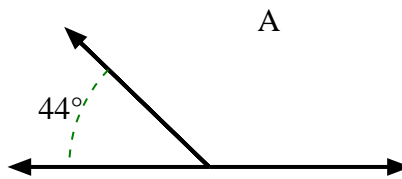
Encuentra el valor de 'A' en el conjunto de ángulos suplementarios.

Respuestas

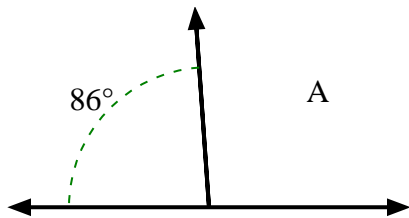
1)



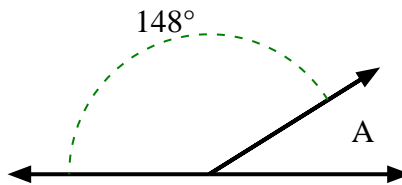
2)



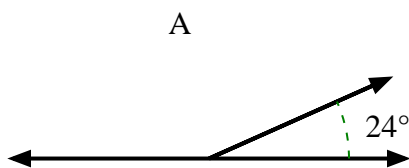
3)



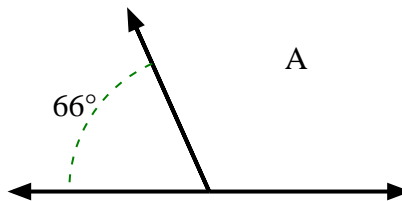
4)



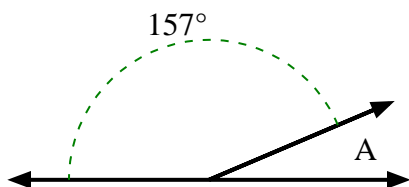
5)



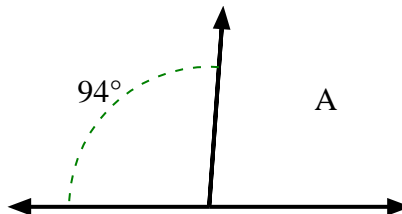
6)



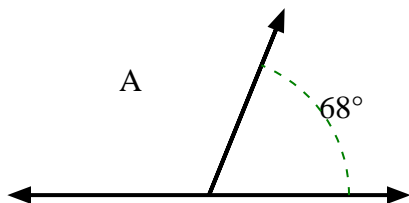
7)



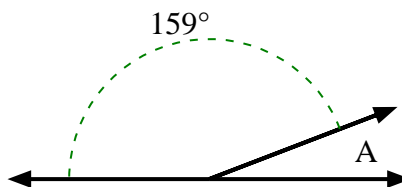
8)



9)



10)

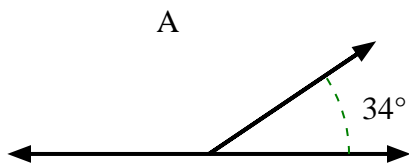


1. _____
2. _____
3. _____
4. _____
5. _____
6. _____
7. _____
8. _____
9. _____
10. _____

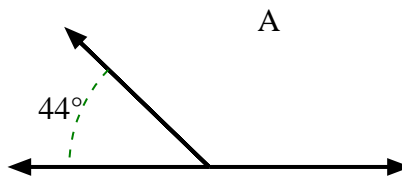


Encuentra el valor de 'A' en el conjunto de ángulos suplementarios.

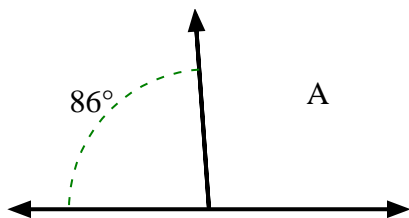
1)



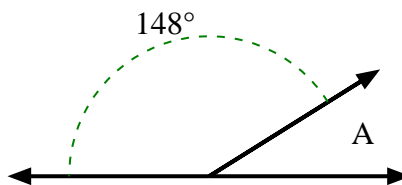
2)



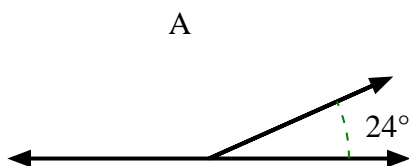
3)



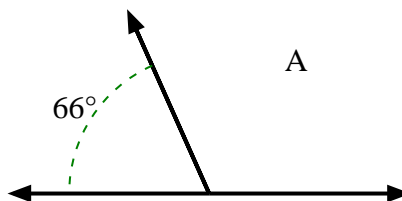
4)



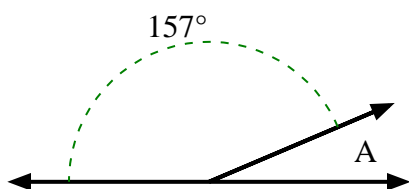
5)



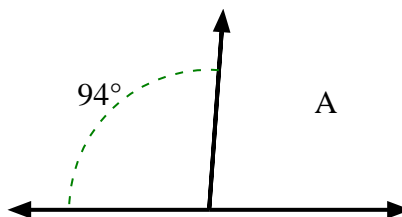
6)



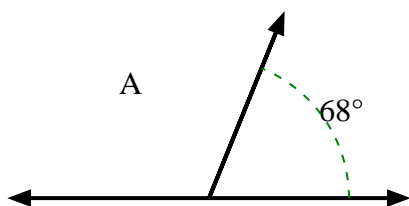
7)



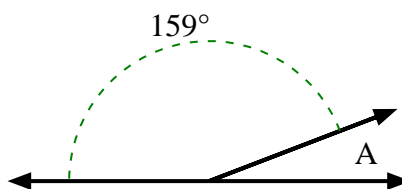
8)



9)



10)

**Respuestas**1. **146°**2. **136°**3. **94°**4. **32°**5. **156°**6. **114°**7. **23°**8. **86°**9. **112°**10. **21°**