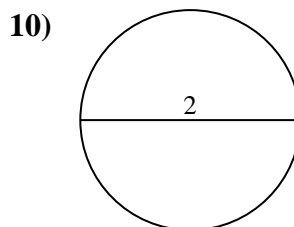
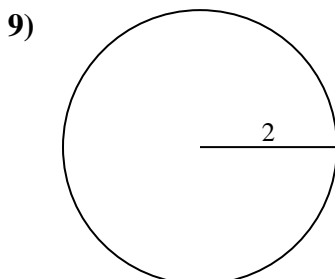
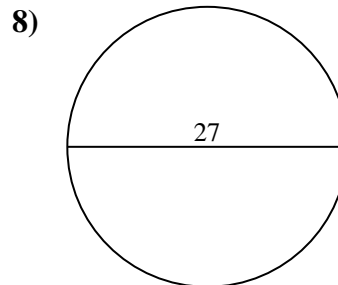
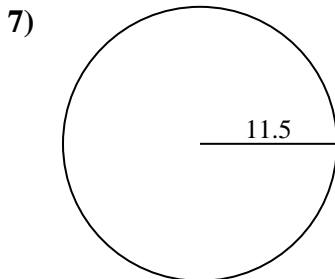
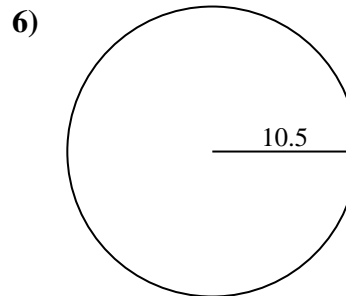
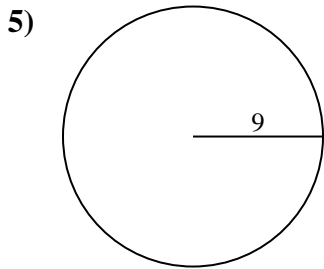
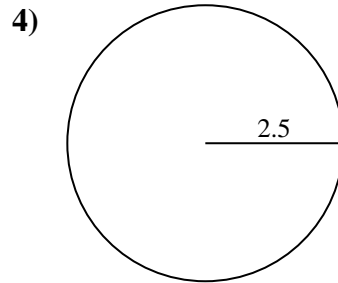
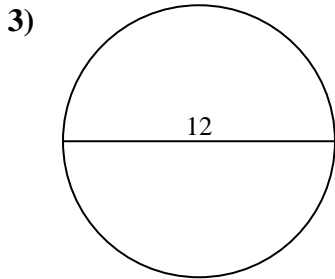
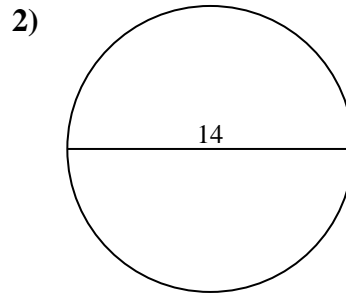
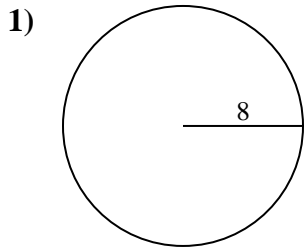




Encuentra el área y circunferencia de cada círculo. Los círculos no están a escala.

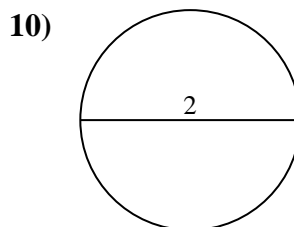
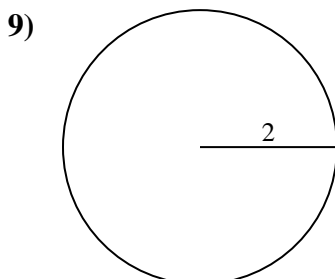
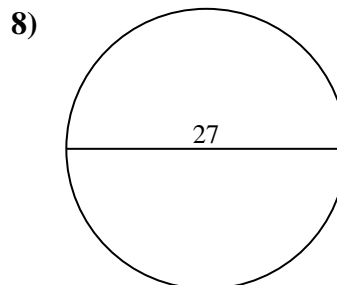
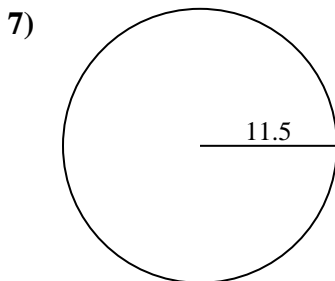
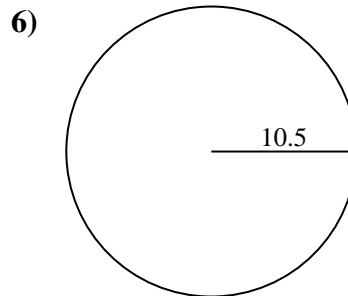
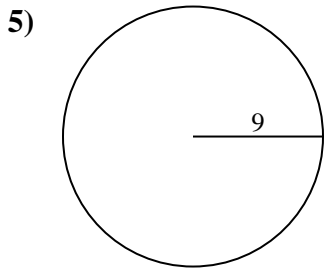
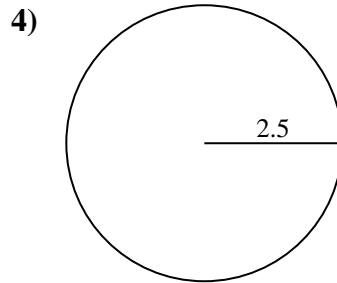
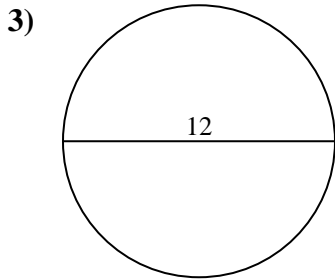
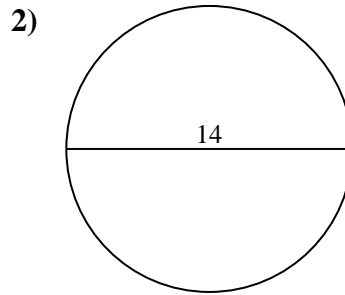
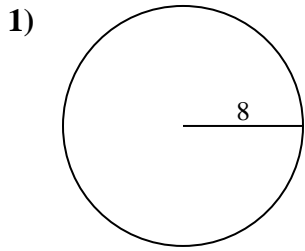


Respuestas

1. _____
2. _____
3. _____
4. _____
5. _____
6. _____
7. _____
8. _____
9. _____
10. _____



Encuentra el área y circunferencia de cada círculo. Los círculos no están a escala.

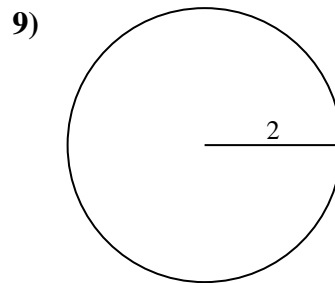
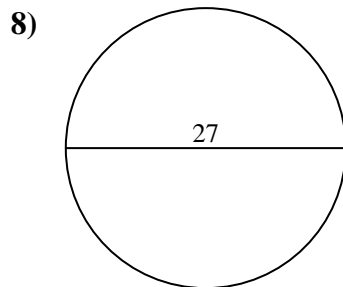
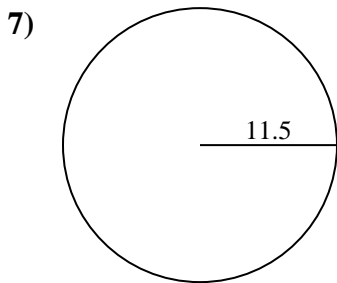
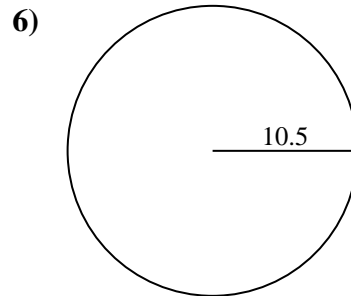
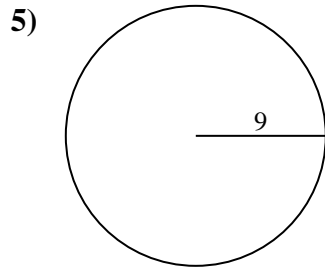
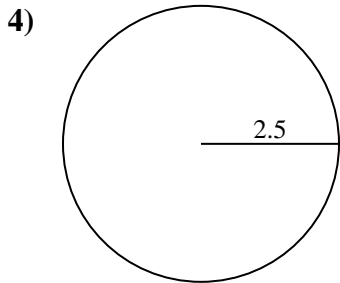
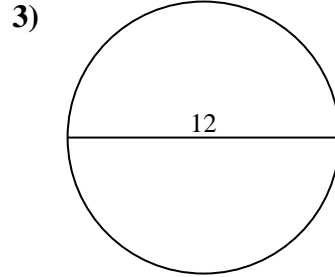
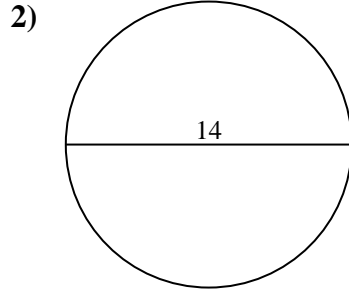
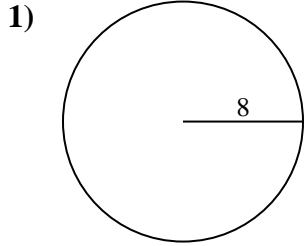
**Respuestas**

| | | |
|-----|--------------|-------------|
| 1. | <u>201.1</u> | <u>50.3</u> |
| 2. | <u>153.9</u> | <u>44</u> |
| 3. | <u>113.1</u> | <u>37.7</u> |
| 4. | <u>19.6</u> | <u>15.7</u> |
| 5. | <u>254.5</u> | <u>56.5</u> |
| 6. | <u>346.4</u> | <u>66</u> |
| 7. | <u>415.5</u> | <u>72.3</u> |
| 8. | <u>572.6</u> | <u>84.8</u> |
| 9. | <u>12.6</u> | <u>12.6</u> |
| 10. | <u>3.1</u> | <u>6.3</u> |



Encuentra el área y circunferencia de cada círculo. Los círculos no están a escala.

| | | | | |
|-------|-------|------|-------|-------|
| 66 | 254.5 | 50.3 | 572.6 | 37.7 |
| 72.3 | 12.6 | 19.6 | 113.1 | 153.9 |
| 15.7 | 346.4 | 56.5 | 201.1 | 84.8 |
| 415.5 | 12.6 | 44 | | |



Respuestas

1. _____
2. _____
3. _____
4. _____
5. _____
6. _____
7. _____
8. _____
9. _____