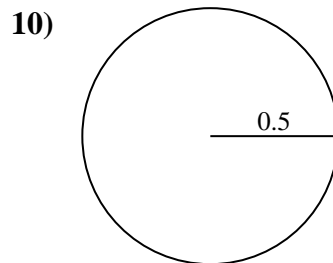
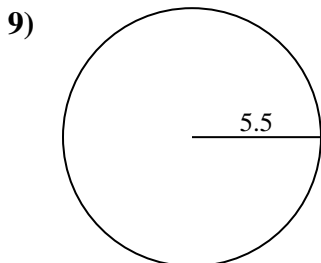
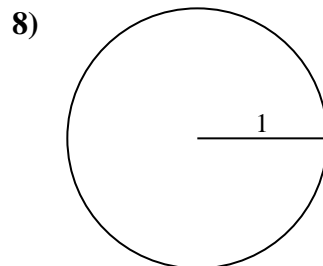
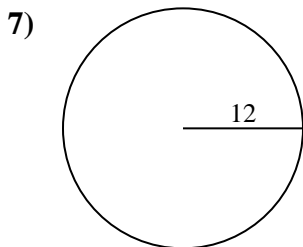
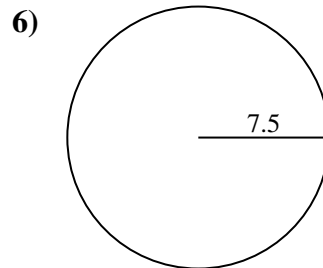
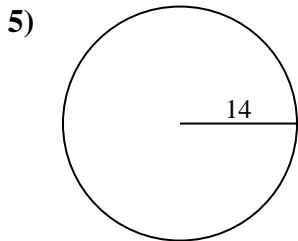
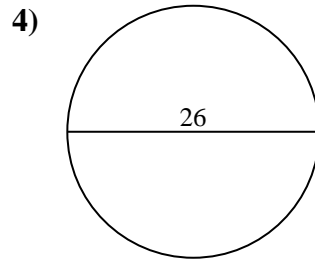
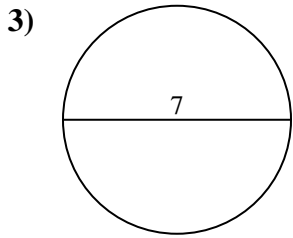
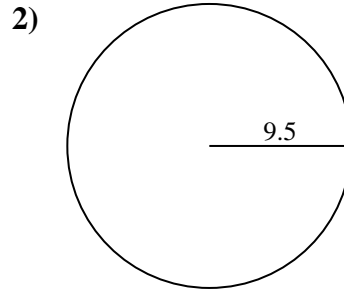
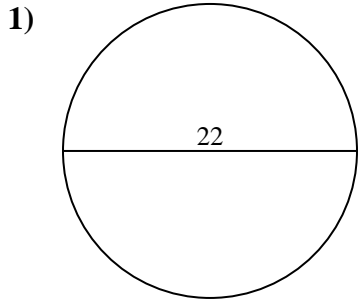




Encuentra el área de cada círculo. Los círculos no están a escala.

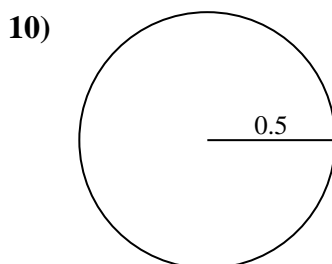
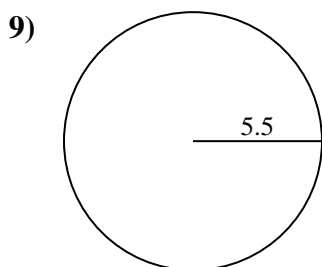
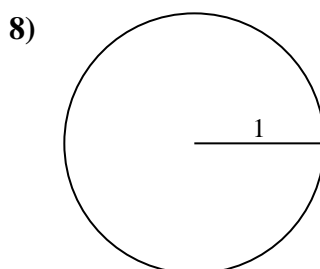
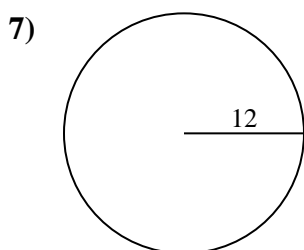
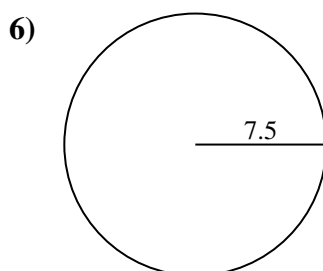
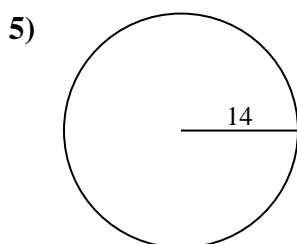
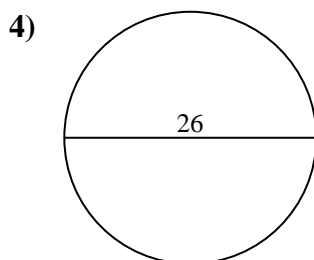
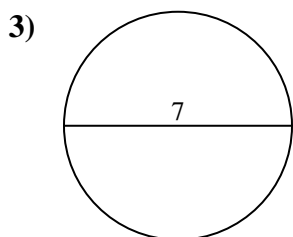
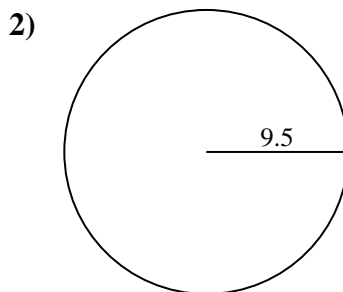
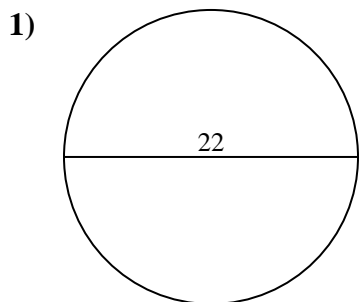


Respuestas

- 1. _____
- 2. _____
- 3. _____
- 4. _____
- 5. _____
- 6. _____
- 7. _____
- 8. _____
- 9. _____
- 10. _____



Encuentra el área de cada círculo. Los círculos no están a escala.



Respuestas

1. 380.1

2. 283.5

3. 38.5

4. 530.9

5. 615.8

6. 176.7

7. 452.4

8. 3.1

9. 95

10. 0.8



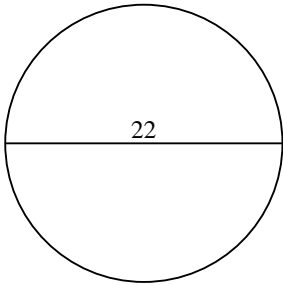
Encuentra el área de cada círculo. Los círculos no están a escala.

176.7	38.5	530.9	283.5	95
615.8	3.1	452.4	380.1	

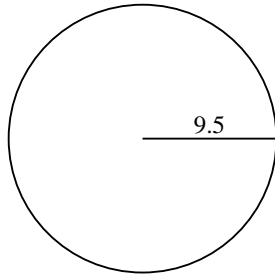
Respuestas

1. _____
2. _____
3. _____
4. _____
5. _____
6. _____
7. _____
8. _____
9. _____

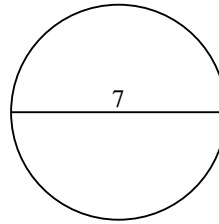
1)



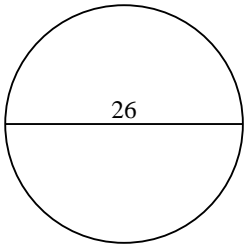
2)



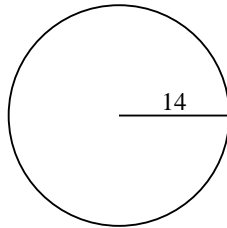
3)



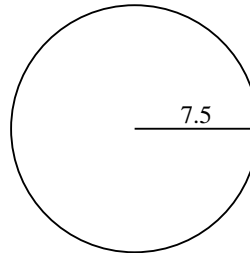
4)



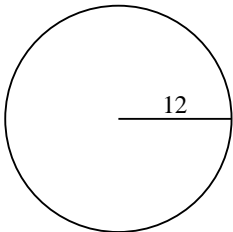
5)



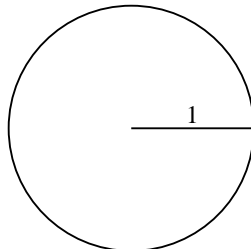
6)



7)



8)



9)

