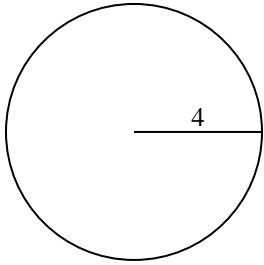


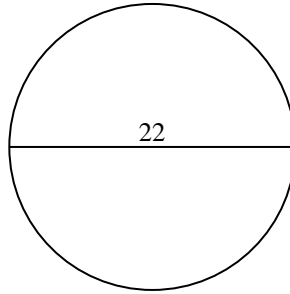


Encuentra el área de cada círculo. Los círculos no están a escala.

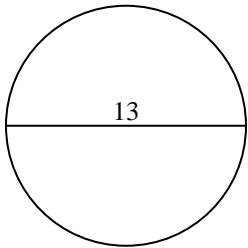
1)



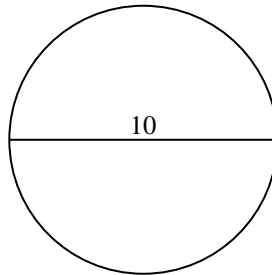
2)



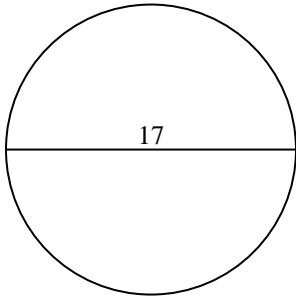
3)



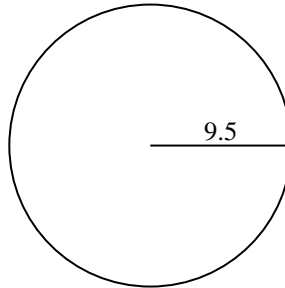
4)



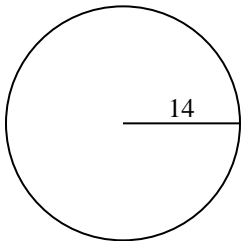
5)



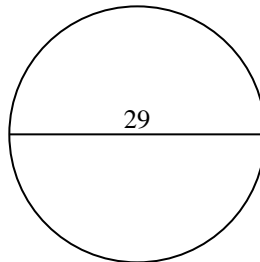
6)



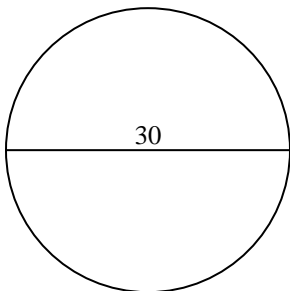
7)



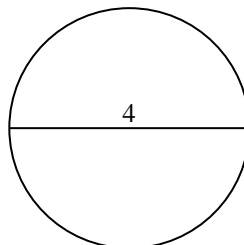
8)



9)



10)

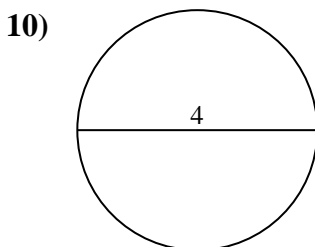
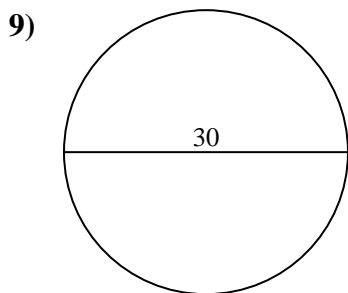
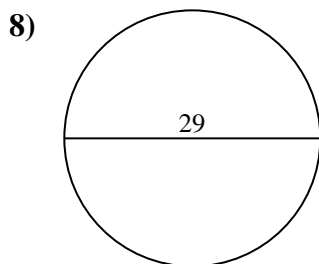
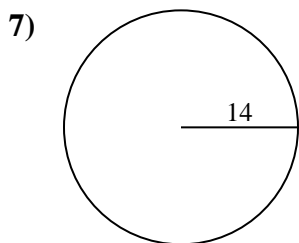
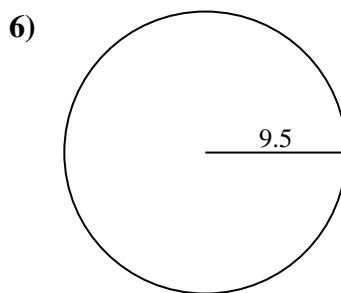
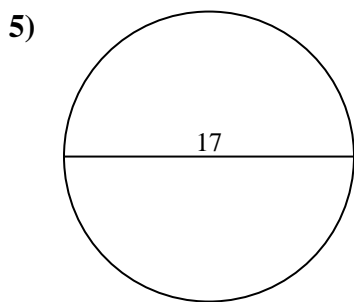
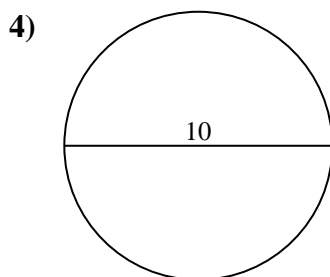
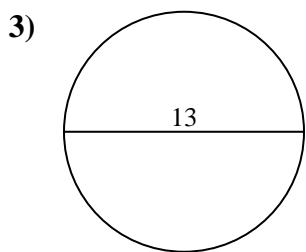
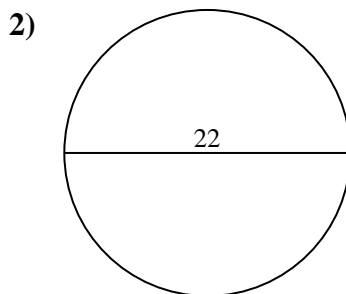
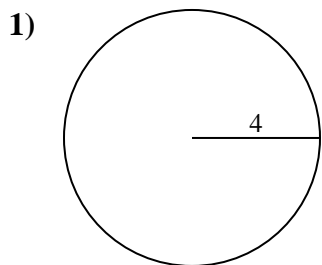


**Respuestas**

- 1. \_\_\_\_\_
- 2. \_\_\_\_\_
- 3. \_\_\_\_\_
- 4. \_\_\_\_\_
- 5. \_\_\_\_\_
- 6. \_\_\_\_\_
- 7. \_\_\_\_\_
- 8. \_\_\_\_\_
- 9. \_\_\_\_\_
- 10. \_\_\_\_\_



Encuentra el área de cada círculo. Los círculos no están a escala.



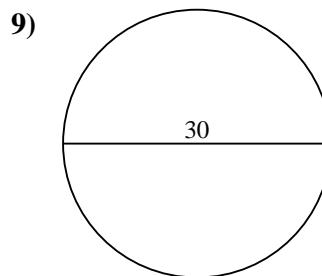
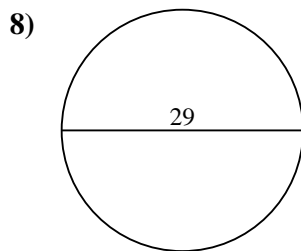
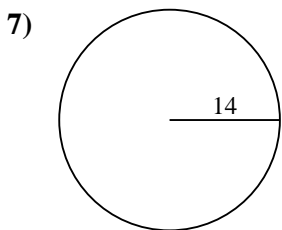
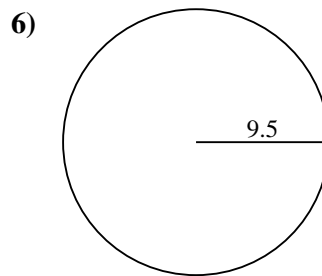
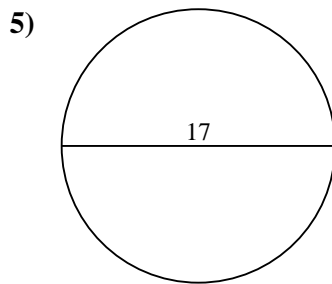
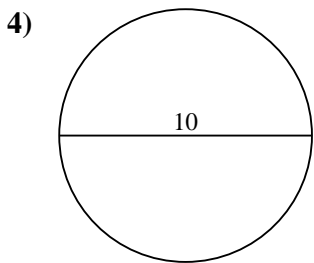
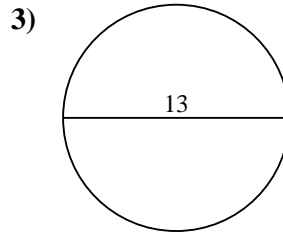
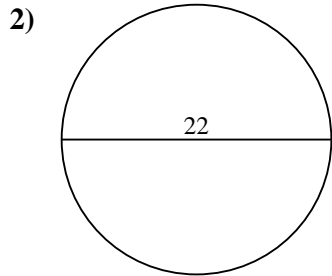
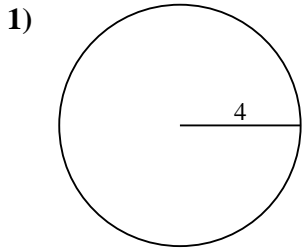
**Respuestas**

- 1. 50.3
- 2. 380.1
- 3. 132.7
- 4. 78.5
- 5. 227
- 6. 283.5
- 7. 615.8
- 8. 660.5
- 9. 706.9
- 10. 12.6



Encuentra el área de cada círculo. Los círculos no están a escala.

78.5	227	660.5	615.8	380.1
283.5	132.7	50.3	706.9	



**Respuestas**

1. \_\_\_\_\_
2. \_\_\_\_\_
3. \_\_\_\_\_
4. \_\_\_\_\_
5. \_\_\_\_\_
6. \_\_\_\_\_
7. \_\_\_\_\_
8. \_\_\_\_\_
9. \_\_\_\_\_