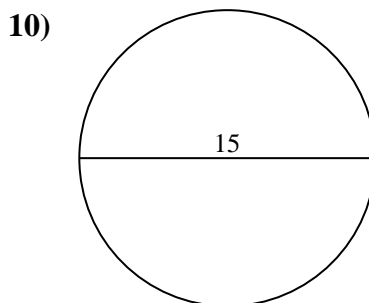
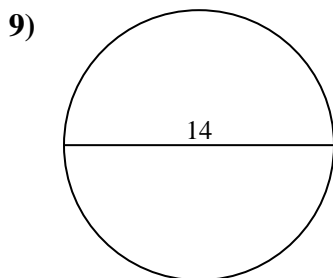
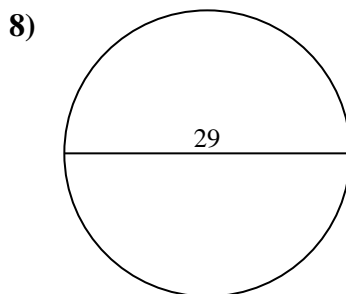
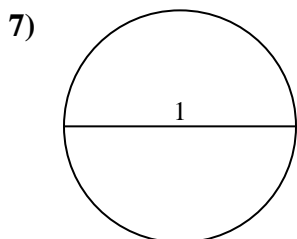
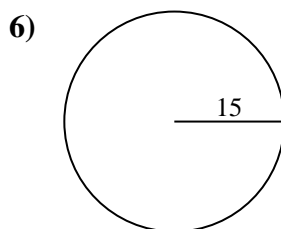
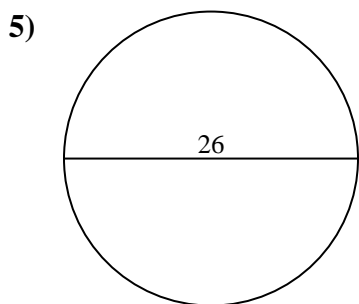
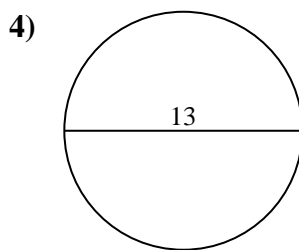
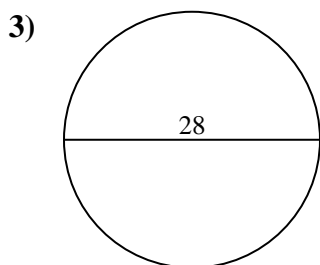
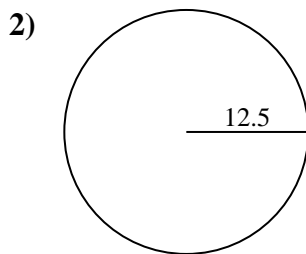
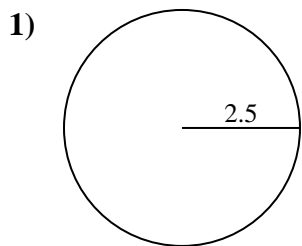




Encuentra el área de cada círculo. Los círculos no están a escala.

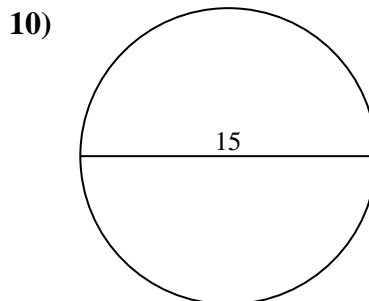
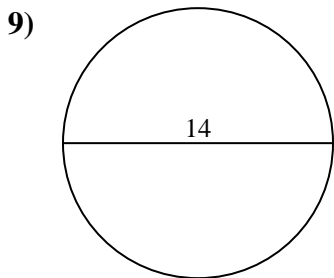
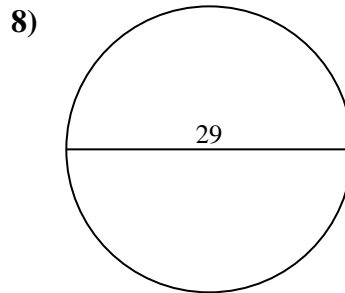
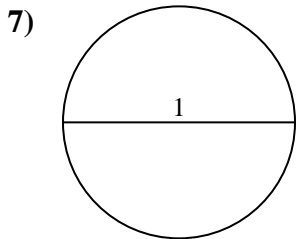
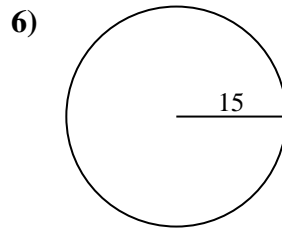
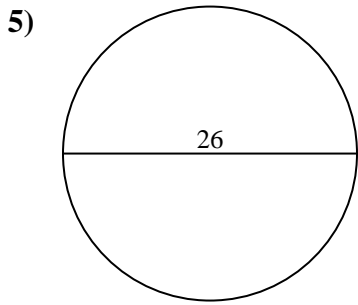
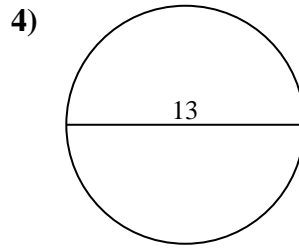
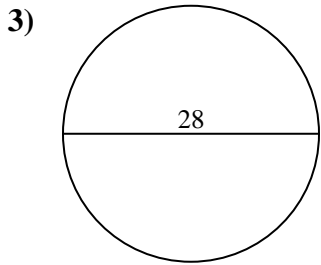
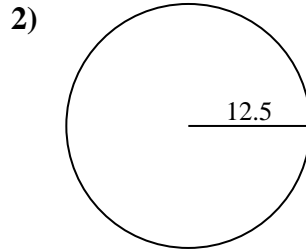
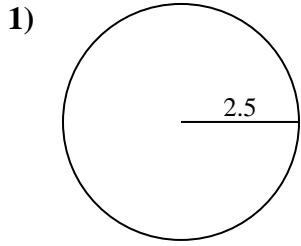


**Respuestas**

- 1. \_\_\_\_\_
- 2. \_\_\_\_\_
- 3. \_\_\_\_\_
- 4. \_\_\_\_\_
- 5. \_\_\_\_\_
- 6. \_\_\_\_\_
- 7. \_\_\_\_\_
- 8. \_\_\_\_\_
- 9. \_\_\_\_\_
- 10. \_\_\_\_\_



Encuentra el área de cada círculo. Los círculos no están a escala.



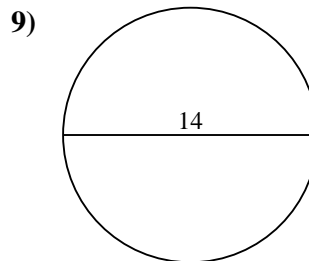
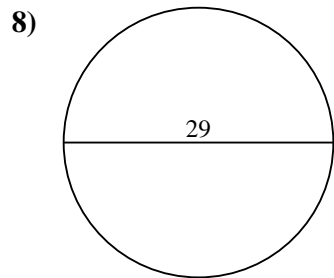
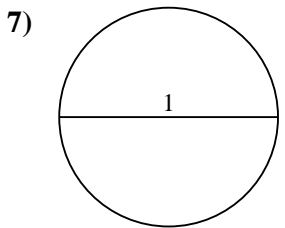
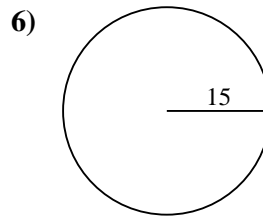
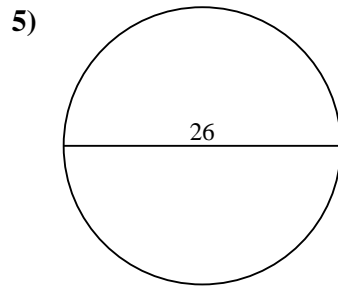
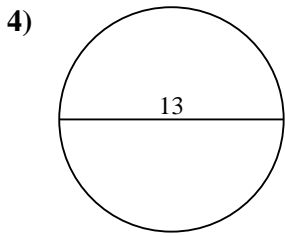
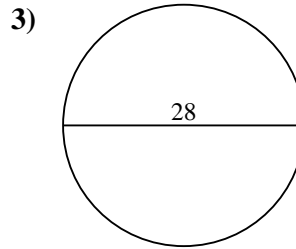
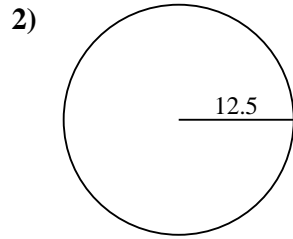
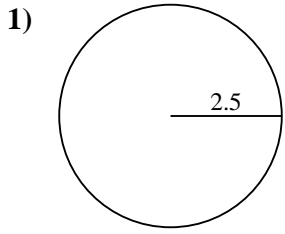
**Respuestas**

- 1. 19.6
- 2. 490.9
- 3. 615.8
- 4. 132.7
- 5. 530.9
- 6. 706.9
- 7. 0.8
- 8. 660.5
- 9. 153.9
- 10. 176.7



Encuentra el área de cada círculo. Los círculos no están a escala.

490.9	615.8	706.9	132.7	153.9
19.6	530.9	0.8	660.5	



**Respuestas**

1. \_\_\_\_\_
2. \_\_\_\_\_
3. \_\_\_\_\_
4. \_\_\_\_\_
5. \_\_\_\_\_
6. \_\_\_\_\_
7. \_\_\_\_\_
8. \_\_\_\_\_
9. \_\_\_\_\_