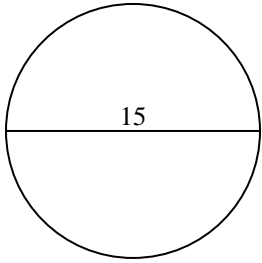


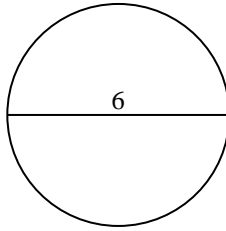


Encuentra el área de cada círculo. Los círculos no están a escala.

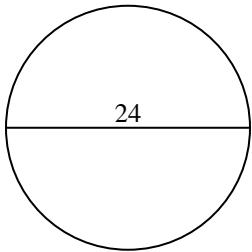
1)



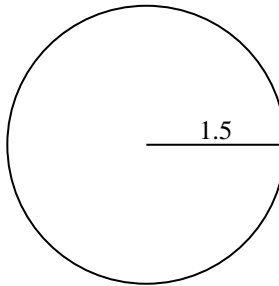
2)



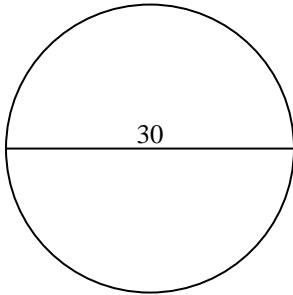
3)



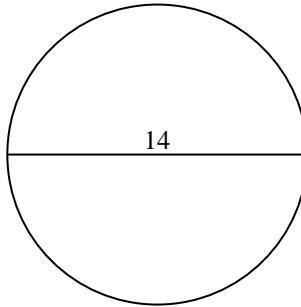
4)



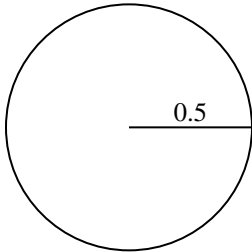
5)



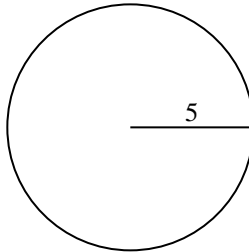
6)



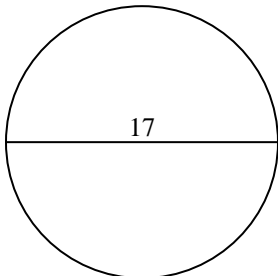
7)



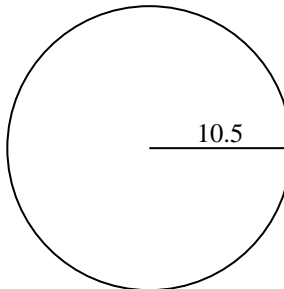
8)



9)



10)

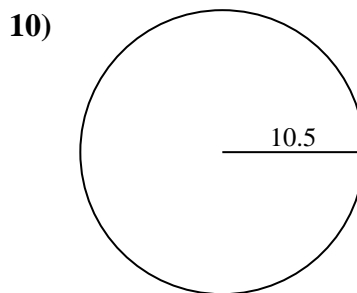
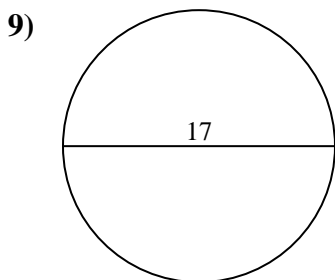
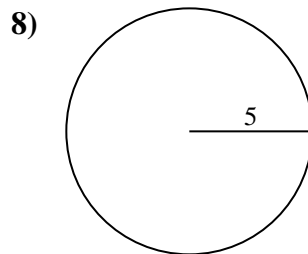
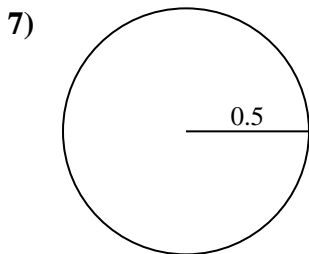
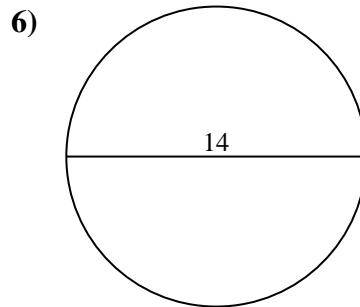
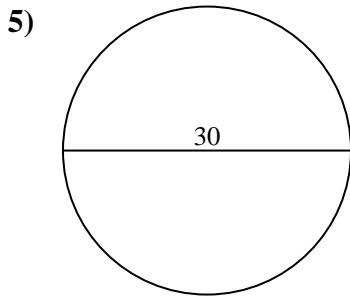
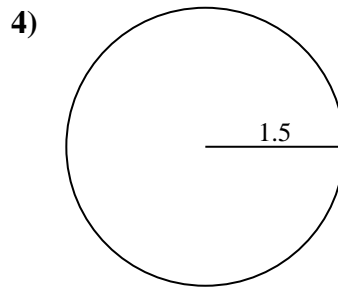
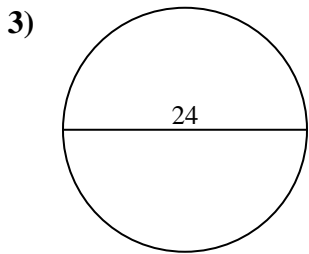
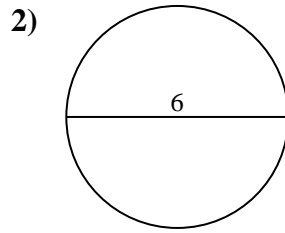
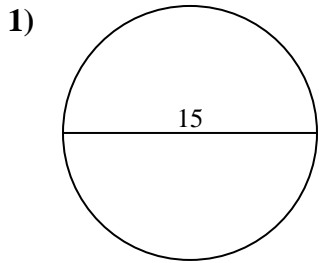


Respuestas

- 1. _____
- 2. _____
- 3. _____
- 4. _____
- 5. _____
- 6. _____
- 7. _____
- 8. _____
- 9. _____
- 10. _____



Encuentra el área de cada círculo. Los círculos no están a escala.



Respuestas

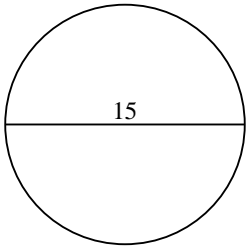
1. 176.7
2. 28.3
3. 452.4
4. 7.1
5. 706.9
6. 153.9
7. 0.8
8. 78.5
9. 227
10. 346.4



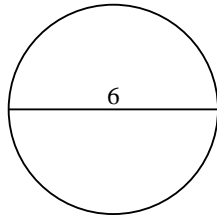
Encuentra el área de cada círculo. Los círculos no están a escala.

452.4	0.8	153.9	7.1	227
28.3	78.5	706.9	176.7	

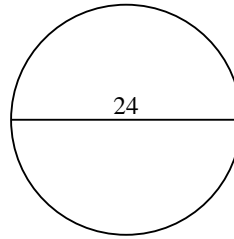
1)



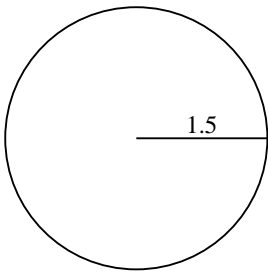
2)



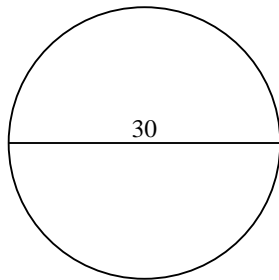
3)



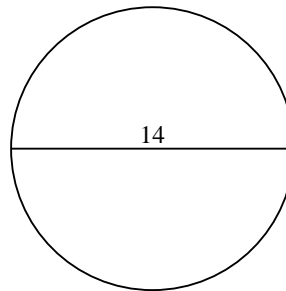
4)



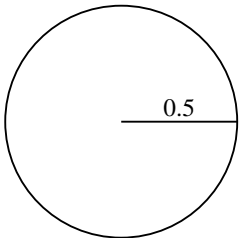
5)



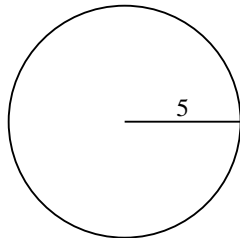
6)



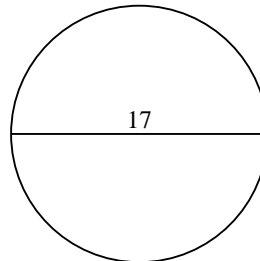
7)



8)



9)



Respuestas

1. _____
2. _____
3. _____
4. _____
5. _____
6. _____
7. _____
8. _____
9. _____