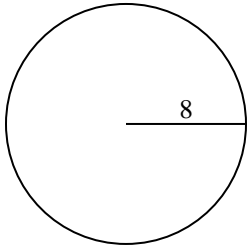


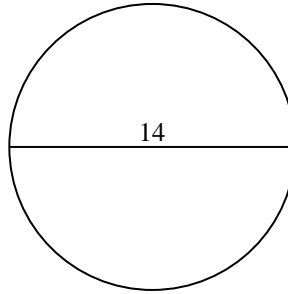


Encuentra el área de cada círculo. Los círculos no están a escala.

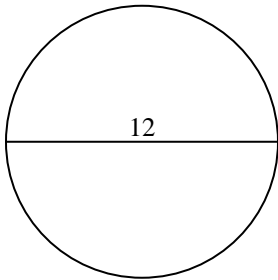
1)



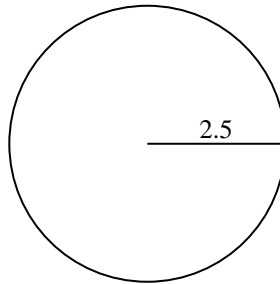
2)



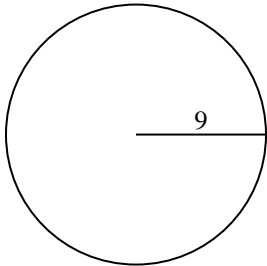
3)



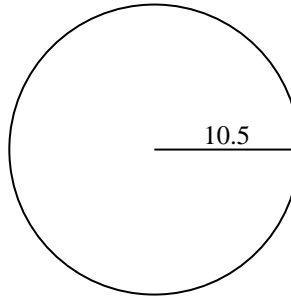
4)



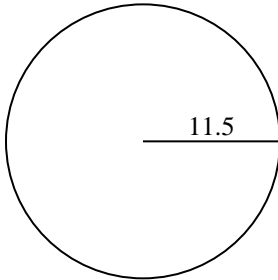
5)



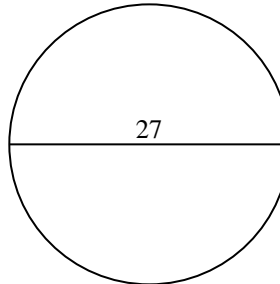
6)



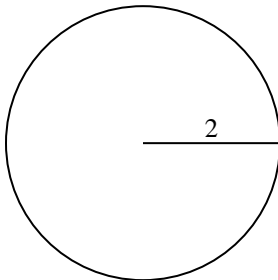
7)



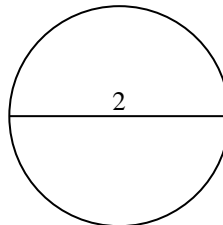
8)



9)



10)

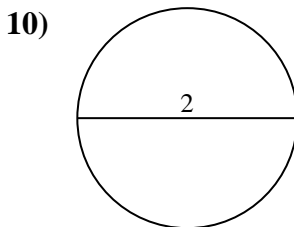
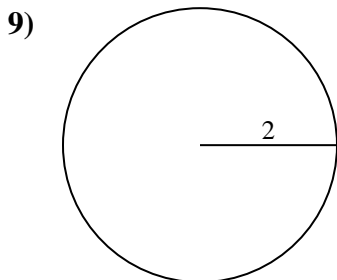
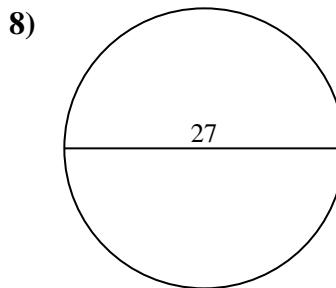
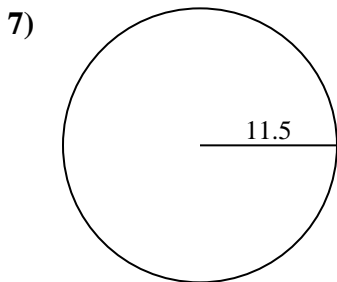
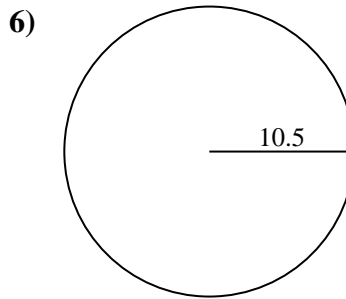
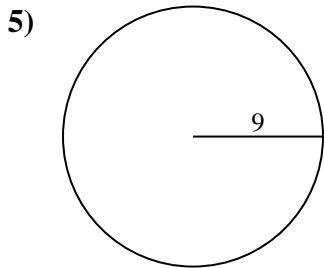
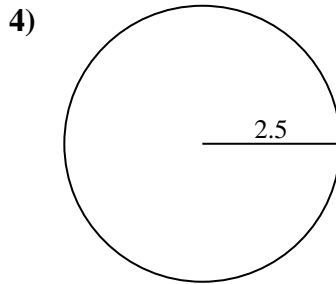
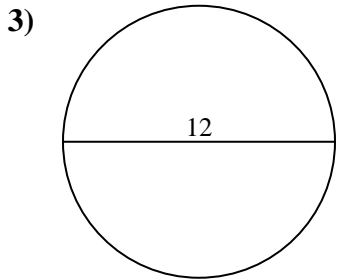
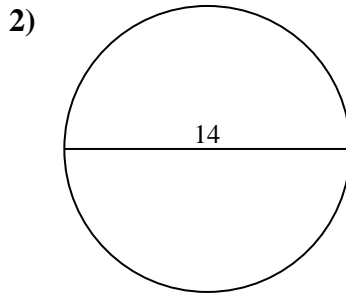
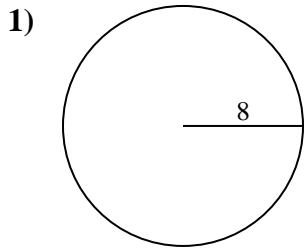


Respuestas

- 1. _____
- 2. _____
- 3. _____
- 4. _____
- 5. _____
- 6. _____
- 7. _____
- 8. _____
- 9. _____
- 10. _____



Encuentra el área de cada círculo. Los círculos no están a escala.



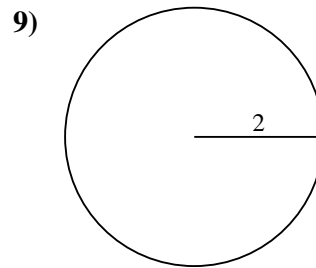
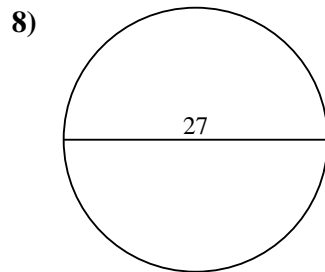
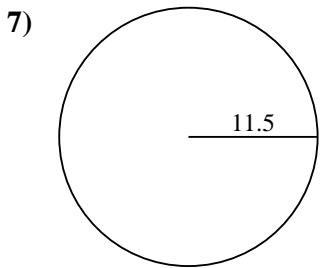
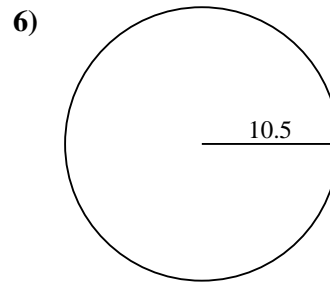
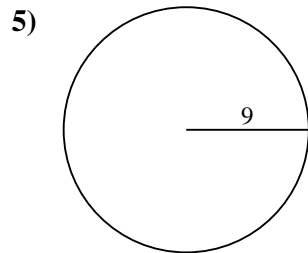
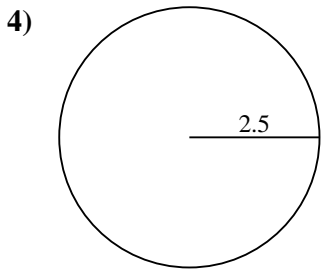
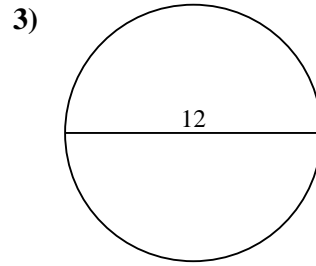
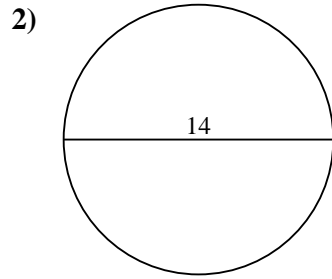
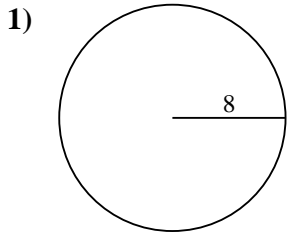
Respuestas

- 1. 201.1
- 2. 153.9
- 3. 113.1
- 4. 19.6
- 5. 254.5
- 6. 346.4
- 7. 415.5
- 8. 572.6
- 9. 12.6
- 10. 3.1



Encuentra el área de cada círculo. Los círculos no están a escala.

572.6	113.1	415.5	12.6	346.4
201.1	153.9	254.5	19.6	



Respuestas

1. _____
2. _____
3. _____
4. _____
5. _____
6. _____
7. _____
8. _____
9. _____