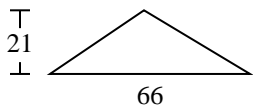




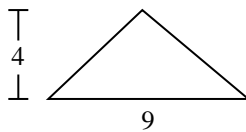
Encuentra el área de cada triángulo. Redondea tu respuesta a la décima más cercana.

Respuestas

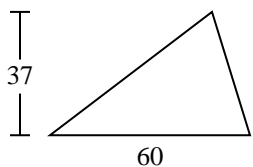
1)



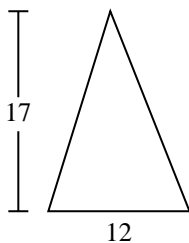
2)



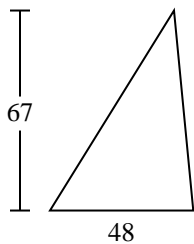
3)



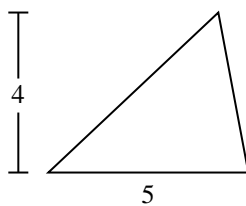
4)



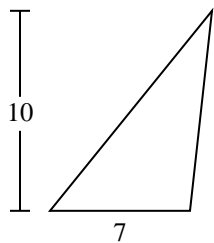
5)



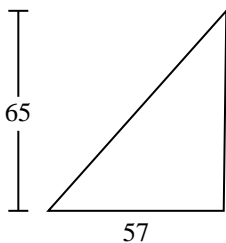
6)



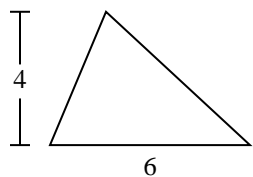
7)



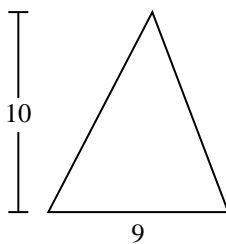
8)



9)



10)

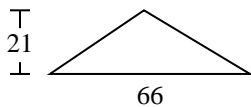


- 1. _____
- 2. _____
- 3. _____
- 4. _____
- 5. _____
- 6. _____
- 7. _____
- 8. _____
- 9. _____
- 10. _____

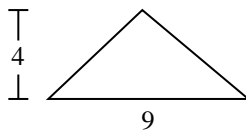


Encuentra el área de cada triángulo. Redondea tu respuesta a la décima más cercana.

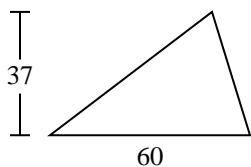
1)



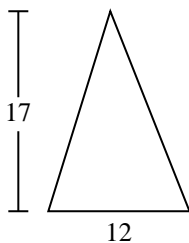
2)



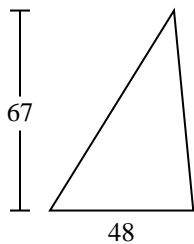
3)



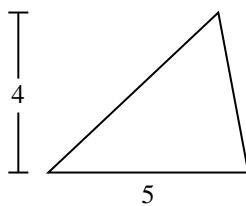
4)



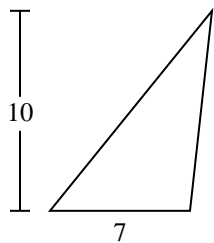
5)



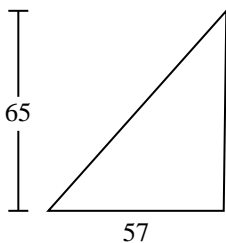
6)



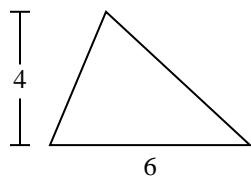
7)



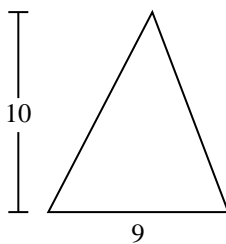
8)



9)



10)

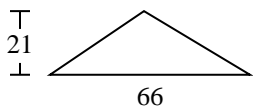
**Respuestas**1. **693**2. **18**3. **1,110**4. **102**5. **1,608**6. **10**7. **35**8. **1,852.5**9. **12**10. **45**



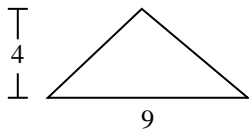
Encuentra el área de cada triángulo. Redondea tu respuesta a la décima más cercana.

1,110	693	102	1,852.5	10
18	12	1,608	35	

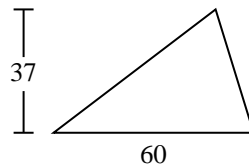
1)



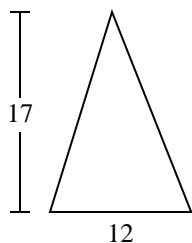
2)



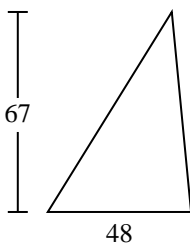
3)



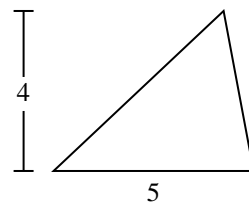
4)



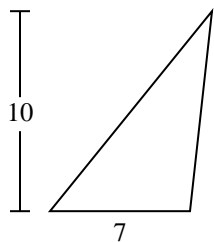
5)



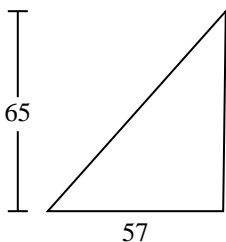
6)



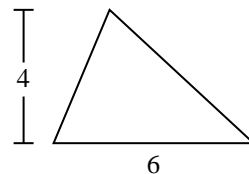
7)



8)



9)



Respuestas

1. _____
2. _____
3. _____
4. _____
5. _____
6. _____
7. _____
8. _____
9. _____