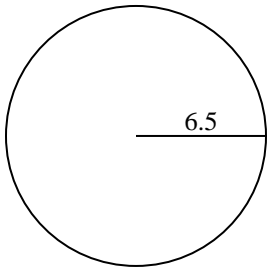


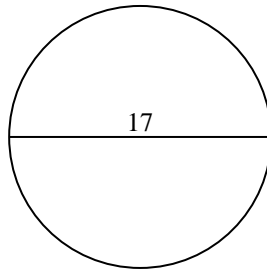


Encuentra la circunferencia de cada círculo. Los círculos no están a escala.

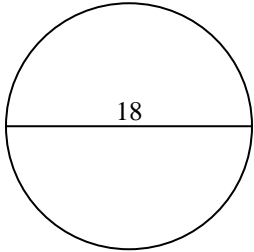
1)



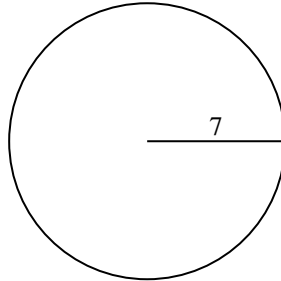
2)



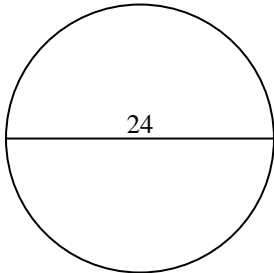
3)



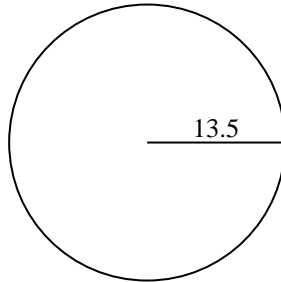
4)



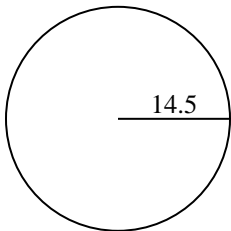
5)



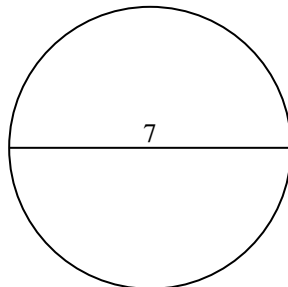
6)



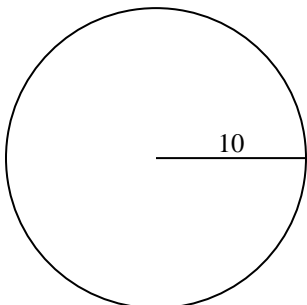
7)



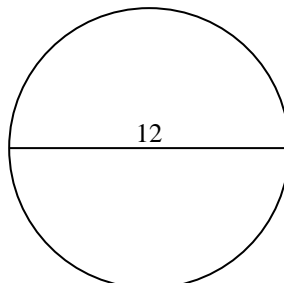
8)



9)



10)

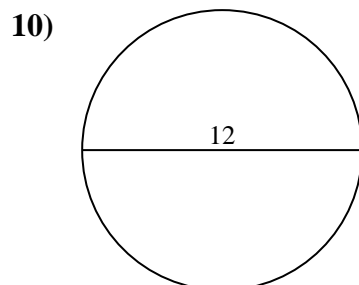
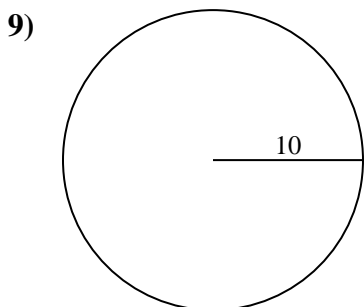
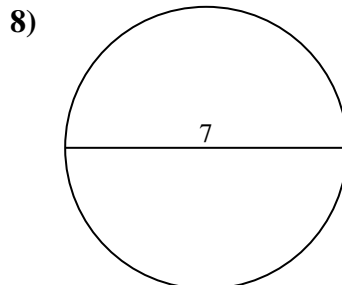
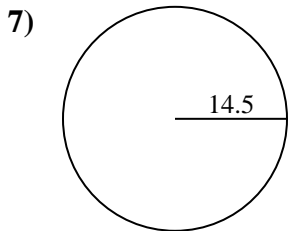
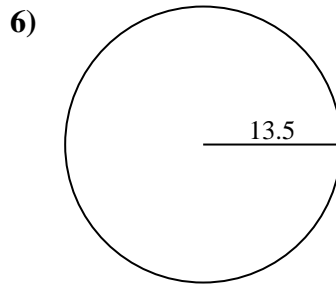
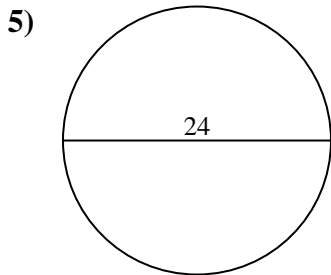
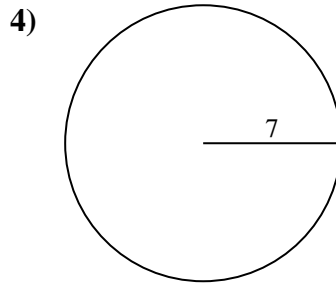
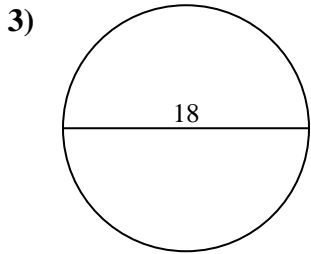
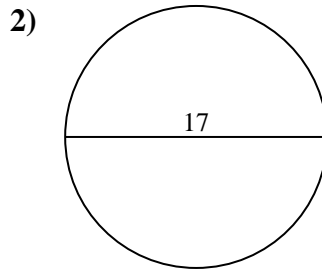
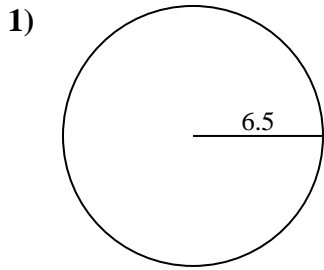


**Respuestas**

- 1. \_\_\_\_\_
- 2. \_\_\_\_\_
- 3. \_\_\_\_\_
- 4. \_\_\_\_\_
- 5. \_\_\_\_\_
- 6. \_\_\_\_\_
- 7. \_\_\_\_\_
- 8. \_\_\_\_\_
- 9. \_\_\_\_\_
- 10. \_\_\_\_\_



Encuentra la circunferencia de cada círculo. Los círculos no están a escala.



**Respuestas**

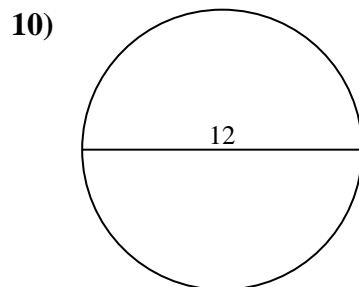
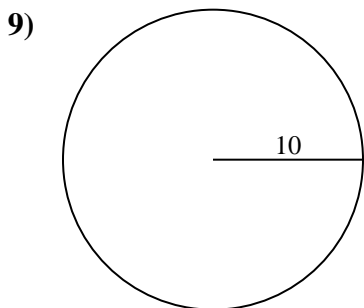
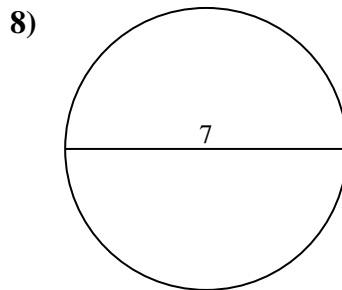
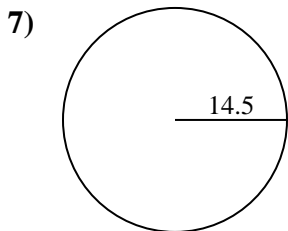
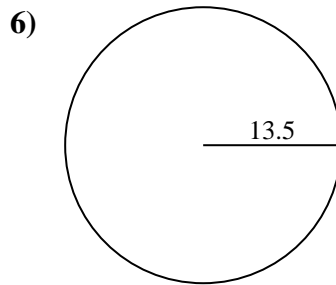
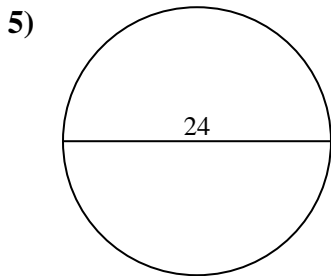
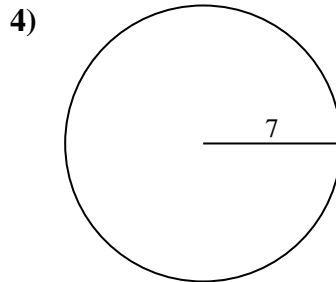
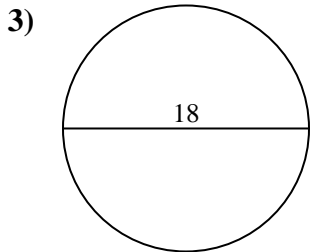
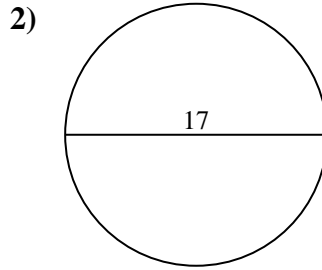
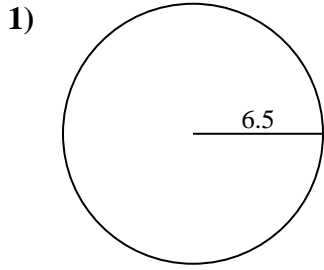
1. 40.84 cm
2. 53.41 cm
3. 56.55 cm
4. 43.98 cm
5. 75.4 cm
6. 84.82 cm
7. 91.11 cm
8. 21.99 cm
9. 62.83 cm
10. 37.7 cm



Encuentra la circunferencia de cada círculo. Los círculos no están a escala.

**Respuestas**

37.7 cm	91.11 cm	75.4 cm	62.83 cm	53.41 cm
43.98 cm	21.99 cm	40.84 cm	84.82 cm	56.55 cm



1. \_\_\_\_\_
2. \_\_\_\_\_
3. \_\_\_\_\_
4. \_\_\_\_\_
5. \_\_\_\_\_
6. \_\_\_\_\_
7. \_\_\_\_\_
8. \_\_\_\_\_
9. \_\_\_\_\_
10. \_\_\_\_\_