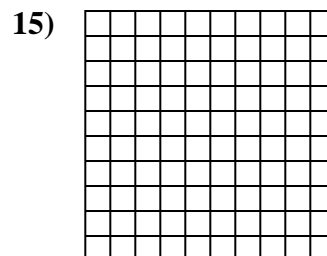
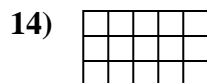
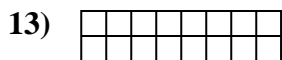
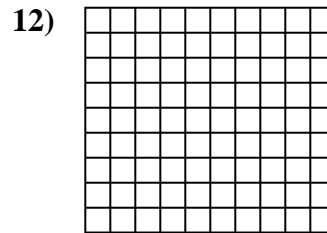
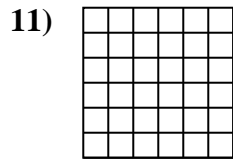
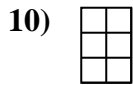
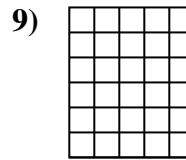

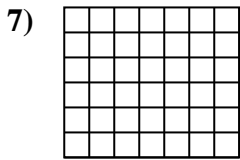

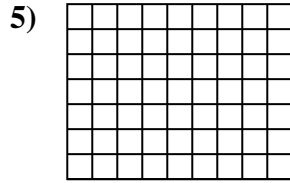
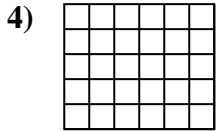
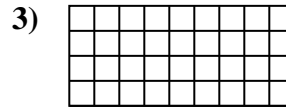
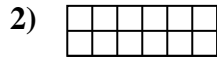
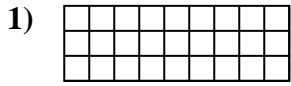




Determina el área. Cada SVGREPLACE = 1 unidad (u<sup>2</sup>)

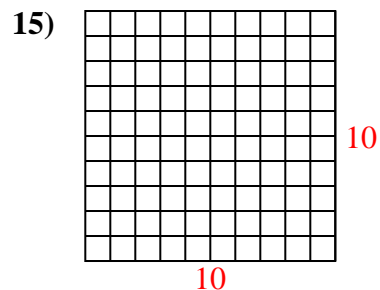
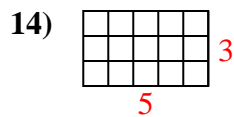
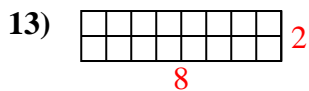
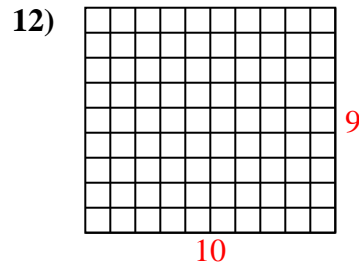
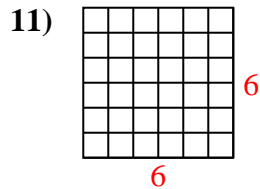
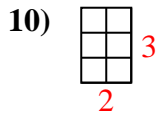
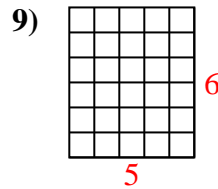
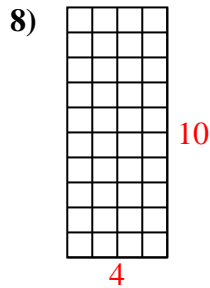
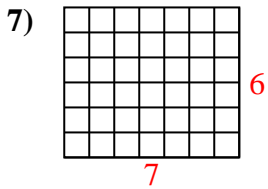
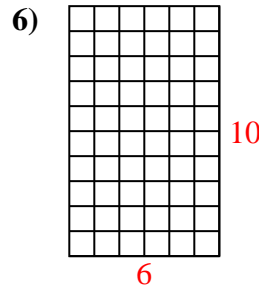
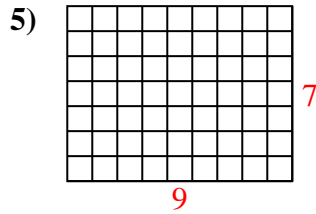
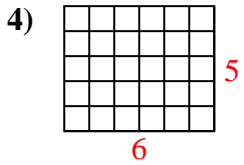
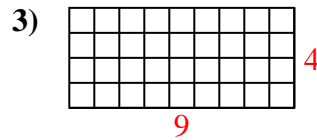
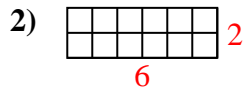
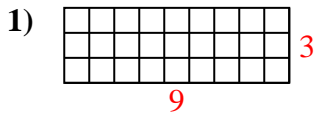


**Respuestas**

- 1. \_\_\_\_\_
- 2. \_\_\_\_\_
- 3. \_\_\_\_\_
- 4. \_\_\_\_\_
- 5. \_\_\_\_\_
- 6. \_\_\_\_\_
- 7. \_\_\_\_\_
- 8. \_\_\_\_\_
- 9. \_\_\_\_\_
- 10. \_\_\_\_\_
- 11. \_\_\_\_\_
- 12. \_\_\_\_\_
- 13. \_\_\_\_\_
- 14. \_\_\_\_\_
- 15. \_\_\_\_\_



Determina el área. Cada SVGREPLACE = 1 unidad ( $u^2$ )



**Respuestas**

1. 27  $u^2$

2. 12  $u^2$

3. 36  $u^2$

4. 30  $u^2$

5. 63  $u^2$

6. 60  $u^2$

7. 42  $u^2$

8. 40  $u^2$

9. 30  $u^2$

10. 6  $u^2$

11. 36  $u^2$

12. 90  $u^2$

13. 16  $u^2$

14. 15  $u^2$

15. 100  $u^2$