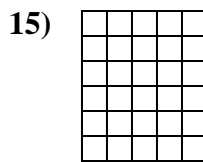
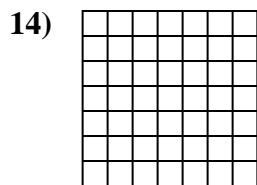
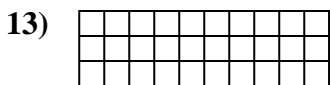

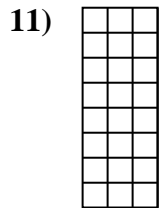
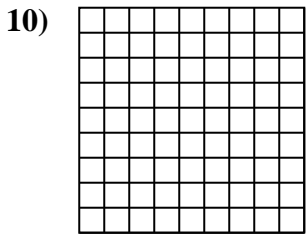
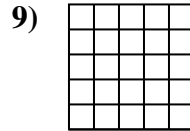
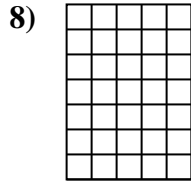
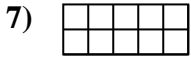
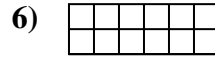
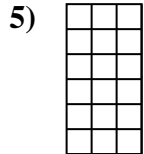
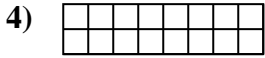
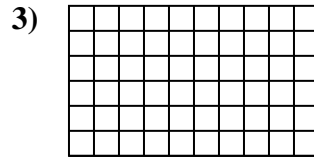
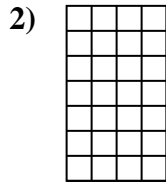
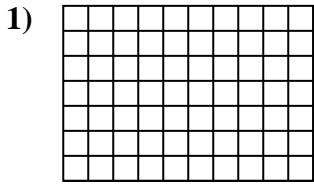




Determina el área. Cada SVGREPLACE = 1 unidad (u<sup>2</sup>)



**Respuestas**

1. \_\_\_\_\_

2. \_\_\_\_\_

3. \_\_\_\_\_

4. \_\_\_\_\_

5. \_\_\_\_\_

6. \_\_\_\_\_

7. \_\_\_\_\_

8. \_\_\_\_\_

9. \_\_\_\_\_

10. \_\_\_\_\_

11. \_\_\_\_\_

12. \_\_\_\_\_

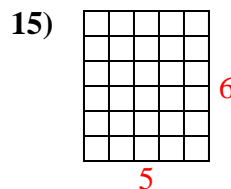
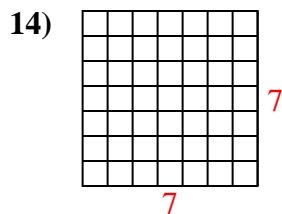
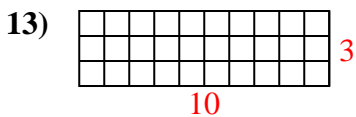
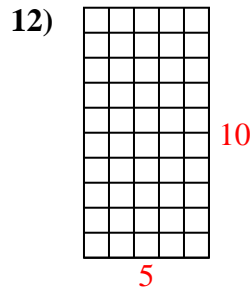
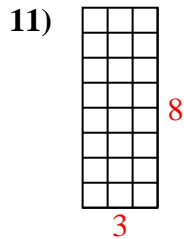
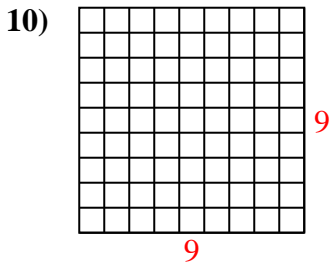
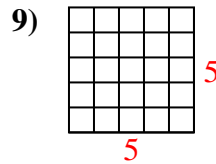
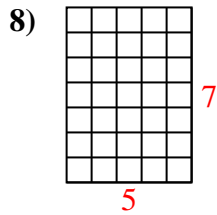
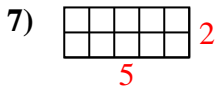
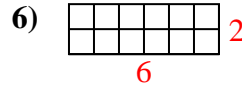
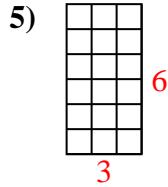
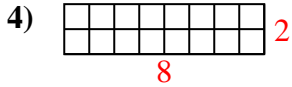
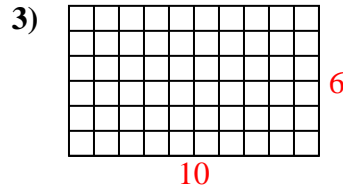
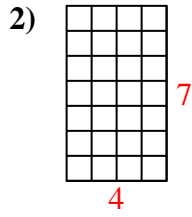
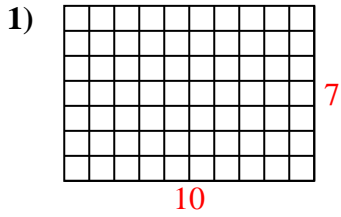
13. \_\_\_\_\_

14. \_\_\_\_\_

15. \_\_\_\_\_



Determina el área. Cada SVGREPLACE = 1 unidad ( $u^2$ )



**Respuestas**

1. 70  $u^2$

2. 28  $u^2$

3. 60  $u^2$

4. 16  $u^2$

5. 18  $u^2$

6. 12  $u^2$

7. 10  $u^2$

8. 35  $u^2$

9. 25  $u^2$

10. 81  $u^2$

11. 24  $u^2$

12. 50  $u^2$

13. 30  $u^2$

14. 49  $u^2$

15. 30  $u^2$